



UNIVERSITY OF CAMBRIDGE INTERNATIONAL EXAMINATIONS
International General Certificate of Secondary Education

www.PapaCambridge.com

GEOGRAPHY

0460/41

Paper 4 Alternative to Coursework

May/June 2010

INSERT

1 hour 30 minutes

READ THESE INSTRUCTIONS FIRST

This Insert contains Photograph A, Tables 1 and 3 and Fig. 5 for Question 1 and Fig. 6 and Table 4 for Question 2.

The Insert is **not** required by the Examiner.

This document consists of **5** printed pages and **3** blank pages.



Photograph A for Question 1




Table 1 for Question 1

Longshore drift and pebble movement

Distance from starting point (m)	Number of pebbles	Average length of long axis (cm)
0 – 10	3	5.9
10 – 20	10	5.3
20 – 30	14	5.1
30 – 40	13	4.6
40 – 50	8	4.0
50 – 60	2	3.2

Table 3 for Question 1

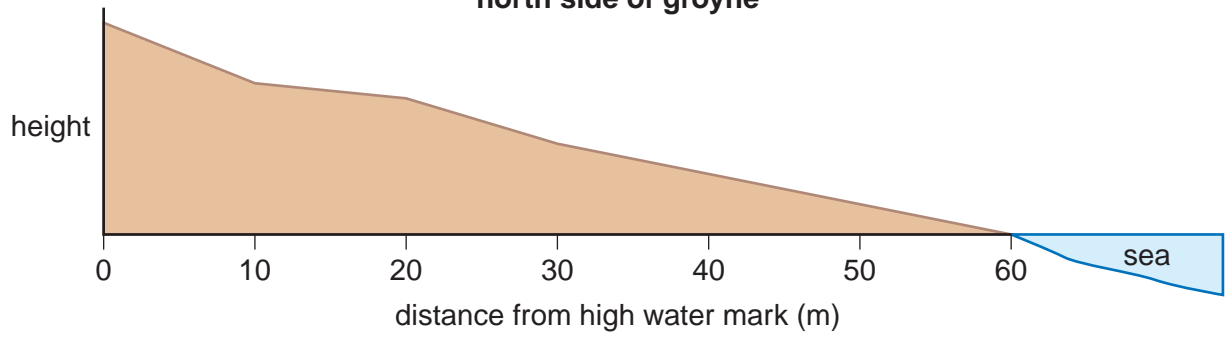
Data for beach profiles

Distance from high water mark (m)	Angle of slope (degrees)	
	North side of groyne	South side of groyne
0 to 10	19	8
10 to 20	8	7
20 to 30	14	6
30 to 40	10	6
40 to 50	14	5
50 to 60	9	4

Fig. 5 for Question 1

Beach profiles

north side of groyne



south side of groyne

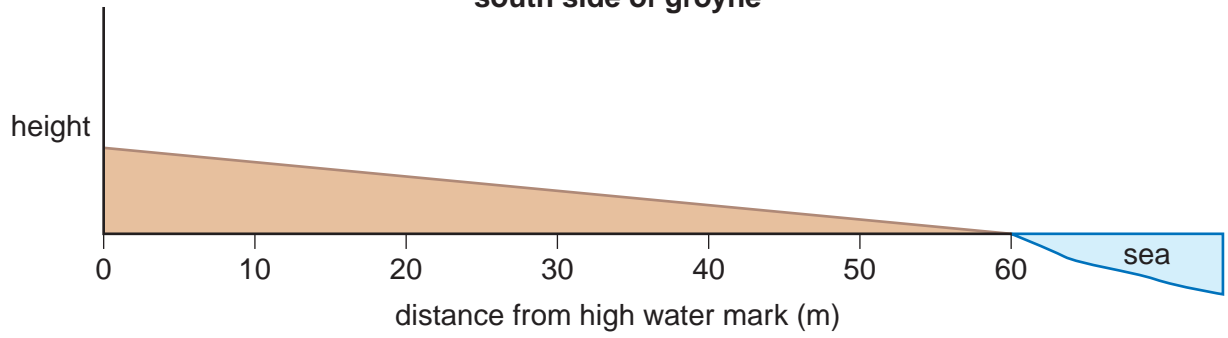


Fig. 6 for Question 2

Centre of town

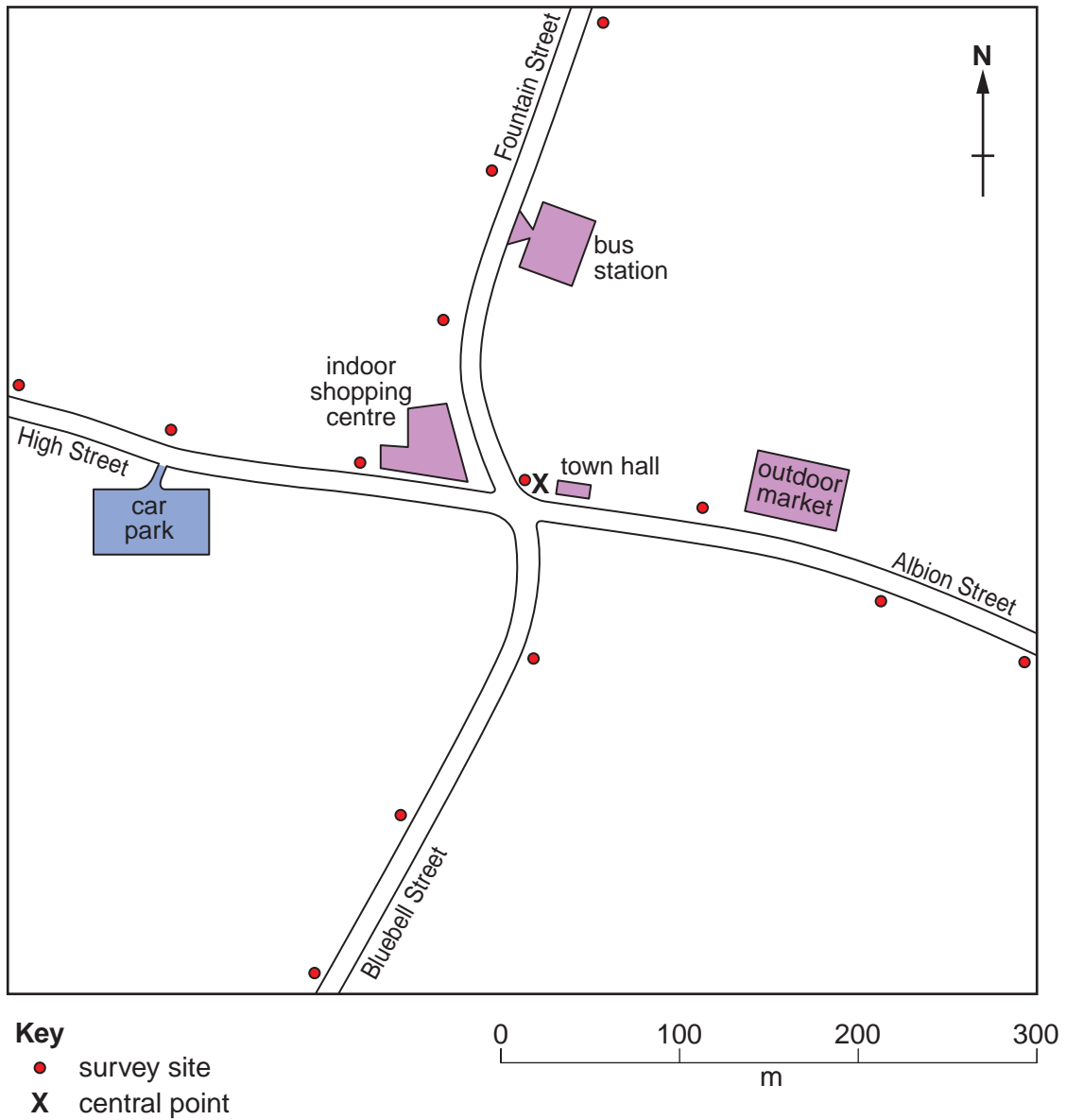


Table 4 for Question 2

Results of survey sites on Bluebell Street

Distance from central point (m)	Time					Total number of pedestrians
	08.00–08.10	10.30–10.40	13.00–13.10	15.30–15.40	18.00–18.10	
100	30	25	28	16	12	111
200	17	12	11	6	5	51
300	12	6	7	4	3	32

Copyright Acknowledgements:

Permission to reproduce items where third-party owned material protected by copyright is included has been sought and cleared where possible. Every reasonable effort has been made by the publisher (UCLES) to trace copyright holders, but if any items requiring clearance have unwittingly been included, the publisher will be pleased to make amends at the earliest possible opportunity.

University of Cambridge International Examinations is part of the Cambridge Assessment Group. Cambridge Assessment is the brand name of University of