



Cambridge O Level

COMMERCE

7100/12

Paper 1 Multiple Choice

October/November 2020

1 hour

You must answer on the multiple choice answer sheet.

You will need: Multiple choice answer sheet
Soft clean eraser
Soft pencil (type B or HB is recommended)


INSTRUCTIONS

- There are **forty** questions on this paper. Answer **all** questions.
- For each question there are four possible answers **A, B, C** and **D**. Choose the **one** you consider correct and record your choice in soft pencil on the multiple choice answer sheet.
- Follow the instructions on the multiple choice answer sheet.
- Write in soft pencil.
- Write your name, centre number and candidate number on the multiple choice answer sheet in the spaces provided unless this has been done for you.
- Do **not** use correction fluid.
- Do **not** write on any bar codes.
- You may use a calculator.

INFORMATION

- The total mark for this paper is 40.
- Each correct answer will score one mark. A mark will not be deducted for a wrong answer.
- Any rough working should be done on this question paper.

This document has **12** pages. Blank pages are indicated.



1 Producers need to satisfy human needs and wants.

Which example is a human need?

- A clothing
- B entertainment
- C social media
- D transport

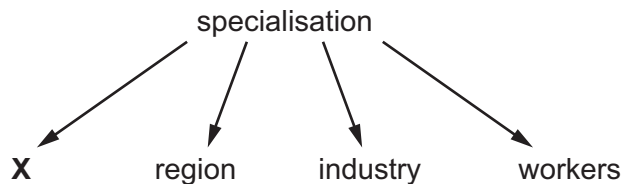
2 The table shows numbers of workers (000s) employed in industries in a country.

	(000s)
agriculture	1 000
engineering	4 000
mining	600
steelmaking	3 000
	8 600

What is the total number of workers employed in the secondary sector?

- A 1 600 000
- B 3 000 000
- C 4 000 000
- D 7 000 000

3 The diagram shows a number of ways in which specialisation occurs.



What is **X**?

- A construction
- B country
- C primary
- D tertiary

4 A producer of steel bars is dependent on commerce because

- A employees need good working conditions.
- B money from sales is kept in banks.
- C the business is a limited liability company.
- D the products need to be fit for purpose.

- 5 What is a function of a retailer?
- A buying from a wholesaler and selling to consumers
 - B offering cash and carry services to small-scale traders
 - C providing credit facilities to businesses
 - D storing goods ready for distribution to small shops
- 6 A multiple chain store selling clothing decides to expand from a regional chain to a national chain. Which advantage will this expansion achieve?
- A employing fewer staff
 - B offering consumers one-stop shopping
 - C reducing purchasing power
 - D using cost-effective national advertising
- 7 The diagram shows a bar code.



- Which statement about bar codes is correct?
- A A bar code increases human errors.
 - B A bar code attracts more customers.
 - C Bar code data is quickly available to retailers.
 - D Bar codes provide helpful information to consumers.
- 8 A retailer engaged in ecommerce may continue to operate a number of physical stores so that it can offer
- A a delivery system.
 - B an online customer review service.
 - C face-to-face customer service.
 - D payment by credit card.

- 9 The cash price for a motorcycle is \$1500. The credit price is 5% deposit of cash price plus 10 instalments of \$170.

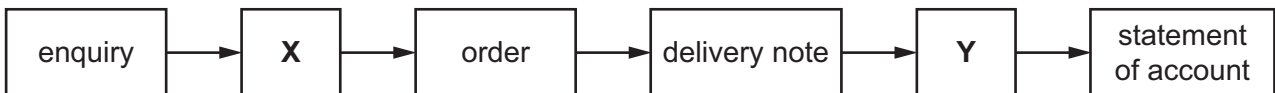
How much does the credit purchase cost?

- A \$170 B \$1425 C \$1700 D \$1775

- 10 Which statement describes the work of del credere agents?

- A They are not responsible for guaranteeing a delivery.
 B They bring together seller and buyer.
 C They cannot arrange contracts in their own name.
 D They guarantee payment is made to the seller.

- 11 The sequence of documents used for a business transaction between two firms is shown.



Which documents fit the X and Y boxes to make the sequence complete?

	X	Y
A	credit note	invoice
B	invoice	credit note
C	invoice	quotation
D	quotation	invoice

- 12 What is **not** a characteristic of a credit note?

- A It is issued when the buyer has been undercharged.
 B It is used when a buyer has returned damaged goods.
 C It is usually printed in red or pink.
 D It will be itemised on the statement of account.

- 13 A wholesaler buys televisions from a manufacturer for \$120 each. The wholesaler sells them to a retailer for \$150 each.

What is the wholesaler's percentage mark-up?

- A 20% B 25% C 30% D 75%

14 A country has a Balance of Payments surplus on its current account.

What does this mean?

- A The total value of its exports exceeds the total value of its imports.
- B The total value of its imports exceeds the total value of its exports.
- C The total value of its invisibles exceeds the total value of its visibles.
- D The total value of its visibles exceeds the total value of its invisibles.

15 A company exporting goods may be faced with protectionism.

What does this mean?

- A Countries in a trading bloc may not buy the goods.
- B It will be compulsory to use a free port.
- C Local industries might fail.
- D Tariffs and quotas may be placed on the goods.

16 Which trade difficulty is **more** likely to be faced by an importer of tractors than an importer of oranges?

- A availability of cold storage facilities
- B differences in safety standards
- C fixed exchange rates
- D speed of delivery

17 BOGOF is a sales promotion that refers to

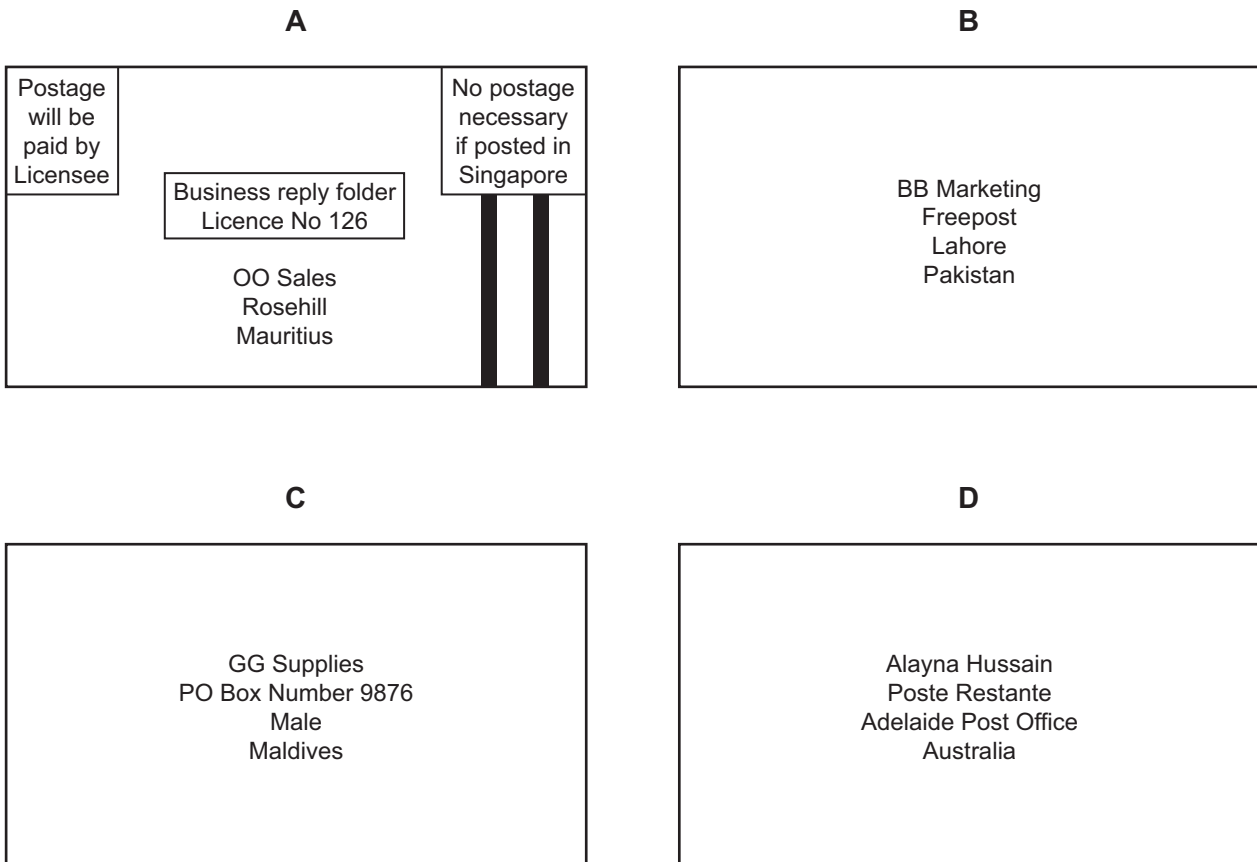
- A buying high quality goods.
- B getting one product free.
- C offering low standard goods.
- D offering two free products.

18 Why is communication important in the global market?

- A It enables buyers and sellers worldwide to meet face-to-face.
- B It lengthens the chain of distribution for goods.
- C It reduces transport costs between countries.
- D It speeds the marketing of goods and services.

19 The diagram shows examples of envelopes used in the postal service.

Which envelope would be collected by a business from its local post office?



20 What is an advantage of using a mobile phone rather than a landline?

- A It is difficult to steal.
- B It is used only for local calls.
- C It may be used anywhere.
- D It requires a signal to operate.

21 Which service is provided by a port authority?

- A collecting revenue for the government
- B inspecting immigration documents
- C maintaining and repairing the docks
- D supervising bonded warehouses

22 Which development in transportation has had the **most** impact on reducing costs of moving goods?

- A development of integrated freight transport using standard-sized containers
- B express road routes reducing travelling times between cities
- C mass rapid transport systems providing high-capacity movement around cities
- D more airports and air routes giving more opportunities to travel abroad

23 What is a function of warehousing?

- A to maintain supplies
- B to manufacture goods
- C to provide after-sales service
- D to standardise goods

24 The picture shows the flow of goods from the manufacturer to the retailer.



Which statement describes the role of the warehouse in the picture?

- A advertising availability of goods to consumers
- B providing protection for raw materials
- C selling directly to the public
- D storing goods ahead of consumer demand

25 A bonded warehouse is a place where

- A customs officials store confiscated and smuggled goods.
- B dutiable goods are stored until duty has been paid on them.
- C goods are manufactured ready for sale.
- D merchants store all their goods awaiting export.

26 Which insurance policy would cover a supermarket against the risk of a cashier stealing the store's money?

- A** employer's liability
- B** fidelity bond
- C** key person
- D** public liability

27 The owner of a factory holding stock worth \$200 000 insures the stock for \$150 000. A fire causes \$40 000 of damage.

How much would the factory owner receive?

- A** \$30 000 **B** \$40 000 **C** \$50 000 **D** \$150 000

28 A bank customer with a current account will

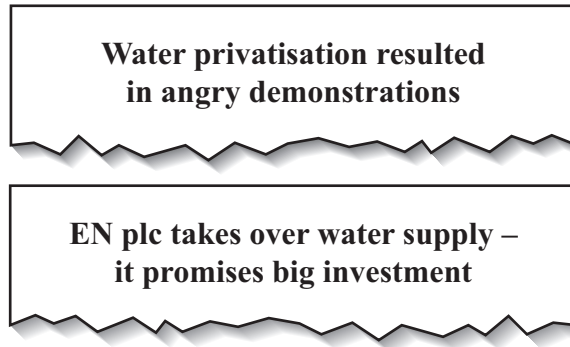
- A** be able to make withdrawals on demand.
- B** be certain of being granted an overdraft if required.
- C** receive a credit card when the account is opened.
- D** receive a safe deposit box.

29 Simeon, a retailer, wishes to locate his business in a shopping centre.

Why would Simeon choose the shopping centre?

- A** Businesses selling different products are there.
- B** Many people visit shopping centres every day.
- C** The shopping centre is on the outskirts of a town.
- D** There is an internet café there.

30 The following headlines appeared in an African newspaper.



What was the **most** likely reason for the demonstrations against privatisation of the water supply?

- A EN plc may bottle the water for export.
 - B EN plc may put up water prices.
 - C Investment in the water supply is not needed.
 - D Water supply may become contaminated.
- 31 In the absence of a deed of partnership, how would the losses be shared out if a partnership ceased to trade?
- A according to each partner's investment
 - B according to seniority of the partners
 - C equally between partners
 - D on the basis of a legal judgement
- 32 What is a feature of a multinational company?
- A branches in host countries
 - B government-owned enterprise
 - C monopoly over product sales
 - D trades in many products
- 33 Which form of capital is often secured to company assets?
- A debentures
 - B government grants
 - C leasing
 - D ordinary shares

- 34** Mr Singh is a small-scale retailer. His cost of goods sold was \$90 000. His opening inventory was \$10 000 and closing inventory was \$8000.

What is his rate of inventory turnover?

- A** 5 **B** 9 **C** 10 **D** 18

- 35** What is an example of a fixed asset for a car sale and repair business?

- A** advertising new cars for sale
- B** insuring used cars before resale
- C** rebuilding the car showroom
- D** repairing damaged cars

- 36** How could the rate of inventory turnover of a wholesale business be improved?

- A** changing suppliers and buying more expensive products
- B** holding more goods in the warehouse
- C** reducing the amount spent on advertising
- D** setting up a website and starting online shopping

- 37** The acronym PEST is helpful to analyse the external environment.

What factors does PEST stand for?

- A** political, ecological, social and technological
- B** political, economic, social and trade
- C** political, economic, social and technological
- D** political, economic, sustainable and technological

- 38** What will a retailer provide so that a shopper can link quickly to its website?

- A** bar code
- B** brand
- C** pin number
- D** QR code

39 What is the **best** method of recycling glass?

- A burning in a fire
- B dumping at a landfill site
- C putting into a bin in the street
- D putting into a bottle bank

40 Mrs Moyo buys a new toaster from a shop. When she arrives home, she discovers that the toaster is faulty.

According to consumer law, what should she do?

- A claim compensation for her wasted time
- B return to the shop for a replacement toaster
- C take no action
- D tell the police

BLANK PAGE

Permission to reproduce items where third-party owned material protected by copyright is included has been sought and cleared where possible. Every reasonable effort has been made by the publisher (UCLES) to trace copyright holders, but if any items requiring clearance have unwittingly been included, the publisher will be pleased to make amends at the earliest possible opportunity.

To avoid the issue of disclosure of answer-related information to candidates, all copyright acknowledgements are reproduced online in the Cambridge Assessment International Education Copyright Acknowledgements Booklet. This is produced for each series of examinations and is freely available to download at www.cambridgeinternational.org after the live examination series.

Cambridge Assessment International Education is part of the Cambridge Assessment Group. Cambridge Assessment is the brand name of the University of Cambridge Local Examinations Syndicate (UCLES), which itself is a department of the University of Cambridge.