



ADVANCED SUBSIDIARY (AS)
General Certificate of Education
January 2009

Mathematics

Assessment Unit M1
assessing
Module M1: Mechanics 1
[AMM11]



TUESDAY 13 JANUARY, MORNING

TIME

1 hour 30 minutes.

INSTRUCTIONS TO CANDIDATES

Write your Centre Number and Candidate Number on the Answer Booklet provided.
Answer **all eight** questions.
Show clearly the full development of your answers.
Answers should be given to three significant figures unless otherwise stated.
You are permitted to use a graphic or scientific calculator in this paper.

INFORMATION FOR CANDIDATES

The total mark for this paper is 75
Figures in brackets printed down the right-hand side of pages indicate the marks awarded to each question or part question.
Answers should include diagrams where appropriate and marks may be awarded for them.
Take $g = 9.8 \text{ ms}^{-2}$, unless specified otherwise.
A copy of the **Mathematical Formulae and Tables booklet** is provided.

Answer all eight questions.

Show clearly the full development of your answers.

Answers should be given to three significant figures unless otherwise stated.

- 1 Four forces 5 N, 8 N, P N and Q N are in equilibrium and act at a point as shown in Fig. 1 below.
The 5 N and P N forces are perpendicular.

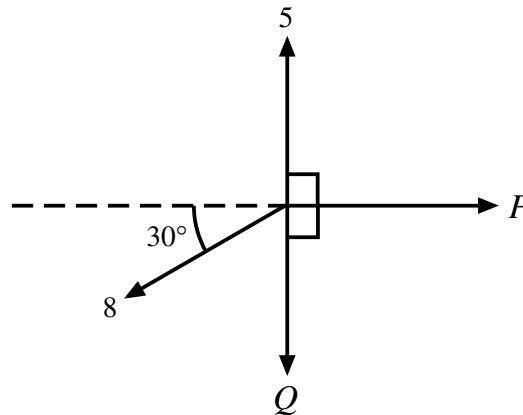


Fig. 1

Find P and Q .

[6]

- 2 A van is travelling along a straight horizontal road with an acceleration of 0.5 m s^{-2} .
When the van passes a point A its velocity is 10 m s^{-1} .
It reaches a point B 1 minute later.

(i) Find the distance AB.

[3]

The van's mass is 1000 kg and its engine exerts a force of 5500 N.

(ii) Find the resistance to the van's motion.

[4]

- 3 A ball of mass 0.2 kg falls vertically and strikes horizontal ground with a speed of 8 m s^{-1} . The ball rebounds vertically with a speed of 6 m s^{-1} .
- (i) Find the impulse exerted on the ball by the ground during the impact. [4]
- (ii) If the impact lasted for 0.01 s , find the magnitude of the average force exerted by the ground on the ball. [2]

- 4 **Fig. 2** below shows a box of mass $m \text{ kg}$ resting in equilibrium on a rough plane inclined at θ° to the horizontal, where $\sin \theta = \frac{3}{5}$. The coefficient of friction between the box and the plane is μ .

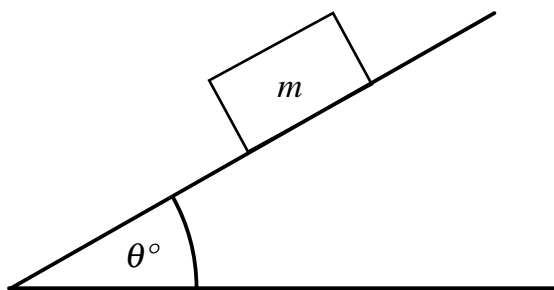


Fig. 2

The box is on the point of slipping down the plane.

- (i) Draw a diagram showing all the external forces acting on the box. [2]
- (ii) Find μ . [6]

- 5** A particle P moves along a straight horizontal line passing through a fixed point O at time $t = 0$ seconds.

At time t its displacement s metres, from O, is given by

$$s = t^3 - 6t^2 + 9t$$

- (i)** Find the velocity of P in terms of t . [2]

- (ii)** Find the acceleration of P in terms of t . [2]

- (iii)** Hence find the time when P attains its minimum velocity. [3]

- 6** A car has an initial velocity of 20 m s^{-1}
For the first 4 seconds of its motion it accelerates at 2.5 m s^{-2}
For the next T seconds it travels at a constant velocity of $V \text{ m s}^{-1}$
The car then decelerates to rest.

- (i)** Sketch a velocity–time graph for the whole journey of the car. [3]

- (ii)** Find V . [2]

The total time for the journey is 40 seconds.

- (iii)** If the total distance travelled by the car is 1090 m, find T . [7]

- 7 A uniform ladder AB, of length 6 m and mass 30 kg, rests with its end A against a smooth vertical wall. Its end B rests on rough horizontal ground as shown in **Fig. 3** below. The ladder makes an angle of 60° with the horizontal. The coefficient of friction between the ladder and the ground is 0.5

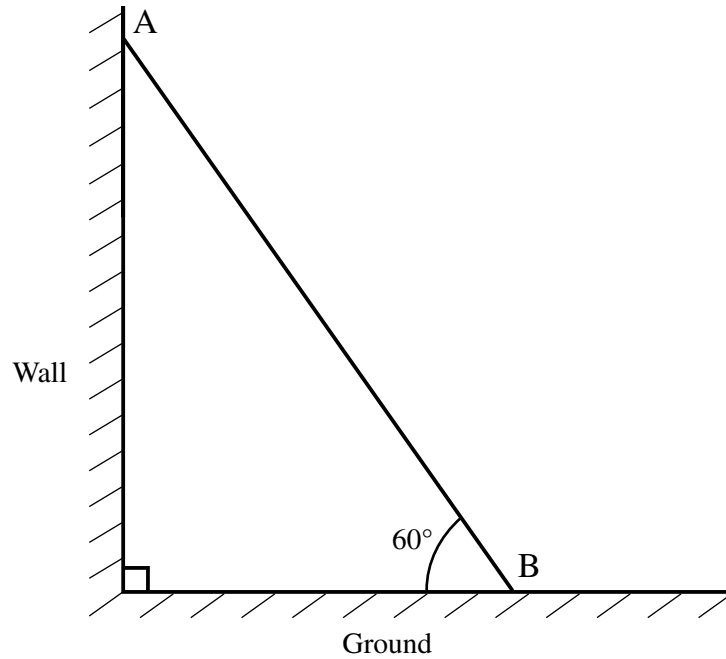


Fig. 3

A man of mass 100 kg ascends the ladder.

- (i) Draw a diagram which shows all the external forces acting on the ladder. [2]
- (ii) Find how far up the ladder, from B, the man can ascend before the ladder begins to slip. [10]

- 8 A light inextensible string passes over a smooth fixed pulley as shown in **Fig. 4** below. A block of mass 6 kg is attached to one end of the string and a block of mass 4 kg is attached to the other end.

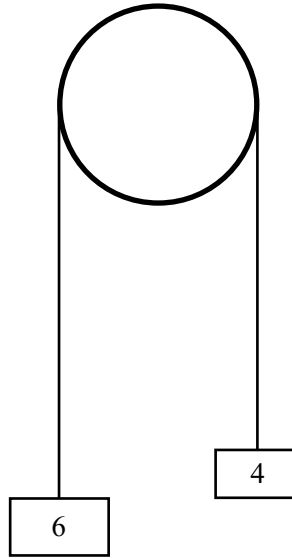


Fig. 4

When $t = 0$ s the system is released from rest with the 6 kg mass 2 m above ground level.

- (i) Find the acceleration of the system. [5]

The 4 kg mass does not strike the pulley in any subsequent motion.

- (ii) Find the velocity with which the 6 kg mass hits the ground. [2]

- (iii) Find the value of t when the 6 kg mass hits the ground. [3]

- (iv) Find the value of t when the string becomes taut again. [7]

THIS IS THE END OF THE QUESTION PAPER
