



Rewarding Learning

ADVANCED
General Certificate of Education
2011

Mathematics

Assessment Unit M3

assessing

Module M3: Mechanics 3

[AMM31]

MONDAY 20 JUNE, MORNING



TIME

1 hour 30 minutes.

INSTRUCTIONS TO CANDIDATES

Write your Centre Number and Candidate Number on the Answer Booklet provided.

Answer **all six** questions.

Show clearly the full development of your answers.

Answers should be given to three significant figures unless otherwise stated.

You are permitted to use a graphic or scientific calculator in this paper.

INFORMATION FOR CANDIDATES

The total mark for this paper is 75

Figures in brackets printed down the right-hand side of pages indicate the marks awarded to each question or part question.

Answers should include diagrams where appropriate and marks may be awarded for them.

Take $g = 9.8 \text{ m s}^{-2}$, unless specified otherwise.

A copy of the **Mathematical Formulae and Tables booklet** is provided.

Throughout the paper the logarithmic notation used is $\ln z$ where it is noted that $\ln z \equiv \log_e z$



Answer all six questions.

Show clearly the full development of your answers.

Answers should be given to three significant figures unless otherwise stated.

- 1** A particle P of mass 1 kg moves from the origin O to a point A through a zero gravity zone. The displacement of A from O is \mathbf{s} metres where

$$\mathbf{s} = 6 \begin{pmatrix} 3 \\ 1 \\ -2 \end{pmatrix}$$

P is acted on by two forces \mathbf{F}_1 newtons and \mathbf{F}_2 newtons where

$$\mathbf{F}_1 = \begin{pmatrix} 3 \\ 1 \\ 0 \end{pmatrix} \qquad \mathbf{F}_2 = \begin{pmatrix} 0 \\ 0 \\ -2 \end{pmatrix}$$

W_1 is the work done by \mathbf{F}_1 in moving the particle from O to A and W_2 is the work done by \mathbf{F}_2 in moving the particle from O to A.

- (i)** Find **(a)** W_1

(b) W_2

[4]

P passes through O when $t = 0$ s with initial velocity \mathbf{u} m s⁻¹ where

$$\mathbf{u} = \begin{pmatrix} 6 \\ 2 \\ -4 \end{pmatrix}$$

and reaches A when $t = 2$ s.

- (ii)** Find the **velocity** of P at A.

[4]

- (iii)** Verify that the total work done on the particle is 84 J and that this satisfies the Work–Energy Principle.

[4]

2 [Take \mathbf{i} to be a unit vector direction East and \mathbf{j} to be a unit vector direction North.]

A burglar is running along a straight path with velocity $(4\mathbf{i} + 3\mathbf{j})\text{ms}^{-1}$

A police sergeant is 120 m East and 80 m South of the burglar's position when she spots him.

At time $t = 0$ s she starts running with velocity $(\mathbf{i} + 5\mathbf{j})\text{ms}^{-1}$

(i) Find the velocity of the sergeant relative to the burglar. [3]

(ii) Show that the sergeant will catch the burglar and find the time at which this will occur. [6]

- 3 An elastic string is attached to a fixed point A and hangs vertically in equilibrium supporting a particle of mass 0.1 kg.
 The string is of natural length 0.5 m and modulus of elasticity 1.8 N. The extension in the string is $\frac{49}{180}$ m.
 Initially the particle is pulled vertically downwards a further distance of 0.2 m and released from rest.
 After t seconds the particle is x metres below the equilibrium position as shown in **Fig. 1** below.

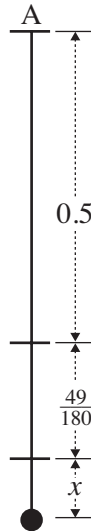


Fig. 1

- (i) Show that the equation of motion of the particle is

$$\ddot{x} = -36x$$

and that this represents S.H.M.

[6]

- (ii) Find the value of t when the particle is first 0.1 m above the equilibrium position.

[7]

4 A variable force

$$F = 15 + 12x - 3x^2$$

acts on a particle P of mass $\frac{8}{9}$ kg as it moves along a smooth, straight, horizontal track, where x is P's distance from a fixed point O.

Fig. 2 below shows the graph of F .

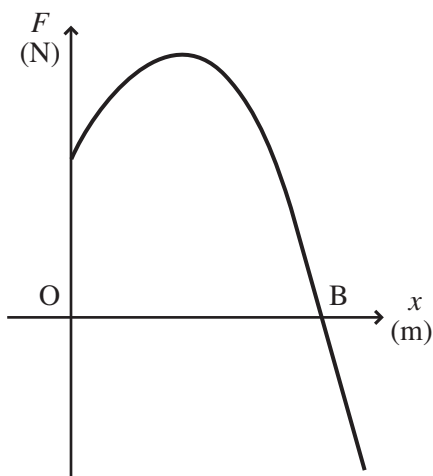


Fig. 2

The graph crosses the x -axis at B.

- (i) Find the work done by F as it moves the particle from O to B. [7]

The particle passes through O with a speed of 8 m s^{-1}

- (ii) Use the Work–Energy Principle to find P's maximum speed. [4]

- 5 **Fig. 3** below shows a circular steel plate that forms one end of a storage cylinder. The plate has a radius of 0.5 m. Its centre is at C where the x and y -axes meet. Two discs to make holes for inspection hatches are cut in the plate. One disc of radius 0.1 m centre A (0, 0.3). The other disc of radius 0.2 m centre B (0.2, -0.2).

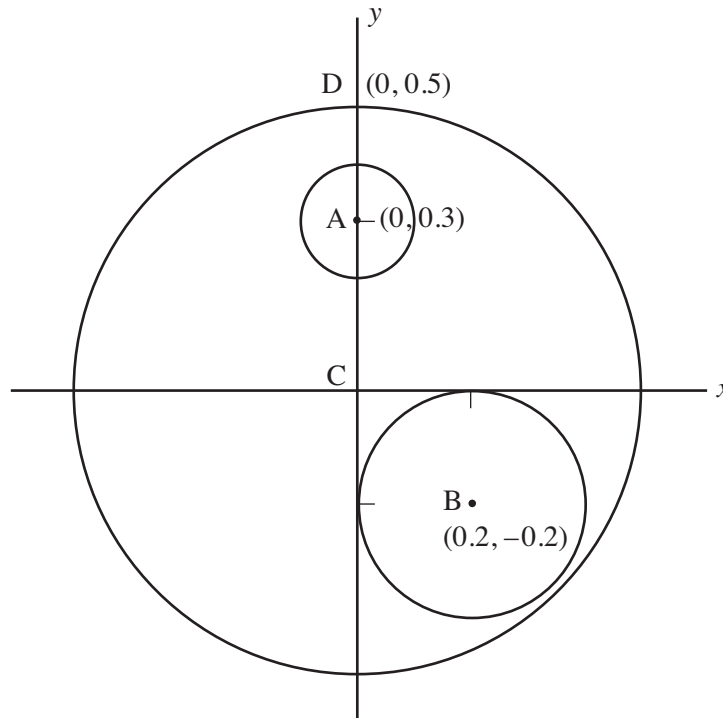


Fig. 3

Model this plate as a lamina of uniform density.

The mass of steel removed from the smaller hole is m kg.

- (i) Show that when both discs have been removed from the plate its mass is then $20m$ kg. [3]

The centre of mass of the plate is now at G (\bar{x} , \bar{y}).

- (ii) Show that $\bar{x} = -0.04$ m and find \bar{y} . [8]

The plate has an actual mass of 20 kg and rests on rough ground with A vertically above C. It is kept in equilibrium by a force P acting at D (0, 0.5) and parallel to the x -axis.

- (iii) Find P . [4]

- 6 A particle B of mass m kg is attached to two springs S_1 and S_2 whose other ends are attached to two fixed points A and C respectively. A is at the bottom and C at the top of a line of greatest slope of a smooth plane inclined at α to the horizontal as shown in **Fig. 4** below.

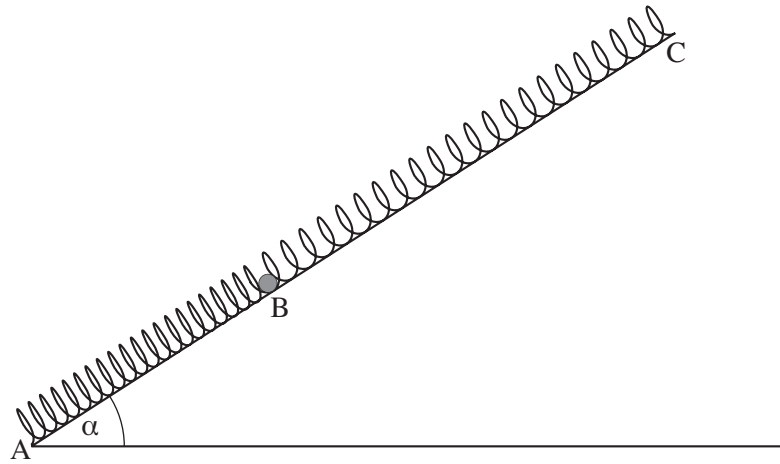


Fig. 4

Both springs are of natural length l metres and modulus of elasticity $0.5 m g$ newtons.

$AC = 2.5 l$ metres

The system rests in equilibrium with S_1 extended x metres and S_2 extended y metres.

(i) Show that $x + y = 0.5 l$ [2]

(ii) By considering the forces acting on B, find x in terms of l and α . [7]

(iii) If S_1 is compressed show that

$$\sin \alpha > 0.25$$
 [2]

(iv) If $\sin \alpha = 0.75$, find the elastic energy stored in S_1 in terms of l , m and g . [4]

THIS IS THE END OF THE QUESTION PAPER

Permission to reproduce all copyright material has been applied for.
In some cases, efforts to contact copyright holders may have been unsuccessful and CCEA
will be happy to rectify any omissions of acknowledgement in future if notified.