

New
Specification



Rewarding Learning

ADVANCED
General Certificate of Education
2010

Centre Number

71	
----	--

Candidate Number

--

Physics

Assessment Unit A2 3

Practical Techniques
(Internal Assessment)

Session 2

[AY232]



THURSDAY 13 MAY, MORNING

TIME

1 hour 30 minutes.

INSTRUCTIONS TO CANDIDATES

Write your Centre Number and Candidate Number in the spaces provided at the top of this page.

Turn to page 2 for further Instructions and Information.



5524

Question Number	Marks	
	Teacher Mark	Examiner Check
1		
2		
3		
Total Marks		

INSTRUCTIONS TO CANDIDATES

Answer **all** questions in this paper. Rough work and calculations must also be done in this paper. Except where instructed, do not describe the apparatus or the experimental procedures. The Supervisor will tell you the order in which you are to answer the questions. Not more than 30 minutes are to be spent in answering each question. You may be told to start with the experimental tests in Section A, or with the single question in Section B.

Section A consists of two experimental tests. A 28-minute period is allocated for you to use the apparatus. Two minutes is allocated to the supervisor to prepare the station for the next candidate. At the end of the 30-minute period you will be instructed to move to the area set aside for your next question. Section B consists of one question in which you will be tested on aspects of planning and design.

INFORMATION FOR CANDIDATES

The total mark for this paper is 60.

All questions carry 20 marks each.

Figures in brackets printed down the right-hand side of pages indicate the marks awarded to each part question.

You may use an electronic calculator.

BLANK PAGE

Section A

- 1 In this experiment you will investigate the equilibrium conditions of a suspended metre rule.

The aims of this experiment are:

- to keep the metre rule horizontal by adjusting the position and magnitude of the masses attached to it;
- to use the results to plot a linear graph;
- to use this graph to find the value for the mass of the metre rule; and
- to calculate a value for the density of the wood of the metre rule.

Apparatus

The apparatus shown in **Fig 1.1** has been set up for you. The metre rule is suspended from two identical springs at fixed points P and Q. The mass M , 0.100 kg, is set at the 0.20 m mark on the metre rule. **The position of M is not changed throughout the experiment.** You are now to attach a 0.200 kg mass to either loop near point Q and adjust its position until the lower metre rule is horizontal.

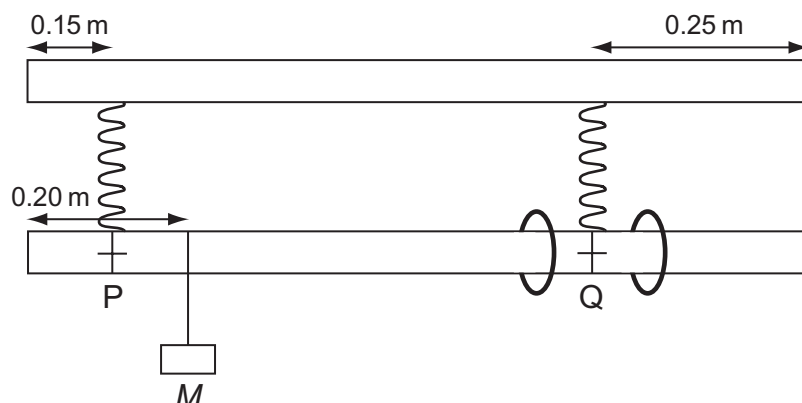


Fig. 1.1

- (a) With $M = 0.100$ kg, position the 0.200 kg mass on the metre rule, as described, so that the rule is horizontal.
- (i) Describe how you ensured that the rule was horizontal using only the apparatus with which you have been provided.

[1]

Teacher Mark	Examiner Check	Remark

- (ii) Measure the horizontal distance, s , from the right hand end of the metre rule to the loop holding the 0.200 kg mass. Record your result in **Table 1.1**. Obtain four further values for s by increasing M each time by 0.050 kg. Record your results, including the one for $M = 0.100$ kg in **Table 1.1**. You do not need to take repeat readings.

Table 1.1

M/kg	s/m
0.100	
0.150	
0.200	
0.250	
0.300	

[5]

- (b) Plot a graph of M (y axis) against s (x axis) on the grid of **Fig 1.2** on page 6. Choose a suitable scale starting from zero. Plot the points and draw the best fit line.

[4]

Teacher Mark	Examiner Check	Remark

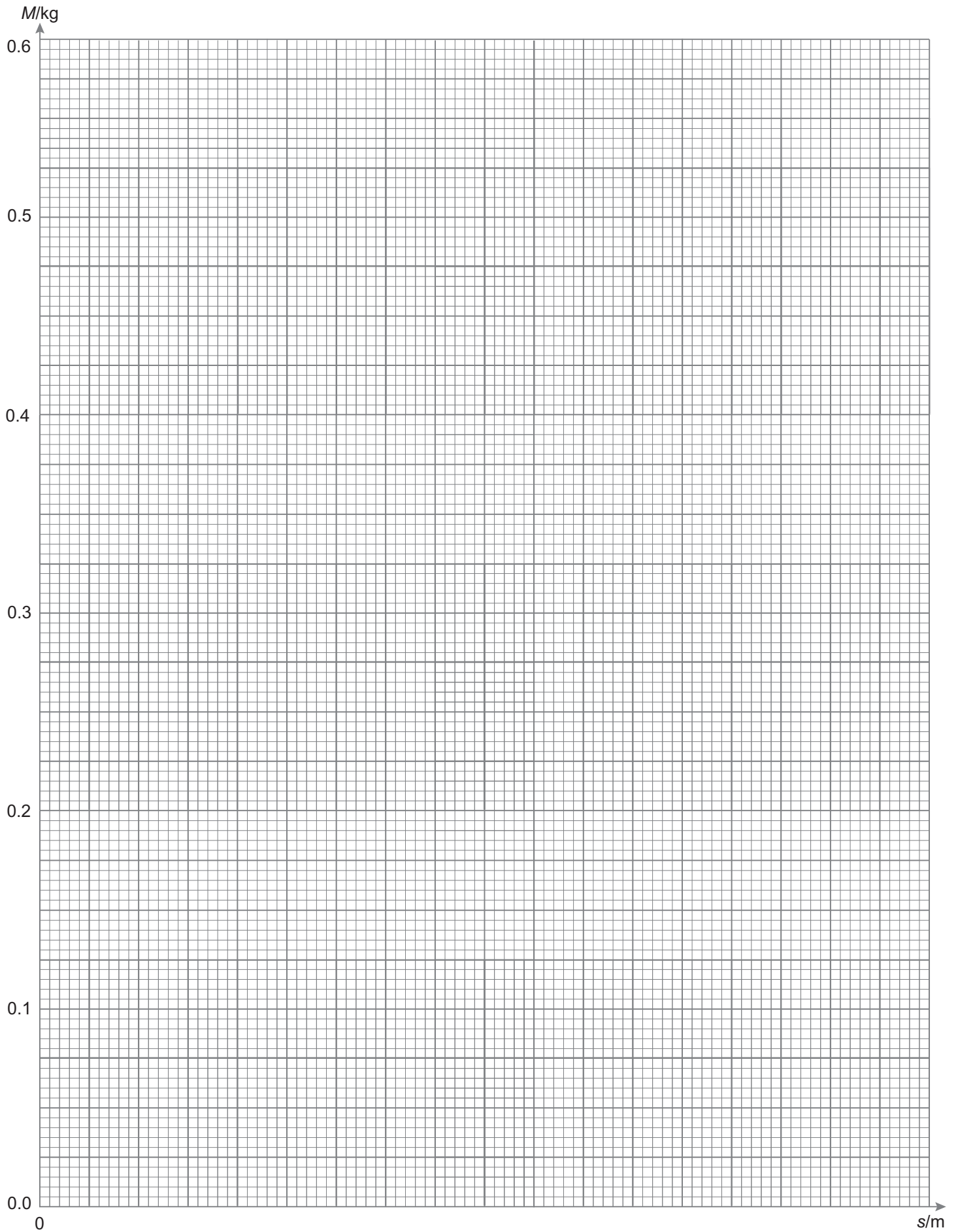


Fig. 1.2

The straight line that you have drawn is described by **Equation 1.1**

$$M = ks + \left(\frac{A + 2.2}{5} \right) \quad \text{Equation 1.1}$$

where k is a constant and A is the mass of the metre rule in kilograms.

(c) (i) How would you determine a value for k from your graph?

(You are not required to calculate a value for k .)

_____ [1]

(ii) Use your graph to find a value for A , the mass of the metre rule.

Mass = _____ kg [3]

Teacher Mark	Examiner Check	Remark

- (d) The density of a material can be calculated using **Equation 1.2**.

$$\text{density} = \frac{\text{mass}}{\text{volume}} \quad \text{Equation 1.2}$$

- (i) The length of the metre rule can be assumed to be exactly 100 cm. Use the vernier callipers provided to take suitable measurements from which you can calculate the density of the wood that the metre rule is made from. Record your measurements including their associated absolute uncertainty in **Table 1.2**. Do not repeat values.

Table 1.2

Measurement	Uncertainty	Unit

[3]

- (ii) Which of these measurements will contribute most to the overall percentage uncertainty in your measurement of density? Explain your answer.

[1]

- (iii) Calculate a value for the density of wood.

Density of wood = _____ kg m⁻³ [2]

Teacher Mark	Examiner Check	Remark

Table 2.1

h/m		T/s	

[4]

Theory

The relationship between T and h is given by **Equation 2.1**

$$T = 2\pi\sqrt{\frac{M-h}{K}} \quad \text{Equation 2.1}$$

where M and K are constants.

- (b) You are to draw a suitable straight line graph which may be used to find the values of M and K .

Equation 2.1 has been modified by squaring to give **Equation 2.2**

$$T^2 = \frac{4\pi^2 M}{K} - \frac{4\pi^2 h}{K} \quad \text{Equation 2.2}$$

- (i) Compare **Equation 2.2** with the equation of a straight line and state the quantities you intend to plot on your graph.

Vertical axis _____

Horizontal axis _____ [2]

- (ii) In order to plot this graph, you **will** need to calculate the values of a further quantity. Head the last column in **Table 2.1** appropriately, carry out the calculations and tabulate the results in this column. [2]

Teacher Mark	Examiner Check	Remark

(iii) Label the axes of the graph grid of **Fig 2.2** on page 12 consistent with **(b)(i)** and choose suitable scales. Plot the points and draw the best fit straight line. [5]

(iv) 1 Use the graph to find the value of K and enter the value below.

$K =$ _____

Units of $K =$ _____ [4]

2 Use **Equation 2.1** to calculate a value for M .

$M =$ _____

Units of $M =$ _____ [3]

Teacher Mark	Examiner Check	Remark




Fig. 2.2

(ii) Describe the ideal conditions under which the experiment should be carried out. Explain your answer.

_____ [2]

(b) Take the \log_{10} (logarithm to base 10) of both sides of **Equation 3.1** in order to obtain an equation in the form of a straight line graph $y = mx + c$.

_____ [1]

(c) (i) A value of B and of γ are required from the experimental results. Describe how these would be obtained from a straight line graph. Include in your answer what values you are plotting on the y and the x axis of your graph and then how B and γ are found from the graph.

y axis _____

x axis _____ [2]

(ii) How is a value for B found from the graph?

_____ [2]

(iii) How is a value for γ found from the graph?

_____ [1]

Teacher Mark	Examiner Check	Remark

(d) When such an experiment is carried out accurately γ is found to have the value 2. Assume this value of γ to be correct.

(i) Determine the units of the constant B in **Equation 3.1**.

_____ [1]

(ii) Sketch the graph of R against d that you would expect if **Equation 3.1** is correct and γ has the value 2.



(e) The ammeter and voltmeter that are to be used in the experiment are digital. The ammeter reading before the circuit is turned on is 0.000 A. The voltmeter reads 0.00 V. Describe how you would calculate the absolute uncertainty in the value of the resistance of the LDR at a distance d .

_____ [4]

Teacher Mark	Examiner Check	Remark

Permission to reproduce all copyright material has been applied for.
In some cases, efforts to contact copyright holders may have been unsuccessful and CCEA
will be happy to rectify any omissions of acknowledgement in future if notified.