

Q1.

(d) In the boxes below, draw diagrams to show the shapes of an ammonia molecule and an ammonium ion. Clearly show the bond angles on your diagrams.

ammonia	ammonium ion

[4]

Q2.

Hydrogen sulphide, H_2S , is a foul-smelling compound found in the gases from volcanoes. Hydrogen sulphide is covalent, melting at $-85^\circ C$ and boiling at $-60^\circ C$.

(c) (i) Draw a 'dot-and-cross' diagram to show the structure of the H_2S molecule.

(ii) Predict the shape of the H_2S molecule.

.....

(iii) Oxygen and sulphur are both in Group VI of the Periodic Table.

Suggest why the melting and boiling points of water, H_2O , are much higher than those of H_2S .

.....

.....

..... [4]

Q3.

- 2 The unsaturated hydrocarbon ethyne (acetylene), C_2H_2 , is widely used in 'oxy-acetylene torches' for cutting and welding metals. In the torch, ethyne is burned in oxygen to produce a flame with a temperature of 3400K. Ex

(a) Ethyne is a linear molecule with a triple bond, $C\equiv C$, between the two carbon atoms.

Draw a 'dot-and-cross' diagram of an ethyne molecule.

[1]

Q4.

- 1 Ethene, C_2H_4 , and hydrazine, N_2H_4 , are hydrides of elements which are adjacent in the Periodic Table. Data about ethene and hydrazine are given in the table below. L
u

	C_2H_4	N_2H_4
melting point/ $^{\circ}C$	-169	+2
boiling point/ $^{\circ}C$	-104	+114
solubility in water	insoluble	high
solubility in ethanol	high	high

(a) Ethene and hydrazine have a similar arrangement of atoms but differently shaped molecules.

(i) What is the H-C-H bond angle in ethene?

.....

(ii) Draw a 'dot-and-cross' diagram for hydrazine.

(iii) What is the H-N-H bond angle in hydrazine?

.....

[4]

- (b) The melting and boiling points of hydrazine are much higher than those of ethene. Suggest reasons for these differences in terms of the intermolecular forces **each** compound possesses.

.....
.....
.....
.....
.....[3]

- (c) Explain, with the aid of a diagram showing lone pairs of electrons and dipoles, why hydrazine is very soluble in ethanol.

*For
Examiner's
Use*

[3]

- (e) When aqueous hydrazine is reacted with HCl , a solid compound of formula $\text{N}_2\text{H}_5\text{Cl}$ may be isolated. When an excess of HCl is used, a second solid, $\text{N}_2\text{H}_6\text{Cl}_2$, is formed.

- (i) Suggest what type of reaction occurs between hydrazine and HCl .

.....

- (ii) What feature of the hydrazine molecule enables this reaction to occur?

.....

- (iii) Suggest why one molecule of hydrazine is able to react with one or two molecules of HCl .

.....

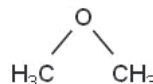
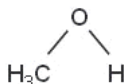
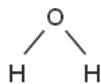
.....

[3]

[Total: 16]

Q5.

- 1 The structural formulae of water, methanol and methoxymethane, CH_3OCH_3 , are given below.



- (a) (i) How many lone pairs of electrons are there around the oxygen atom in methoxymethane?

.....

- (ii) Suggest the size of the C–O–C bond angle in methoxymethane.

.....

[2]

The physical properties of a covalent compound, such as its melting point, boiling point, vapour pressure, or solubility, are related to the strength of attractive forces between the molecules of that compound.

These relatively weak attractive forces are called intermolecular forces. They differ in their strength and include the following.

- A interactions involving permanent dipoles
- B interactions involving temporary or induced dipoles
- C hydrogen bonds

- (b) By using the letters **A**, **B**, or **C**, state the **strongest** intermolecular force present in **each** of the following compounds.

For each compound, write the answer on the dotted line.

ethanal CH_3CHO

ethanol $\text{CH}_3\text{CH}_2\text{OH}$

methoxymethane CH_3OCH_3

2-methylpropane $(\text{CH}_3)_2\text{CHCH}_3$

[4]

(c) Methanol and water are completely soluble in each other.

(i) Which intermolecular force exists between methanol molecules and water molecules that makes these two liquids soluble in each other?

.....

(ii) Draw a diagram that clearly shows this intermolecular force. Your diagram should show any lone pairs or dipoles present on either molecule that you consider to be important.

[4]

(d) When equal volumes of ethoxyethane, $C_2H_5OC_2H_5$, and water are mixed, shaken, and then allowed to stand, two layers are formed.

Suggest why ethoxyethane does not fully dissolve in water. Explain your answer.

.....

.....

.....

.....[2]

[Total: 12]

Q6.

1 Copper and titanium are each used with aluminium to make alloys which are light, strong and resistant to corrosion.

Aluminium, Al, is in the third period of the Periodic Table; copper and titanium are both transition elements.

(a) Complete the electronic configuration of aluminium and of titanium, proton number 22.

Al	$1s^2$
Ti	$1s^2$

[1]

Aluminium reacts with chlorine.

- (b) (i) Outline how, starting from aluminium powder, this reaction could be carried out in a school or college laboratory to give a small sample of aluminium chloride. A diagram is not necessary.

.....
.....
.....

- (ii) Describe what you would see during this reaction.

.....
.....

- (iii) At low temperatures, aluminium chloride vapour has the formula Al_2Cl_6 . Draw a 'dot-and-cross' diagram to show the bonding in Al_2Cl_6 . Show outer electrons only. Represent the aluminium electrons by ●. Represent the chlorine electrons by x.

[6]

Copper forms two chlorides, $CuCl$ and $CuCl_2$.

- (c) When copper is reacted directly with chlorine, only $CuCl_2$ is formed. Suggest an explanation for this observation.

.....
..... [1]

F
Exam
U

Titanium also reacts with chlorine.

(d) When an excess of chlorine was reacted with 0.72 g of titanium, 2.85 g of a chloride **A** was formed.

(i) Calculate the amount, in moles, of titanium used.

(ii) Calculate the amount, in moles, of chlorine atoms that reacted.

(iii) Hence, determine the empirical formula of **A**.

(iv) Construct a balanced equation for the reaction between titanium and chlorine.

..... [4]

(e) At room temperature, the chloride of titanium, **A**, is a liquid which does not conduct electricity.

What does this information suggest about the bonding and structure in **A**?

.....
.....
..... [2]

[Total: 14]

Q7.

1 Elements and compounds which have small molecules usually exist as gases or liquids.

- (a) Chlorine, Cl_2 , is a gas at room temperature whereas bromine, Br_2 , is a liquid under the same conditions.

Explain these observations.

.....

 [2]

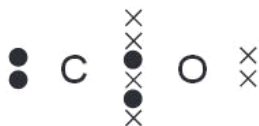
- (b) The gases nitrogen, N_2 , and carbon monoxide, CO , are isoelectronic, that is they have the same number of electrons in their molecules.

Suggest why N_2 has a lower boiling point than CO .

.....

 [2]

- (c) A 'dot-and-cross' diagram of a CO molecule is shown below. Only electrons from outer shells are represented.



In the table below, there are three copies of this structure.

On the structures, draw a circle round a pair of electrons that is associated with **each** of the following.

(i) a co-ordinate bond	(ii) a covalent bond	(iii) a lone pair

[3]

- (d) Hydrogen cyanide, HCN, is a gas which is also isoelectronic with N_2 and with CO. Each molecule contains a strong triple bond with the following bond energies.

bond	bond energy/ kJ mol^{-1}
$\text{C}\equiv\text{N}$ in HCN	890
$\text{N}=\text{N}$	994
$\text{C}=\text{O}$	1078

Although each compound contains the same number of electrons and a strong triple bond in its molecule, CO and HCN are both very reactive whereas N_2 is not.

Suggest a reason for this.

.....
..... [1]

Q8.

- 1 Hydrazine, N_2H_4 , can be used as a rocket fuel and is stored as a liquid. It reacts exothermically with oxygen to give only gaseous products.

The enthalpy change of a reaction such as that between hydrazine and oxygen may be calculated by using standard enthalpy changes of formation.

(c) The bonding in hydrazine is similar to that in ammonia.

- (i) Showing outer-shell electrons only, draw a 'dot-and-cross' diagram of an ammonia molecule.

- (ii) Draw a diagram to show the three-dimensional shape of an ammonia molecule.

(iii) Draw a diagram to show the shape of a hydrazine molecule.
Show clearly which atom is joined to which and show clearly the value of **one** bond angle.

[4]

(d) Deduce the oxidation state of nitrogen in hydrazine.

.....

[1]

Q9.

(f) The boiling points of these two compounds are given below.

compound	bp/K
CH ₃ CH ₃	184.5
CH ₃ F	194.7

Suggest explanations for the following.

(i) the close similarity of the boiling points of the two compounds

.....
.....

(ii) the slightly higher boiling point of CH₃F

.....
.....

[2]

Q10.

(f) Another sulfur compound which is present in the Earth's atmosphere is carbonyl sulfide, OCS. The sequence of atoms in the molecule is oxygen-carbon-sulfur and the molecule is **not** cyclic.

(i) Draw a 'dot-and-cross' diagram of the OCS molecule.
Show outer electrons only.

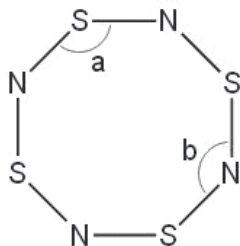
(ii) Suggest a value for the O–C–S bond angle.

.....

[2]

Q11.

(c) Sulfur forms the compound S_4N_4 with nitrogen. The structure of S_4N_4 is shown below. Assume all bonds shown are single bonds.



(i) Determine the number of lone pairs of electrons around a nitrogen atom and a sulfur atom in S_4N_4 .

nitrogen atom

sulfur atom

(ii) Which bond angle, a or b, in the S_4N_4 molecule will be smaller? Explain your answer.

.....
.....

[2]

Q12.

3 With the prospect that fossil fuels will become increasingly scarce in the future, many compounds are being considered for use in internal combustion engines. One of these is DME or dimethyl ether, CH_3OCH_3 . DME is a gas which can be synthesised from methanol. Methanol can be obtained from biomass, such as plant waste from agriculture.

ε

(d) DME is a gas at room temperature while ethanol is a liquid.

(i) Which intermolecular force exists between ethanol molecules, which causes ethanol to be a liquid at room temperature?

.....

(ii) Draw a diagram that clearly shows this intermolecular force. Your diagram should show any lone pairs or dipoles present that you consider to be important. You should represent at least two molecules in your diagram.

[4]

Q13.

1 Carbon disulfide, CS_2 , is a volatile, flammable liquid which is produced in small quantities in volcanoes.

(a) The sequence of atoms in the CS_2 molecule is sulfur to carbon to sulfur.

(i) Draw a 'dot-and-cross' diagram of the carbon disulfide molecule.
Show outer electrons only.

(ii) Suggest the shape of the molecule and state the bond angle.

shape

bond angle

[3]

Q14.

3 The oxides of the third period include the following:



(a) Showing outer electrons only, draw a dot-and-cross electron diagram for magnesium oxide, MgO .

[1]

Q15.

- 1 (a) Salt, sodium chloride, forms transparent colourless crystals. Describe the bonding in sodium chloride crystals, give the formula of each particle and sketch part of the crystal structure.

[3]

- (b) Explain why crystals of sodium chloride do not conduct electricity, but molten sodium chloride does.

.....
.....
.....[2]

Q16.

- 2 Carbon disulphide, CS_2 , is a volatile, stinking liquid which is used to manufacture viscose rayon and cellophane.

Ex.#

- (a) The carbon atom is in the centre of the CS_2 molecule.

Draw a 'dot-and-cross' diagram of the carbon disulphide molecule.

Show outer electrons only.

[2]

- (b) Suggest the shape of the molecule and give its bond angle.

shape

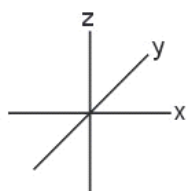
bond angle

[2]

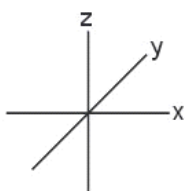
Q17.

1 This question is about the bonding of covalent compounds.

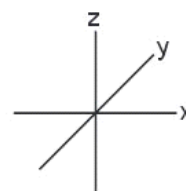
(a) On the axes below, sketch the shapes of a 1s, a 2s, and a $2p_x$ orbital.



1s



2s



$2p_x$


[3]

(b) Covalent bonding occurs when two atoms share a pair of electrons. Covalent bonding may also be described in terms of orbital overlap with the formation of σ bonds.

(i) How are the two atoms in a covalent bond held together? In your answer, state which particles are attracted to one another and the nature of the force of attraction.

.....
.....

(ii) Draw sketches to show orbital overlap that produces the σ bonding in the H_2 and HCl molecules.



[4]

(c) The bond in the HCl molecule is said to be 'polar'.

(i) What is meant by the term *bond polarity*?

.....

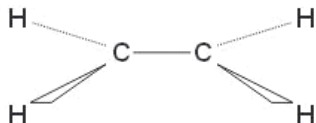
(ii) Explain why the HCl molecule is polar.

.....
.....

[2]

(d) The bonding in ethene may be described as a mixture of σ and π bonding.

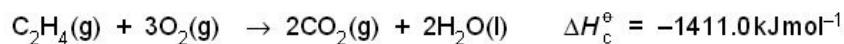
Each carbon atom in ethene forms three σ bonds as shown below.



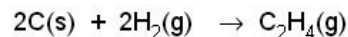
On the diagram, sketch the π bond that is also present in ethene.

[1]

(e) Carbon, hydrogen and ethene each burn exothermically in an excess of air.



Use the data to calculate the standard enthalpy change of formation, ΔH_f^\ominus , in kJ mol^{-1} , of ethene at 298 K.



$$\Delta H_f^\ominus = \dots\dots\dots \text{ kJ mol}^{-1}$$

[3]

[Total: 13]

Q18.

(b) Suggest, in terms of the structure and bonding, explanations for the following. You should draw diagrams where you think they will help your answer.

(i) the high melting point of sodium chloride

(ii) the low melting point of silicon tetrachloride

[4]

(e) When solid aluminium chloride is heated above 451 K, a vapour is formed which has $M_r = 267$.

When this vapour is heated above 1100 K, the vapour has $M_r = 133.5$.

(i) What are the molecular formulae of these two forms of aluminium chloride?

at 460 K at 1150 K

(ii) Draw a 'dot-and-cross' diagram of the form of aluminium chloride that exists at the **higher** temperature.

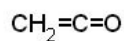
- (iii) Draw a displayed formula of the form of aluminium chloride that exists at the lower temperature. Indicate clearly the different types of bonds present.

[5]

Q19.

- 2 Ketene, C_2H_2O , is a member of a class of unsaturated organic compounds that is widely used in pharmaceutical research for the synthesis of organic compounds.

For
Exam
Use



ketene

- (a) (i) Suggest values for the H-C-H and C=C=O bond angles in ketene.

H-C-H C=C=O

- (ii) By considering the structure of the molecule, suggest why the name *ketene* is used.

.....

..... [3]

(b) Ketene burns completely in air to form carbon dioxide and water.

(i) Write a balanced equation for this reaction.

.....

(ii) Use your equation to calculate the volume of CO_2 , in dm^3 , measured at room temperature and pressure, which will be formed when 3.5 g of ketene are burned in an excess of air.

Give your answer to **two** significant figures.

volume of CO_2 = dm^3 [4]

Q20.

1 The elements carbon and silicon are both in Group IV of the Periodic Table. Carbon is the second most abundant element by mass in the human body and silicon is the second most common element in the Earth's crust.

Carbon and silicon each form an oxide of general formula XO_2 .
At room temperature, CO_2 is a gas while SiO_2 is a solid with a high melting point.

(a) Briefly explain, in terms of the chemical bonds and intermolecular forces present in **each** compound, why CO_2 is a gas and SiO_2 is a solid at room temperature.

.....
.....
.....
..... [3]

(b) Draw a simple diagram to show the structure of SiO_2 . Your diagram should contain at least **two** silicon atoms **and** show clearly how many bonds each atom forms.

[2]

CO_2 does not behave as an ideal gas.

(c) (i) State the basic assumptions of the kinetic theory as applied to an ideal gas.

.....
.....
.....
.....
.....
.....

(ii) Suggest **one** reason why CO_2 does not behave as an ideal gas.

.....

[5]

f
Ex am
l

Carbon exists in a number of forms, one of which is a conductor of electricity and one of which is a non-conductor of electricity. Silicon is the main component of most semi-conductors.

(d) Graphite is the form of carbon that is a conductor of electricity. Give a simple explanation for this property.

.....
..... [1]

When carbon and silicon(IV) oxide are heated together at about 2000 °C, silicon carbide, SiC, is formed. Silicon carbide is a hard material which is widely used as an abrasive and in ceramics.

(e) (i) Construct an equation for the reaction of carbon and silicon(IV) oxide.

.....

(ii) SiC has a similar structure to one of the common forms of carbon. Which form is this? Give a reason for your answer.

form

reason

[2]

[Total: 13]

Q21.

Sodium hydride, NaH, is a colourless crystalline solid which melts at 800 °C and has the same crystal structure as sodium chloride which has a melting point of 808 °C. When molten sodium chloride is electrolysed using graphite electrodes, a shiny deposit, **D**, forms on the cathode and a greenish-yellow gas is evolved from the anode. When molten sodium hydride is electrolysed, under suitable conditions using graphite electrodes, the same shiny deposit **D** is formed on the cathode and a colourless gas, **G**, is evolved from the anode.

(b) (i) Describe with the aid of a diagram the bonding in a sodium chloride crystal.

(ii) Suggest the type of bonding that is present in sodium hydride.

.....

(iii) What is the oxidation number of hydrogen in sodium hydride?

.....

(iv) Draw a 'dot-and-cross' diagram for sodium hydride. Show outer electrons only.

(v) The metals magnesium and aluminium form hydrides with formulae MgH_2 and AlH_3 . The non-metals phosphorus and sulfur form hydrides with formulae PH_3 and H_2S .

By considering their positions in the Periodic Table, suggest oxidation numbers for these four elements in their hydrides.

compound	MgH_2	AlH_3	PH_3	H_2S
oxidation number of element in the hydride				

[8]

Q22.

- 1 Valence Shell Electron Pair Repulsion theory (VSEPR) is a model of electron-pair repulsion (including lone pairs) that can be used to deduce the shapes of, and bond angles in, simple molecules.

(a) Complete the table below by using simple hydrogen-containing compounds. One example has been included.

number of bond pairs	number of lone pairs	shape of molecule	formula of a molecule with this shape
3	0	trigonal planar	BH ₃
4	0		
3	1		
2	2		

[3]

(b) Tellurium, Te, proton number 52, is used in photovoltaic cells.

When fluorine gas is passed over tellurium at 150 °C, the colourless gas TeF₆ is formed.

(i) Draw a 'dot-and-cross' diagram of the TeF₆ molecule, showing outer electrons only.

(ii) What will be the shape of the TeF₆ molecule?

.....

(iii) What is the F–Te–F bond angle in TeF₆?

.....

[3]

[Total: 6]

Q23.

1 Ammonia, NH_3 , and methane, CH_4 , are the hydrides of elements which are next to one another in the Periodic Table.

(a) In the boxes below, draw the 'dot-and-cross' diagram of a molecule of **each** of these compounds. Show outer electrons only.
State the shape of **each** molecule.

NH_3	CH_4
shape	shape

[3]

(b) Ammonia is polar whereas methane is non-polar. The physical properties of the two compounds are different.

(i) Explain, using ammonia as the example, the meaning of the term *bond polarity*.

.....
.....
.....

(ii) Explain why the ammonia molecule is polar.

.....
.....

(iii) State **one** physical property of ammonia which is caused by its polarity.

.....
.....

[4]

(c) When ammonia gas is mixed with hydrogen chloride, white, solid ammonium chloride is formed.

F
Exam
U

State **each type** of bond that is present in one formula unit of ammonium chloride and how many of each type are present.
You may draw diagrams.

.....
.....
.....
.....
..... [3]

[Total: 10]

