



Cambridge International AS & A Level

CANDIDATE
NAME


| |
|--|
| |
|--|

CENTRE
NUMBER

| | | | | |
|--|--|--|--|--|
| | | | | |
|--|--|--|--|--|

CANDIDATE
NUMBER

| | | | |
|--|--|--|--|
| | | | |
|--|--|--|--|



PHYSICS

9702/53

Paper 5 Planning, Analysis and Evaluation

May/June 2021

1 hour 15 minutes

You must answer on the question paper.

No additional materials are needed.

INSTRUCTIONS

- Answer **all** questions.
- Use a black or dark blue pen. You may use an HB pencil for any diagrams or graphs.
- Write your name, centre number and candidate number in the boxes at the top of the page.
- Write your answer to each question in the space provided.
- Do **not** use an erasable pen or correction fluid.
- Do **not** write on any bar codes.
- You may use a calculator.
- You should show all your working and use appropriate units.

INFORMATION

- The total mark for this paper is 30.
- The number of marks for each question or part question is shown in brackets [].

This document has **8** pages.

- 1 A student investigates the current in a coil and a resistor connected in series, as shown in Fig. 1.1.



Fig. 1.1

The student connects a high-voltage d.c. power supply and a switch across the series combination.

When the switch is closed, it takes time t for the current in the resistor of resistance R to reach a maximum value. The time t is a few milliseconds.

There are a number of different unmarked resistors available.

It is suggested that the relationship between t and R is

$$t = \frac{KN^2A}{LR}$$

where N is the number of turns of wire on the coil, A is the cross-sectional area of the coil, L is the length of the coil and K is a constant.

Design a laboratory experiment to test the relationship between t and R .

Explain how your results could be used to determine a value for K .

You should draw a diagram, on page 3, showing the arrangement of your equipment. In your account you should pay particular attention to:

- the procedure to be followed
- the measurements to be taken
- the control of variables
- the analysis of the data
- any safety precautions to be taken.

Diagram

.....

.....

.....

.....

.....

.....

.....

.....

.....

.....

.....

.....

.....

.....

.....

.....

.....

.....

.....

.....

.....

.....

Ruled writing area consisting of horizontal dotted lines.

- 2 A student investigates the collision of two gliders A and B on a linear air-track. A card is attached to glider B, as shown in Fig. 2.1.

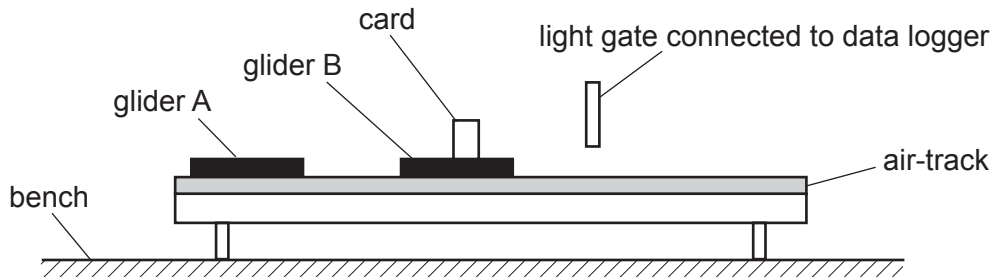


Fig. 2.1

Glider B has a mass M . A mass m is added to glider B.

Glider A travels at a constant velocity u towards the stationary glider B. The gliders then collide and move together towards the light gate.

The card passes through the light gate which is connected to a data logger. The student records the velocity v of the two gliders from the data logger.

The student changes the mass m and repeats the experiment.

It is suggested that v and m are related by the equation

$$Au = (M + m + A)v$$

where A is the mass of glider A.

- (a) A graph is plotted of $\frac{1}{v}$ on the y -axis against $(M + m)$ on the x -axis.

Determine expressions for the gradient and y -intercept.

gradient =

y -intercept =

[1]

(b) Values of m and v are given in Table 2.1.

The value of M is $330\text{ g} \pm 5\%$.

Each value of m has a percentage uncertainty of $\pm 5\%$.

Table 2.1

| m/g | $(M + m)/\text{g}$ | $v/\text{cm s}^{-1}$ | $\frac{1}{v}/\text{s cm}^{-1}$ |
|--------------|--------------------|----------------------|--------------------------------|
| 50 | | 4.42 | |
| 150 | | 3.92 | |
| 250 | | 3.40 | |
| 350 | | 3.02 | |
| 500 | | 2.58 | |
| 600 | | 2.33 | |

Calculate and record values of $(M + m)/\text{g}$ and $\frac{1}{v}/\text{s cm}^{-1}$ in Table 2.1.

Include the absolute uncertainties in $(M + m)$.

[2]

(c) (i) Plot a graph of $\frac{1}{v}/\text{s cm}^{-1}$ against $(M + m)/\text{g}$.

Include error bars for $(M + m)$.

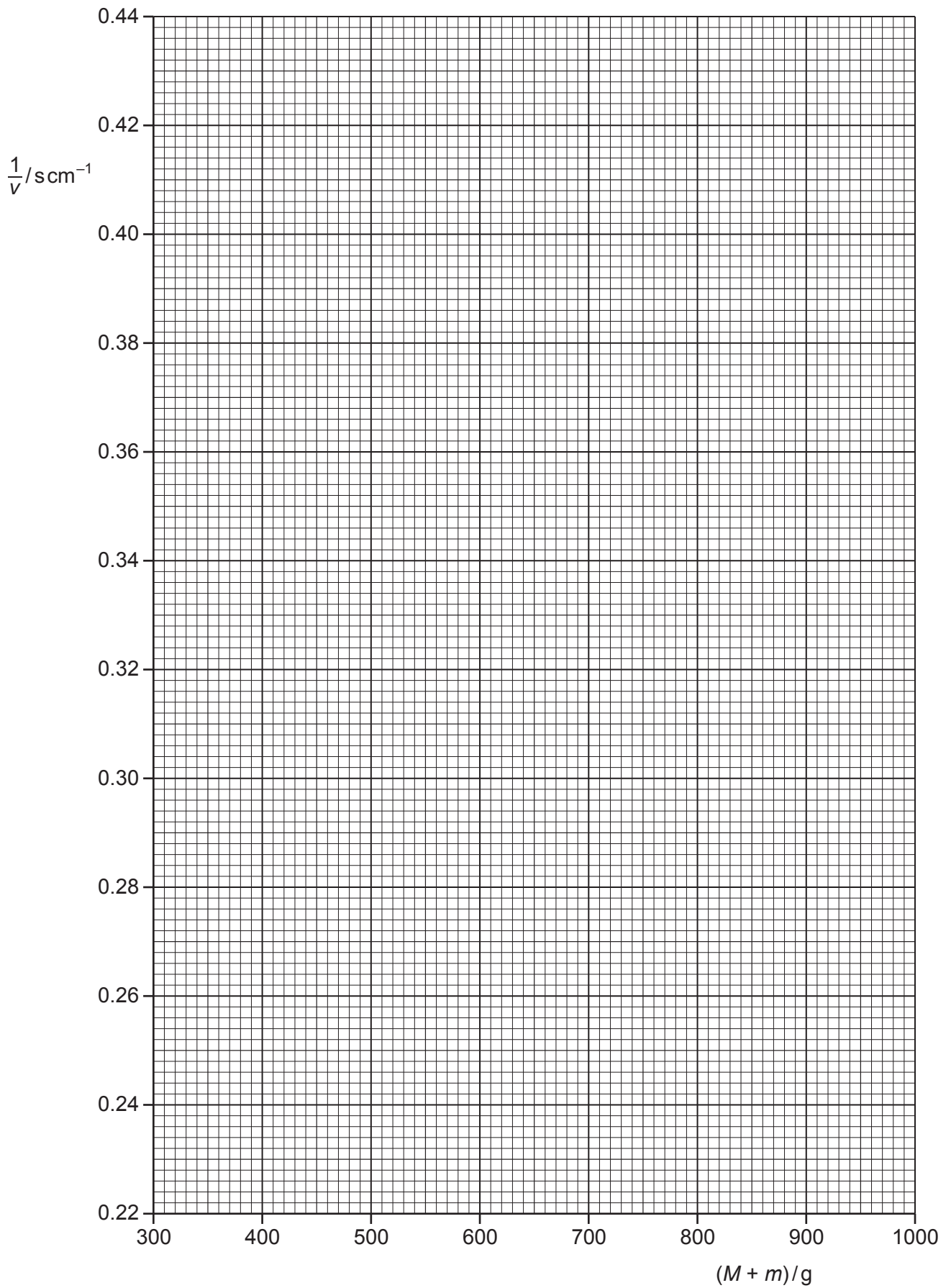
[2]

(ii) Draw the straight line of best fit and a worst acceptable straight line on your graph. Both lines should be clearly labelled.

[2]

(iii) Determine the gradient of the line of best fit. Include the absolute uncertainty in your answer.

gradient = [2]



- (iv) Determine the y -intercept of the line of best fit. Include the absolute uncertainty in your answer.

y -intercept = [2]

- (d) (i) Using your answers to (a), (c)(iii) and (c)(iv), determine the values of u and A . Include appropriate units.

u =

A = [2]

- (ii) Determine the percentage uncertainty in A .

percentage uncertainty in A = % [1]

- (e) The experiment is repeated. Determine the value of m that would give a velocity v of 2.0 cm s^{-1} .

m = g [1]

[Total: 15]