

IGCSE 0620 – Multiple Choice Questions

Question 1

35 A label on a bottle of spring water gives the following information.

Contents per litre	
Calcium	25.0 mg
Magnesium	4.5 mg
Potassium	1.0 mg
Sodium	6.5 mg
Hydrogencarbonate	103 mg
Sulphate	10.5 mg
Nitrate	7.0 mg
Chloride	5.5 mg

What is the total mass of singly charged positive ions in the water?

- A 7.5 mg B 12.5 mg C 29.5 mg D 115.5 mg

0620_w/07/qp1

Question 2

10 The diagram shows a model of a molecule of an organic acid.



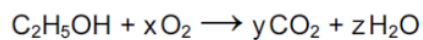
What is the relative molecular mass of this acid?

- A 11 B 40 C 58 D 74

0620_w/07/qp1

Question 3

- 9 The equation shows the reaction that occurs when ethanol burns in air.



Which values of x , y and z are needed to balance this equation?

	x	y	z
A	2	2	2
B	2	2	3
C	2	3	3
D	3	2	3

0620_w/05/qp1

Question 4

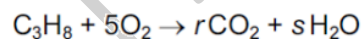
- 10 Which formula represents a compound containing three atoms?

A HNO_3 **B** H_2O **C** LiF **D** ZnSO_4

0620_w/04/qp1

Question 5

- 9 When propane is burned, carbon dioxide and water are formed, as shown.



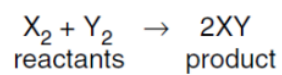
Which values of r and s balance the equation?

	r	s
A	1	3
B	1	5
C	3	4
D	3	8

0620_w/04/qp1

Question 6

10 Two gases react as shown.



When measured at the same temperature and pressure, what is the value of

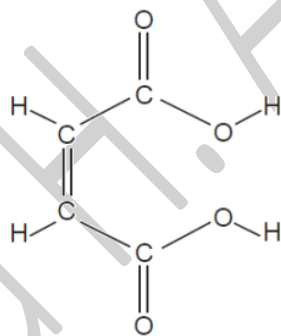
$$\frac{\text{volume of product}}{\text{volume of reactants}} ?$$

- A $\frac{1}{2}$
- B 1
- C 2
- D 4

0620_w/03/qp1

Question 7

11 Butenedioic acid has the structure shown.



What is the molecular formula of butenedioic acid?

- A CHO
- B $C_4H_4O_4$
- C $C_6H_4O_2$
- D $C_6H_4O_6$

0620_w/02/qp1

Question 8

- 9 One method of producing carbon dioxide is to react calcium carbonate with dilute hydrochloric acid.

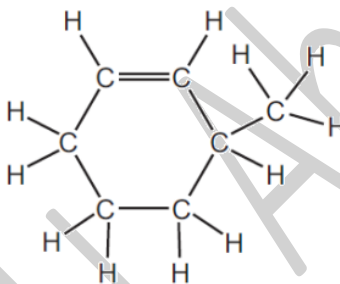
What is the balanced chemical equation for the reaction?

- A $\text{CaCO}_3 + \text{HCl} \rightarrow \text{CaO} + \text{CO}_2 + \text{HCl}$
B $\text{CaCO}_3 + 2\text{HCl} \rightarrow \text{CaCl}_2 + \text{CO}_2 + \text{H}_2\text{O}$
C $\text{CaCO}_3 + 4\text{HCl} \rightarrow \text{CaCl}_4 + \text{CO}_2 + \text{H}_2 + \text{H}_2\text{O}$
D $\text{Ca}(\text{HCO}_3)_2 + \text{HCl} \rightarrow \text{CaCl} + 2\text{CO}_2 + \text{H}_2\text{O}$

0620_w/02/qp1

Question 9

- 8 The structure of an organic compound, X, is shown.



What is the molecular formula of X?

- A C_6H_9 B C_6H_{12} C C_7H_{12} D C_7H_{14}

0620_s/14/qp12

Question 10

- 9 What is the relative molecular mass, M_r , of nitrogen dioxide?

- A 15 B 23 C 30 D 46

0620_s/14/qp12

Question 11

10 In athletics, banned drugs such as nandrolone have been taken illegally to improve performance. Nandrolone has the molecular formula $C_{18}H_{26}O_2$.

What is the relative molecular mass, M_r , of nandrolone?

(Relative atomic mass: H = 1; C = 12; O = 16)

- A 46 B 150 C 274 D 306

0620_s/14/qp11

Question 12

9 A compound with the formula XF_2 has a relative formula mass of 78.

What is element X?

- A argon
B calcium
C neon
D zirconium

0620_s/13/qp11

Question 13

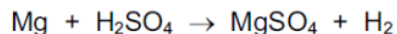
10 What is the balanced chemical equation for the reaction between calcium and water?

- A $Ca + H_2O \rightarrow CaOH + H_2$
B $Ca + H_2O \rightarrow Ca(OH)_2 + H_2$
C $Ca + 2H_2O \rightarrow CaOH + H_2$
D $Ca + 2H_2O \rightarrow Ca(OH)_2 + H_2$

0620_s/13/qp12

Question 14

7 The equation shows the reaction between magnesium and sulfuric acid.



(Mg = 24, H = 1, S = 32, O = 16)

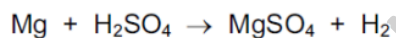
In this reaction, what mass of magnesium sulfate will be formed when 6g of magnesium reacts with excess sulfuric acid?

- A** 8 **B** 24 **C** 30 **D** 60

0620_s/13/qp12

Question 15

9 The equation for the reaction between magnesium and dilute sulfuric acid is shown.



M_r of MgSO_4 is 120

Which mass of magnesium sulfate will be formed if 12 g of magnesium are reacted with sulfuric acid?

- A** 5g **B** 10g **C** 60g **D** 120g

0620_s/12/qp11

Question 16

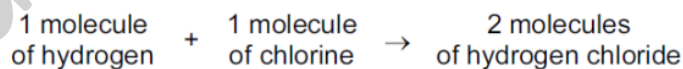
8 What is the relative molecular mass (M_r) of HNO_3 ?

- A** 5 **B** 31 **C** 32 **D** 63

0620_s/11/qp11

Question 17

10 Hydrogen and chlorine react as shown.



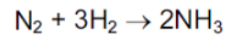
What is the equation for this reaction?

- A** $2\text{H} + 2\text{Cl} \rightarrow 2\text{HCl}$
B $2\text{H} + 2\text{Cl} \rightarrow \text{H}_2\text{Cl}_2$
C $\text{H}_2 + \text{Cl}_2 \rightarrow 2\text{HCl}$
D $\text{H}_2 + \text{Cl}_2 \rightarrow \text{H}_2\text{Cl}_2$

0620_s/10/qp11

Question 18

10 Nitrogen and hydrogen react together to form ammonia.



When completely converted, 7 tonnes of nitrogen gives 8.5 tonnes of ammonia.

How much nitrogen will be needed to produce 34 tonnes of ammonia?

- A** 7 tonnes **B** 8.5 tonnes **C** 28 tonnes **D** 34 tonnes

0620_s/09/qp11

Fahad H. Ahmad

Question 19

11 Which relative molecular mass, M_r , is **not** correct for the molecule given?

	molecule	M_r
A	ammonia, NH_3	17
B	carbon dioxide, CO_2	44
C	methane, CH_4	16
D	oxygen, O_2	16

0620_s/09/qp11

Question 20

11 Students are asked to state

- the number of atoms in one molecule of ethanoic acid,
- the relative molecular mass, M_r , of this acid.

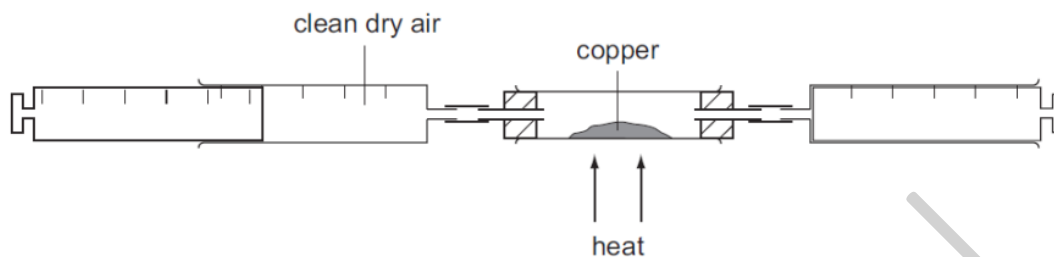
Which line is correct?

	number of atoms	M_r
A	8	32
B	8	60
C	9	26
D	9	46

0620_s/07/qp1

Question 21

- 29 A sample of clean, dry air is passed over hot copper until **all** the oxygen in the air reacts with the copper.



The volume of air decreases by 30 cm^3 .

What was the starting volume of the sample of air?

- A 60 cm^3 B 100 cm^3 C 150 cm^3 D 300 cm^3

0620_s/04/qp1

Question 22

- 10 The compound ethyl mercaptan, $\text{C}_2\text{H}_5\text{SH}$, has a very unpleasant smell.

What is its relative molecular mass?

- A 34 B 50 C 61 D 62

0620_s/04/qp1

Question 23

- 11 Water is formed when 48 g of oxygen combine with 6 g of hydrogen.

What mass of oxygen combines with 2 g of hydrogen?

- A 12 g B 16 g C 96 g D 144 g

0620_s/03/qp1

Question 24

9 The relative atomic mass of oxygen is 16 and that of hydrogen is 1.

This means that ... (i) ... of oxygen has the same mass as ... (ii) ... of hydrogen.

Which words correctly complete the gaps?

	gap (i)	gap (ii)
A	an atom	thirty-two molecules
B	an atom	eight molecules
C	a molecule	sixteen atoms
D	a molecule	eight atoms

0620_s/03/qp1

Question 25

9 The table shows the numbers of atoms present in the formula of some compounds.

Which row is **not** correct?

	numbers of atoms	formula
A	1 × calcium, 1 × carbon, 3 × oxygen	CaCO ₃
B	1 × carbon, 5 × hydrogen, 1 × oxygen	C ₂ H ₅ OH
C	1 × hydrogen, 1 × oxygen, 1 × sodium	NaOH
D	2 × hydrogen, 4 × oxygen, 1 × sulfur	H ₂ SO ₄

0620_w/14/qp13

Question 26

9 How many atoms of hydrogen are there in a molecule of ethanol, C₂H₅OH?

A 1 **B** 2 **C** 5 **D** 6

0620_w/14/qp11

Question 27

10 Iron forms an oxide with the formula Fe₂O₃.

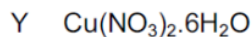
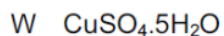
What is the relative formula mass of this compound?

A 76 **B** 100 **C** 136 **D** 160

0620_w/14/qp11

Question 28

9 The formulae of compounds W, X and Y are shown.



Which statement is correct?

- A W contains twice as many hydrogen atoms as oxygen atoms.
- B X contains the most oxygen atoms.
- C Y contains the most hydrogen atoms.
- D Y contains the same number of hydrogen and oxygen atoms.

0620_w/13/qp11

Question 29

10 Which relative molecular mass, M_r , is **not** correct for the molecule given?

	molecule	M_r
A	ammonia, NH_3	17
B	carbon dioxide, CO_2	44
C	methane, CH_4	16
D	oxygen, O_2	16

0620_w/13/qp11

Question 30

8 A compound has the formula $\text{CH}_3\text{CO}_2\text{H}$.

How should the relative molecular mass, M_r , of this compound be calculated?

- A $12 + 1 + 16$
- B $3(12 + 1) + 2(12 + 16) + 1$
- C $(4 \times 12) + (2 \times 1) + 16$
- D $(2 \times 12) + (4 \times 1) + (2 \times 16)$

0620_w/12/qp11

Question 31

8 The relative formula mass, M_r , of copper(II) sulfate, CuSO_4 , is 160.

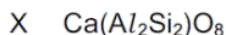
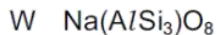
Which mass of sulfur is present in 160 g of copper(II) sulfate?

- A 16 g B 32 g C 64 g D 128 g

0620_w/11/qp11

Question 32

10 The chemical compositions of two substances, W and X, are given.



Which statements are correct?

- 1 W and X contain the same amount of oxygen.
- 2 W contains three times as much silicon as X.
- 3 X contains twice as much aluminium as W.

- A 1 and 2 B 1 and 3 C 2 and 3 D 1, 2 and 3

0620_w/10/qp11

Question 33

10 For each atom of carbon present in a molecule, there is an equal number of atoms of oxygen but twice as many atoms of hydrogen.

What is the formula of the molecule?

- A $\text{C}_2\text{H}_2\text{O}_2$ B $\text{C}_2\text{H}_2\text{O}_4$ C $\text{C}_2\text{H}_4\text{O}_2$ D $\text{C}_2\text{H}_6\text{O}$

0620_w/09/qp11

Question 34

11 Water is formed when 48 g of oxygen combine with 6 g of hydrogen.

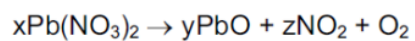
What mass of oxygen combines with 2 g of hydrogen?

- A 12 g B 16 g C 96 g D 144 g

0620_w/09/qp11

Question 35

10 Lead(II) nitrate can be decomposed as shown.



Which numbers x, y and z balance the equation?

	x	y	z
A	2	2	2
B	2	2	4
C	2	4	4
D	4	4	2

0620_w/08/qp1

Fahad H. Ahmad

IGCSE 0620 – Theory Questions

Question 1

- (c) An analysis of the compound, $\text{Pb}(\text{C}_2\text{H}_5)_n$, showed that 0.026 moles of Pb was combined with 0.104 moles of C_2H_5 groups.
What is the value of n? Show how you arrived at your answer.

.....
..... [2]

0620/w11/qp32

Question 2

- (c) Insoluble salts are made by precipitation. An equation for the preparation of barium sulfate is given below.



This reaction can be used to find x in the formula for hydrated magnesium sulfate $\text{MgSO}_4 \cdot x\text{H}_2\text{O}$.

A known mass of hydrated magnesium sulfate, $\text{MgSO}_4 \cdot x\text{H}_2\text{O}$, was dissolved in water. Excess aqueous barium chloride was added. The precipitate of barium sulfate was filtered, washed and dried. Finally it was weighed.

Mass of hydrated magnesium sulfate = 1.476 g

Mass of barium sulfate formed = 1.398 g

The mass of one mole of BaSO_4 = 233 g

The number of moles of BaSO_4 formed = [1]

The number of moles of $\text{MgSO}_4 \cdot x\text{H}_2\text{O}$ = [1]

The mass of one mole of $\text{MgSO}_4 \cdot x\text{H}_2\text{O}$ = g [1]

The mass of one mole of MgSO_4 = 120 g

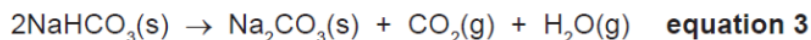
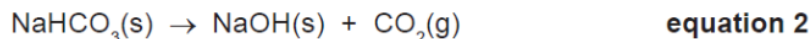
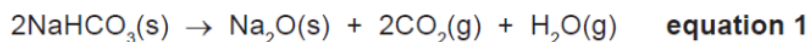
The mass of $x\text{H}_2\text{O}$ in one mole of $\text{MgSO}_4 \cdot x\text{H}_2\text{O}$ = [1]

x = [1]

0620/w11/qp32

Question 3

- (c) There are three possible equations for the thermal decomposition of sodium hydrogencarbonate.



The following experiment was carried out to determine which one of the above is the correct equation.

A known mass of sodium hydrogencarbonate was heated for ten minutes. It was then allowed to cool and weighed.

Results

Mass of sodium hydrogencarbonate = 3.36 g

Mass of the residue = 2.12 g

Calculation

M_r for NaHCO_3 = 84 g; M_r for Na_2O = 62 g; M_r for NaOH = 40 g

M_r for Na_2CO_3 = 106 g

- (i) Number of moles of NaHCO_3 used = [1]

- (ii) If residue is Na_2O , number of moles of Na_2O =

If residue is NaOH , number of moles of NaOH =

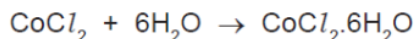
If residue is Na_2CO_3 , number of moles of Na_2CO_3 = [2]

- (iii) Use the number of moles calculated in (i) and (ii) to decide which one of the three equations is correct. Explain your choice.

.....
.....
..... [2]

Question 4

- (b) 6.0 g of cobalt(II) carbonate was added to 40 cm³ of hydrochloric acid, concentration 2.0 mol / dm³. Calculate the maximum yield of cobalt(II) chloride-6-water and show that the cobalt(II) carbonate was in excess.



Maximum yield

Number of moles of HCl used =

Number of moles of CoCl₂ formed =

Number of moles of CoCl₂·6H₂O formed =

Mass of one mole of CoCl₂·6H₂O = 238 g

Maximum yield of CoCl₂·6H₂O = g [4]

To show that cobalt(II) carbonate is in excess

Number of moles of HCl used = (use value from above)

Mass of one mole of CoCO₃ = 119 g

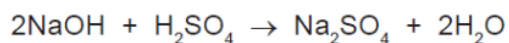
Number of moles of CoCO₃ in 6.0 g of cobalt(II) carbonate = [1]

Explain why cobalt(II) carbonate is in excess

..... [1]

Question 5

(d) 20.0 cm³ of sulfuric acid, concentration 0.30 mol / dm³, was added to 40 cm³ of sodium hydroxide, concentration 0.20 mol / dm³.

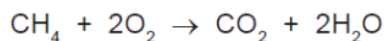


- (i)** How many moles of H₂SO₄ were added? [1]
- (ii)** How many moles of NaOH were used? [1]
- (iii)** Which reagent is in excess? Give a reason for your choice.
- reagent in excess [1]
- reason [1]
- [1]
- (iv)** Is the pH of the final mixture less than 7, equal to 7 or more than 7?
- [1]

0620/w10/qp32

Question 6

- (b) (i) In an experiment, a 60 cm³ sample of biogas required 80 cm³ of oxygen for the complete combustion of the methane in the sample.
Calculate the percentage of methane in the sample of biogas. Assume that biogas contains only methane and carbon dioxide.



.....
.....
..... [2]

- (ii) Carbon dioxide is acidic and methane is neutral.
Suggest another way of measuring the volume of methane in the sample.

.....
..... [2]

0620/w10/qp32

Question 7

- (b) Maleic acid is an unsaturated acid. 5.8 g of this acid contained 2.4 g of carbon, 0.2 g of hydrogen and 3.2 g of oxygen.

- (i) How do you know that the acid contained only carbon, hydrogen and oxygen?

.....
..... [1]

- (ii) Calculate the empirical formula of maleic acid.

Number of moles of carbon atoms =

Number of moles of hydrogen atoms =

Number of moles of oxygen atoms =

The empirical formula is [3]

(iii) The mass of one mole of maleic acid is 116 g. What is its molecular formula?

..... [2]

(iv) Maleic acid is dibasic. One mole of acid produces two moles of H^+ . Deduce its structural formula.

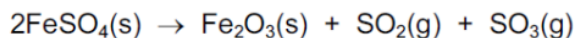
[2]

0620/w10/qp33

Fahad H. Ahmad

Question 8

- (c) 9.12 g of anhydrous iron(II) sulfate was heated. Calculate the mass of iron(III) oxide formed and the volume of sulfur trioxide, at r.t.p., formed.



mass of one mole of $\text{FeSO}_4 = 152 \text{ g}$

number of moles of FeSO_4 used =

number of moles of Fe_2O_3 formed =

mass of one mole of $\text{Fe}_2\text{O}_3 = \dots\dots\dots \text{ g}$

mass of iron(III) oxide formed =

number of moles of SO_3 formed =

volume of sulfur trioxide formed =

[6]

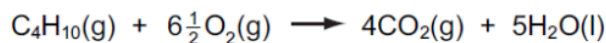
0620/w09/qp31

Question 9

- 7 The alkanes are generally unreactive. Their reactions include combustion, substitution and cracking.

(a) The complete combustion of an alkane gives carbon dioxide and water.

- (i) 10 cm^3 of butane is mixed with 100 cm^3 of oxygen, which is an excess. The mixture is ignited. What is the volume of unreacted oxygen left and what is the volume of carbon dioxide formed?



Volume of oxygen left =

Volume of carbon dioxide formed =

[2]

0620/w08/qp3

Question 10

(b) Benzene contains 92.3% of carbon and its relative molecular mass is 78.

(i) What is the percentage of hydrogen in benzene?

..... [1]

(ii) Calculate the ratio of moles of C atoms: moles of H atoms in benzene.

.....
..... [2]

(iii) Calculate its empirical formula and **then** its molecular formula.

The empirical formula of benzene is

The molecular formula of benzene is [2]

0620/w08/qp3

Question 11

(c) (i) Calculate the mass of one mole of $\text{Fe}_2\text{O}_3 \cdot 2\text{H}_2\text{O}$.

..... [1]

(ii) Use your answer to **(i)** to calculate the percentage of iron in rust.

.....
..... [2]

0620/w08/qp3

Question 12

- (ii) One piece of marble, 0.3 g, was added to 5 cm³ of hydrochloric acid, concentration 1.00 mol/dm³. Which reagent is in excess? Give a reason for your choice.

mass of one mole of CaCO₃ = 100 g

number of moles of CaCO₃ =

number of moles of HCl =

reagent in excess is

reason [4]

- (iii) Use your answer to (ii) to calculate the maximum volume of carbon dioxide produced measured at r.t.p.

..... [1]

0620/w07/qp3

Question 13

6 An ore of copper is the mineral, chalcopyrite. This is a mixed sulphide of iron and copper.

- (a) Analysis of a sample of this ore shows that 13.80 g of the ore contained 4.80 g of copper, 4.20 g of iron and the rest sulphur. Complete the table and calculate the empirical formula of chalcopyrite.

	copper	iron	sulphur
composition by mass /g	4.80	4.20	
number of moles of atoms			
simplest mole ratio of atoms			

The empirical formula is

[3]

..... [1]

0620/w06/qp3

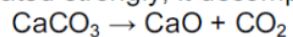
Question 14

3 Calcium carbonate is an important raw material.

(a) Name a rock which is made up of calcium carbonate.

..... [1]

(b) When calcium carbonate is heated strongly, it decomposes.



(i) Calculate the relative formula mass of:

CaCO₃

CaO [2]

(ii) 7.00 kg of calcium oxide was formed. What mass of calcium carbonate was heated?

.....

..... [2]

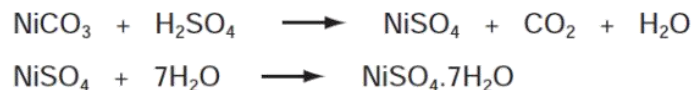
0620/w06/qp3

Fahad H. Ahmad

Question 15

- 6 (a) The following method is used to make crystals of hydrated nickel sulphate.

An excess of nickel carbonate, 12.0 g, was added to 40 cm³ of sulphuric acid, 2.0 mol/dm³. The unreacted nickel carbonate was filtered off and the filtrate evaporated to obtain the crystals.



Mass of one mole of NiSO₄·7H₂O = 281 g

Mass of one mole of NiCO₃ = 119 g

- (i) Calculate the mass of unreacted nickel carbonate.

Number of moles of H₂SO₄ in 40 cm³ of 2.0 mol/dm³ acid = 0.08

Number of moles of NiCO₃ reacted =

Mass of nickel carbonate reacted = g

Mass of unreacted nickel carbonate = g [3]

- (ii) The experiment produced 10.4 g of hydrated nickel sulphate. Calculate the percentage yield.

The maximum number of moles of NiSO₄·7H₂O that could be formed =

.....

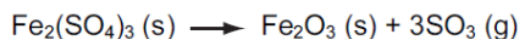
The maximum mass of NiSO₄·7H₂O that could be formed = g

The percentage yield = % [3]

Question 16

- (c) Iron(III) sulphate decomposes when heated. Calculate the mass of iron(III) oxide formed and the volume of sulphur trioxide produced when 10.0 g of iron(III) sulphate was heated.

Mass of one mole of $\text{Fe}_2(\text{SO}_4)_3$ is 400 g.



Number of moles of $\text{Fe}_2(\text{SO}_4)_3$ =	<input type="text"/>
Number of moles of Fe_2O_3 formed =	<input type="text"/>
Mass of iron(III) oxide formed =	<input type="text"/> g
Number of moles of SO_3 produced =	<input type="text"/>
Volume of sulphur trioxide at r.t.p. =	<input type="text"/> dm^3

[5]

0620/w04/qp3

Question 17

- (d) Sulphur dioxide reacts with chlorine in an addition reaction to form sulphuryl chloride.



8.0 g of sulphur dioxide was mixed with 14.2 g of chlorine. The mass of one mole of SO_2Cl_2 is 135 g.

Calculate the mass of sulphuryl chloride formed by this mixture.

Calculate the number of moles of SO_2 in the mixture =

Calculate the number of moles of Cl_2 in the mixture =

Which reagent was not in excess?

How many moles of SO_2Cl_2 were formed =

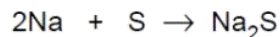
Calculate the mass of sulphuryl chloride formed = g

[5]

0620/w03/qp3

Question 18

- (f) Sodium reacts with sulphur to form sodium sulphide.



An 11.5 g sample of sodium is reacted with 10 g of sulphur. All of the sodium reacted but there was an excess of sulphur.
Calculate the mass of sulphur left unreacted.

- (i) Number of moles of sodium atoms reacted =
[2 moles of Na react with 1 mole of S]
- (ii) Number of moles of sulphur atoms that reacted =
- (iii) Mass of sulphur reacted =g
- (iv) Mass of sulphur left unreacted =g [4]

0620/w02/qp3

Question 19

- (c) The results of an investigation into the action of heat on copper(II) sulphate-5-water, a blue crystalline solid, are given below.

The formula is $\text{CuSO}_4 \cdot 5\text{H}_2\text{O}$ and the mass of one mole is 250 g

A 5.0 g sample of the blue crystals is heated to form 3.2 g of a white powder. With further heating this decomposes into a black powder and sulphur trioxide.

- (i) Name the white powder.
.....[1]
- (ii) What is observed when water is added to the white powder?
.....[1]
- (iii) Name the black powder.
.....[1]
- (iv) Calculate the mass of the black powder. Show your working.
.....
.....
.....[3]

0620/w02/qp3

Question 20

(e) The titanium ore contains 36.8% iron, 31.6% titanium and the remainder is oxygen.

(i) Determine the percentage of oxygen in this titanium compound.

percentage of oxygen = % [1]

(ii) Calculate the number of moles of atoms for each element.

The number of moles of Fe is shown as an example.

number of moles of Fe = $36.8/56 = 0.66$

number of moles of Ti =

number of moles of O = [1]

(iii) What is the simplest ratio for the moles of atoms?

Fe : Ti : O
..... [1]

(iv) What is the formula of this titanium compound?

..... [1]

0620/s10/qp31

Question 21

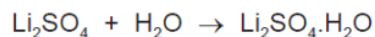
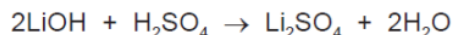
(ii) 20 cm³ of a gaseous hydrocarbon was mixed with an excess of oxygen, 200 cm³. The mixture was ignited. After cooling, 40 cm³ of oxygen and 100 cm³ of carbon dioxide remained. Deduce the formula of the hydrocarbon and the equation for its combustion. All volumes were measured at r.t.p..

.....
.....
.....
.....
..... [3]

0620/s14/qp33

Question 22

- (b) Using 25.0 cm³ of aqueous lithium hydroxide, concentration 2.48 mol/dm³, 2.20 g of hydrated lithium sulfate was obtained.
Calculate the percentage yield, giving your answer to **one** decimal place.



Number of moles of LiOH used =

Number of moles of Li₂SO₄·H₂O which could be formed =

Mass of one mole of Li₂SO₄·H₂O = 128 g

Maximum yield of Li₂SO₄·H₂O = g

Percentage yield =% [4]

- (c) An experiment was carried out to show that the formula of the hydrated salt is Li₂SO₄·H₂O. A sample of the hydrated salt was weighed and its mass recorded. It was then heated and the anhydrous salt was weighed. This procedure was repeated until two consecutive masses were the same. This procedure is called 'heating to constant mass'.

- (i) What is the reason for heating to constant mass?

..... [1]

- (ii) The mass of the hydrated salt is m₁ and the mass of the anhydrous salt is m₂. Explain how you could show that the hydrated salt has **one** mole of water of crystallisation per mole of the anhydrous salt.

.....
.....
..... [3]

Question 23

- (d) In the first experiment, the maximum volume of oxygen produced was 96 cm³ measured at r.t.p. Calculate the concentration of the aqueous hydrogen peroxide in mol/dm³.



number of moles of O₂ formed = [1]

number of moles of H₂O₂ in 40 cm³ of solution = [1]

concentration of the aqueous hydrogen peroxide in mol/dm³ =

..... [1]

0620/s14/qp31

Question 24

- 8 (a) Define the following

- (i) the mole

.....
..... [1]

- (ii) the Avogadro constant

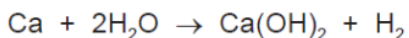
.....
..... [1]

- (b) Which **two** of the following contain the same number of molecules?
Show how you arrived at your answer.

- 2.0 g of methane, CH₄
- 8.0 g of oxygen, O₂
- 2.0 g of ozone, O₃
- 8.0 g of sulfur dioxide, SO₂

.....
.....
..... [2]

(c) 4.8 g of calcium is added to 3.6 g of water. The following reaction occurs.



(i) the number of moles of Ca =
the number of moles of H₂O = [1]

(ii) Which reagent is in excess? Explain your choice.
.....
..... [2]

(iii) Calculate the mass of the reagent named in (ii) which remained at the end of the experiment.
.....
..... [1]

[Total: 8]

0620/s13/qp33

Question 25

(d) 20 cm³ of a hydrocarbon was burnt in 175 cm³ of oxygen. After cooling, the volume of the remaining gases was 125 cm³. The addition of aqueous sodium hydroxide removed carbon dioxide leaving 25 cm³ of unreacted oxygen.

(i) volume of oxygen used = cm³ [1]

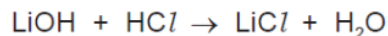
(ii) volume of carbon dioxide formed = cm³ [1]

(iii) Deduce the formula of the hydrocarbon and the balanced equation for the reaction.
.....
.....
..... [2]

0620/s13/qp33

Question 26

- (b) The concentration of the hydrochloric acid was 2.20 mol / dm^3 . The volume of acid needed to neutralise the 25.0 cm^3 of lithium hydroxide was 20.0 cm^3 . Calculate the concentration of the aqueous lithium hydroxide.



.....
.....
..... [2]

- (c) Lithium chloride forms three hydrates. They are $\text{LiCl} \cdot \text{H}_2\text{O}$, $\text{LiCl} \cdot 2\text{H}_2\text{O}$ and $\text{LiCl} \cdot 3\text{H}_2\text{O}$. Which **one** of these three hydrates contains 45.9 % of water? Show how you arrived at your answer.

.....
.....
..... [3]

0620/s13/qp31

Question 27

- (e) 0.01 moles of an alkene needed 2.4 g of oxygen for complete combustion. 2.2 g of carbon dioxide were formed. Determine the following mole ratio.

moles of alkene : moles of O_2 : moles of CO_2

From this ratio determine the formula of the alkene.

..... [3]

Write an equation for the complete combustion of this alkene.

..... [1]

[Total: 13]

0620/s12/qp32

Question 28

(b) A sample of rust had the following composition:

51.85 g of iron 22.22 g of oxygen 16.67 g of water.

Calculate the following and then write the formula for this sample of rust.

number of moles of iron atoms, Fe = [1]

number of moles of oxygen atoms, O = [1]

number of moles of water molecules, H₂O = [1]

simplest mole ratio Fe : O : H₂O is : :

formula for this sample of rust is [1]

0620/s12/qp31

Fahad H. Ahmad

Question 29

8 Hydrocarbons are compounds which contain only carbon and hydrogen.

(a) 20 cm³ of a gaseous hydrocarbon was burned in 120 cm³ of oxygen, which is in excess. After cooling, the volume of the gases remaining was 90 cm³. Aqueous sodium hydroxide was added to remove carbon dioxide, 30 cm³ of oxygen remained. All volumes were measured at r.t.p..

(i) Explain why it is essential to use excess oxygen.

.....
..... [2]

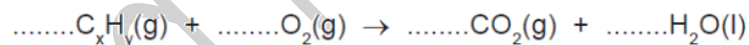
(ii) Carbon dioxide is slightly soluble in water. Why does it dissolve readily in the alkali, sodium hydroxide?

..... [1]

(iii) Complete the following.

volume of gaseous hydrocarbon =cm³
volume of oxygen used =cm³
volume of carbon dioxide formed =cm³ [2]

(iv) Use the above volume ratio to find the mole ratio in the equation below and hence find the formula of the hydrocarbon.

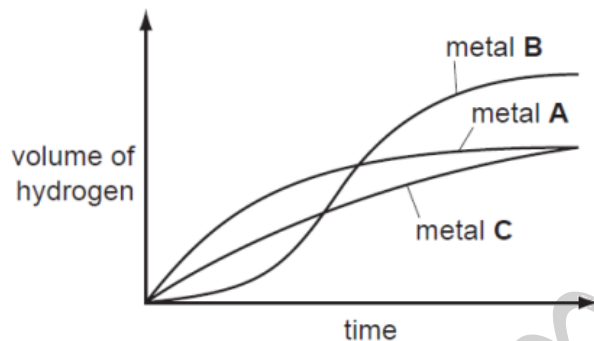


hydrocarbon formula = [2]

Question 30

- 7 Excess hydrochloric acid was added to powdered zinc. The hydrogen evolved was collected and its volume measured every 20 seconds.

The experiments were repeated at the same temperature using the same number of moles of powdered magnesium and aluminium.



- (a) Identify metals A, B and C by choosing from zinc, magnesium and aluminium. Give a reason for each choice.

metal A

.....

metal B

.....

metal C

..... [5]

- (b) Using 'moles', explain why two of the metals form the same volume of hydrogen but the third metal forms a larger volume.

.....

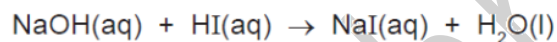
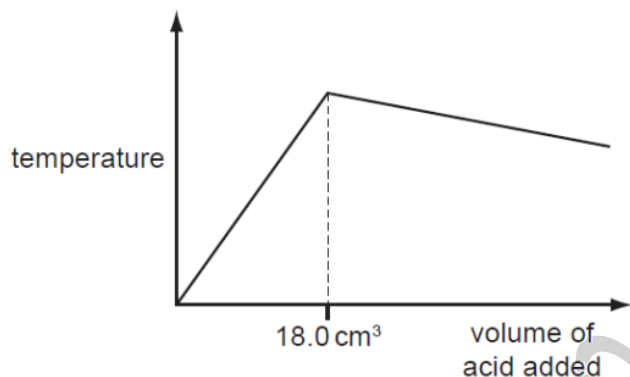
.....

..... [3]

[Total: 8]

Question 31

- (d) 20.0 cm³ of aqueous sodium hydroxide, 2.00 mol / dm³, was placed in a beaker. The temperature of the alkali was measured and 1.0 cm³ portions of hydriodic acid were added. After each addition, the temperature of the mixture was measured. Typical results are shown on the graph.



- (i) Explain why the temperature increases rapidly at first then stops increasing.

.....
..... [2]

- (ii) Suggest why the temperature drops after the addition of 18.0 cm³ of acid.

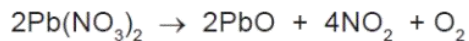
..... [1]

- (iii) In another experiment, it was shown that 15.0 cm³ of the acid neutralised 20.0 cm³ of aqueous sodium hydroxide, 1.00 mol / dm³. Calculate the concentration of the acid.

.....
..... [2]

Question 32

- (c) A 5.00 g sample of impure lead(II) nitrate was heated. The volume of oxygen formed was 0.16 dm³ measured at r.t.p. The impurities did not decompose. Calculate the percentage of lead(II) nitrate in the sample.



Number of moles of O₂ formed =

Number of moles of Pb(NO₃)₂ in the sample =

Mass of one mole of Pb(NO₃)₂ = 331 g

Mass of lead(II) nitrate in the sample = g

Percentage of lead(II) nitrate in sample = [4]

0620/s10/qp32

Fahad H. Ahmad

Question 33

9 Quantities of chemicals, expressed in moles, can be used to find the formula of a compound, to establish an equation and to determine reacting masses.

(a) A compound contains 72% magnesium and 28% nitrogen. What is its empirical formula?

.....
.....
.....
..... [2]

(b) A compound contains only aluminium and carbon. 0.03 moles of this compound reacted with excess water to form 0.12 moles of $Al(OH)_3$ and 0.09 moles of CH_4 .

Write a balanced equation for this reaction.

.....
.....
.....
..... [2]

(c) 0.07 moles of silicon reacts with 25 g of bromine.



(i) Which one is the limiting reagent? Explain your choice.

.....
.....
.....
..... [3]

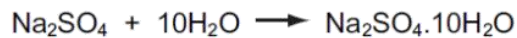
(ii) How many moles of $SiBr_4$ are formed?

..... [1]

[Total: 8]

Question 34

- (b) Using 25.0 cm³ of aqueous sodium hydroxide, 2.24 mol / dm³, 3.86 g of crystals were obtained. Calculate the percentage yield.



Number of moles of NaOH used =

Maximum number of moles of Na₂SO₄·10H₂O that could be formed =

Mass of one mole of Na₂SO₄·10H₂O = 322 g

Maximum yield of sodium sulphate-10-water = g

Percentage yield = % [4]

0620/s08/qp31

Fahad H. Ahmad

Question 35

(d) A better way of measuring the degree of unsaturation is to find the iodine number of the unsaturated compound. This is the mass of iodine that reacts with all the double bonds in 100 g of the fat.

Use the following information to calculate the number of double bonds in one molecule of the fat.

Mass of one mole of the fat is 884 g.

One mole of I_2 reacts with one mole $\begin{array}{c} \diagup \quad \diagdown \\ \text{C}=\text{C} \\ \diagdown \quad \diagup \end{array}$.

The iodine number of the fat is 86.2 g.

Complete the following calculation.

100 g of fat reacts with 86.2 g of iodine.

884 g of fat reacts with g of iodine.

One mole of fat reacts with moles of iodine molecules.

Number of double bonds in one molecule of fat is [3]

[Total: 14]

Question 36

(d) Propene reacts with hydrogen iodide to form 2-iodopropane.



1.4 g of propene produced 4.0 g of 2-iodopropane.

Calculate the percentage yield.

moles of $\text{CH}_3\text{-CH=CH}_2$ reacted =

maximum moles of $\text{CH}_3\text{-CHI-CH}_3$ that could be formed =

mass of one mole of $\text{CH}_3\text{-CHI-CH}_3 = 170 \text{ g}$

maximum mass of 2-iodopropane that could be formed =

percentage yield% [4]

0620/s06/qp3

Question 37

(d) Gypsum is hydrated calcium sulphate, $\text{CaSO}_4 \cdot x\text{H}_2\text{O}$. It contains 20.9% water by mass. Calculate x.

M_r : CaSO_4 , 136; H_2O , 18.

79.1 g of $\text{CaSO}_4 = \dots\dots\dots$ moles

20.9 g of $\text{H}_2\text{O} = \dots\dots\dots$ moles

x = [3]

0620/s05/qp3

Question 38

(c) 0.015 moles of iodine react with 0.045 moles of chlorine to form 0.030 moles of a single product. Complete the equation.



0620/s05/qp3

Fahad H. Ahmad

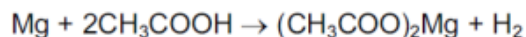
Question 39

7 Chemists use the concept of the mole to calculate the amounts of chemicals involved in a reaction.

(a) Define *mole*.

..... [1]

(b) 3.0 g of magnesium was added to 12.0 g of ethanoic acid.



The mass of one mole of Mg is 24 g.

The mass of one mole of CH₃COOH is 60 g.

(i) Which one, magnesium or ethanoic acid, is in excess? You must show your reasoning.

..... [3]

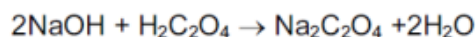
(ii) How many moles of hydrogen were formed?

..... [1]

(iii) Calculate the volume of hydrogen formed, measured at r.t.p.

..... [2]

(c) In an experiment, 25.0 cm³ of aqueous sodium hydroxide, 0.4 mol/dm³, was neutralised by 20.0 cm³ of aqueous oxalic acid, H₂C₂O₄.



Calculate the concentration of the oxalic acid in mol/dm³.

(i) Calculate the number of moles of NaOH in 25.0 cm³ of 0.4 mol/dm³ solution.

..... [1]

(ii) Use your answer to (i) and the mole ratio in the equation to find out the number of moles of H₂C₂O₄ in 20 cm³ of solution.

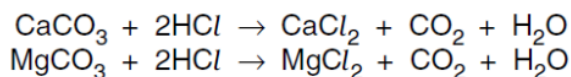
..... [1]

(iii) Calculate the concentration, mol/dm³, of the aqueous oxalic acid.

..... [2]

Question 40

- (c) Each tablet contains the same number of moles of CaCO_3 and MgCO_3 . One tablet reacted with excess hydrochloric acid to produce 0.24 dm^3 of carbon dioxide at r.t.p.



- (i) Calculate how many moles of CaCO_3 there are in one tablet.

number of moles CO_2 =

number of moles of CaCO_3 and MgCO_3 =

number of moles of CaCO_3 = [3]

- (ii) Calculate the volume of hydrochloric acid, 1.0 mol/dm^3 , needed to react with one tablet.

number of moles of CaCO_3 and MgCO_3 in one tablet =
Use your answer to (c)(i).

number of moles of HCl needed to react with one tablet =

volume of hydrochloric acid, 1.0 mol/dm^3 , needed to react with one tablet = [2]

0620/s03/qp3

Question 41

- (c) 6.31 g of cobalt(II) chloride-6-water crystals were obtained. Calculate the percentage yield to 1 decimal place.

number of moles of HCl in 50 cm^3 of acid, concentration 2.2 mol/dm^3 =

maximum number of moles of $\text{CoCl}_2 \cdot 6\text{H}_2\text{O}$ which could be formed =

mass of 1 mole of $\text{CoCl}_2 \cdot 6\text{H}_2\text{O}$ = 238 g

maximum yield of $\text{CoCl}_2 \cdot 6\text{H}_2\text{O}$ = g

percentage yield =%

[4]

0620/w14/qp33

Question 42

(b) Compound X is a hydrocarbon. It contains 85.7% of carbon. The mass of one mole of X is 84 g.

(i) What is the percentage of hydrogen in the compound ?

..... [1]

(ii) Calculate the empirical formula of X. Show your working.

empirical formula = [3]

(iii) What is the molecular formula of compound X?

..... [1]

0620/w14/qp33

Question 43

(iii) A mineral of the type $\text{FeSO}_4 \cdot x\text{H}_2\text{O}$ contains 37.2% of water. Complete the calculation to determine x.

mass of one mole of H_2O = 18 g

mass of water in 100 g of $\text{FeSO}_4 \cdot x\text{H}_2\text{O}$ = 37.2 g

number of moles of H_2O in 100 g of $\text{FeSO}_4 \cdot x\text{H}_2\text{O}$ =

mass of FeSO_4 in 100 g of $\text{FeSO}_4 \cdot x\text{H}_2\text{O}$ = g

mass of one mole of FeSO_4 = 152 g

number of moles of FeSO_4 in 100 g of $\text{FeSO}_4 \cdot x\text{H}_2\text{O}$ =

x =

[4]

0620/w14/qp32

Question 44

- (ii) 6.0 g of ethanoic acid, $M_r = 60$, was reacted with 5.5 g of ethanol, $M_r = 46$.
Determine which is the limiting reagent and the maximum yield of ethyl ethanoate, $M_r = 88$.

number of moles of ethanoic acid = [1]

number of moles of ethanol = [1]

the limiting reagent is [1]

number of moles of ethyl ethanoate formed = [1]

maximum yield of ethyl ethanoate = [1]

0620/w14/qp31

Question 45

- (ii) What mass of silver(I) nitrate is needed to prepare 100 cm³ of silver(I) nitrate solution, concentration 0.2 mol/dm³?
The mass of one mole of AgNO₃ is 170 g.

.....
..... [2]

- (iii) What is the maximum mass of silver(I) chromate(VI) which could be obtained from 20 cm³ of aqueous silver(I) nitrate, concentration 0.2 mol/dm³?

number of moles of AgNO₃ used = [1]

number of moles of Ag₂CrO₄ formed = [1]


mass of one mole of Ag₂CrO₄ = 332 g

mass of Ag₂CrO₄ formed = g [1]

0620/w13/qp32

Question 46

- (c) Basic lead(II) carbonate has a formula of the type $x\text{PbCO}_3 \cdot y\text{Pb(OH)}_2$ where x and y are whole numbers.
Determine x and y from the following information.



When heated, the basic lead(II) carbonate gave 2.112 g of carbon dioxide and 0.432 g of water.

Mass of one mole of $\text{CO}_2 = 44 \text{ g}$

Mass of one mole of $\text{H}_2\text{O} = 18 \text{ g}$

Number of moles of CO_2 formed = [1]

Number of moles of H_2O formed = [1]

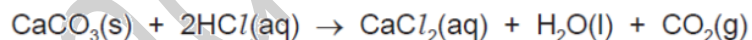
x = and y =

Formula of basic lead(II) carbonate is [1]

0620/w13/qp31

Question 47

- (d) Calculate the maximum mass of carbon dioxide given off when 20.0 g of small lumps of calcium carbonate react with 40 cm^3 of hydrochloric acid, concentration 2.0 mol/dm^3 .



number of moles of HCl used =

mass of carbon dioxide = g [4]

0620/w13/qp31

Question 48

(b) Another hydride of arsenic has the composition below.

arsenic 97.4% hydrogen 2.6%

(i) Calculate the empirical formula of this hydride **from the above data**.
Show your working.

.....
..... [2]

(ii) The mass of one mole of this hydride is 154 g. What is its molecular formula?

..... [1]

(iii) Deduce the structural formula of this hydride.

[1]

0620/w12/qp33

Question 49

(d) Sulfur dioxide can also be made by the reaction between a sulfite and an acid.



Excess hydrochloric acid was added to 3.15 g of sodium sulfite. Calculate the maximum volume, measured at r.t.p., of sulfur dioxide which could be formed.

The mass of one mole of Na_2SO_3 is 126 g.

.....
.....
..... [3]

0620/w12/qp32

Question 50

(c) In the above experiment, 50.0 cm^3 of hydrochloric acid of concentration 2.0 mol/dm^3 was used. 6.4 g of $\text{SrCl}_2 \cdot 6\text{H}_2\text{O}$ was made.
Calculate the percentage yield.

number of moles of HCl used =

number of moles of $\text{SrCl}_2 \cdot 6\text{H}_2\text{O}$ which could be formed =

mass of one mole of $\text{SrCl}_2 \cdot 6\text{H}_2\text{O}$ is 267 g

theoretical yield of $\text{SrCl}_2 \cdot 6\text{H}_2\text{O}$ =g

percentage yield =% [4]

0620/w12/qp31

Question 51

(c) Fluorine, the most reactive halogen, forms compounds with the other halogens. It forms two compounds with bromine.
Deduce their formulae from the following information.

compound 1

The mass of one mole of this compound is 137 g .

Its formula is [1]

compound 2

0.02 moles of this compound contain 0.02 moles of bromine atoms and 0.1 moles of fluorine atoms.

Its formula is [1]

0620/w12/qp31
