

Centre Number	Candidate Number	Name
---------------	------------------	------

UNIVERSITY OF CAMBRIDGE INTERNATIONAL EXAMINATIONS  
International General Certificate of Secondary Education

**GEOGRAPHY**

**0460/02**

Paper 2

May/June 2006

**1 hour 30 minutes**

Additional Materials: ruler  
protractor

1:50000 Survey Map Extract is enclosed with this question paper.

**READ THESE INSTRUCTIONS FIRST**

Write your Centre number, candidate number and name on all the work you hand in.  
Write in dark blue or black pen.  
You may use a soft pencil for any diagrams, graphs or rough working.  
Do not use staples, paper clips, highlighters, glue or correction fluid.

Answer **all** questions.  
The Insert contains Photographs A and B for Question 3.  
Sketch maps and diagrams should be drawn whenever they serve to illustrate an answer.  
At the end of the examination, fasten all your work securely together.

The number of marks is given in brackets [ ] at the end of each question or part question.

For Examiner's Use	
1	
2	
3	
4	
5	
6	
<b>Total</b>	

1 The map extract is for part of the island of Jamaica. The scale is 1:50,000.

(a) Fig. 1 shows the position of some features in part of the map extract. Study the map extract and Fig. 1 and answer the questions on the opposite page.

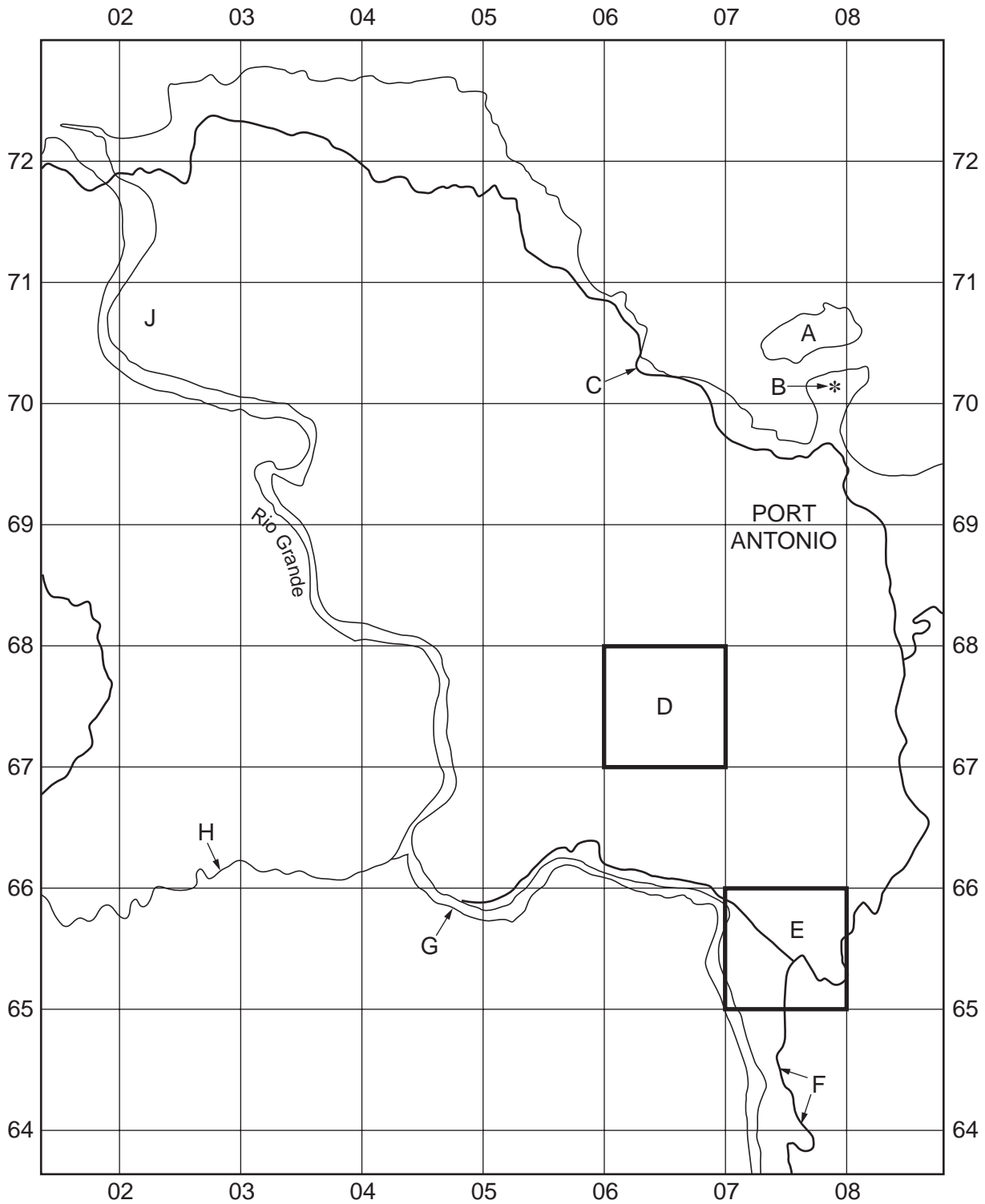


Fig. 1

Using the map extract, name the following features shown on Fig. 1:

(i) island A (0770),  
.....[1]

(ii) feature B at Fort George (079701),  
.....[1]

(iii) the class of road at C (0670),  
.....[1]

(iv) the vegetation in area D (0667),  
.....[1]

(v) **two** services or functions provided at Fellowship (E) (0765),  
.....[1]

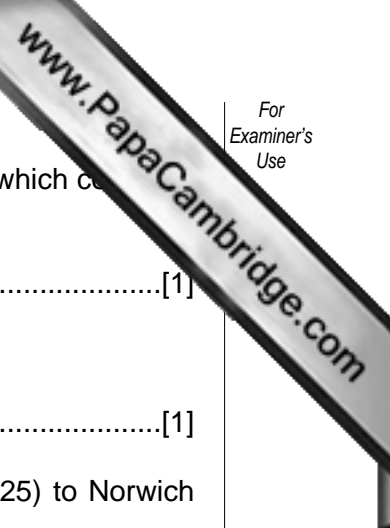
(vi) the settlement pattern at F (0764),  
.....[1]

(vii) the shape of the river course at G (0465, 0565),  
.....[1]

(viii) river H (0266),  
.....[1]

(ix) the plantation crop in area J (0270).  
.....[1]





(d) (i) A boat travels from Folly Point (088707) to Ship Head (050726). In which direction does the boat travel?

.....[1]

(ii) State the six figure grid reference for Ship Rock on the north coast.

.....[1]

(iii) Measure the distance along the railway from Snow Hill Halt (030725) to Norwich Halt (056712). Give your answer in metres.

.....metres [1]

- 2 Fig. 3 shows data from six weather stations in the county of Cumbria, northern England, for December 2003.

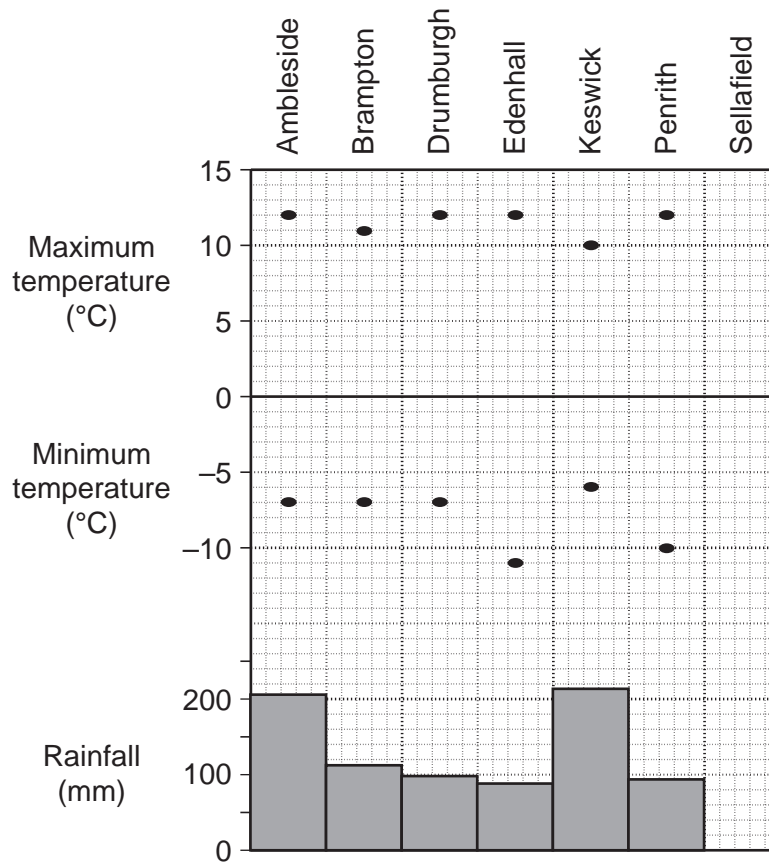


Fig. 3

- (a) (i) Which weather station had the lowest rainfall?

.....[1]

- (ii) State the rainfall total for Ambleside.

.....[1]

- (iii) State the minimum temperature for Keswick.

.....[1]

- (iv) Which weather station had the smallest range of temperature?

.....[1]

- (b) The weather station at Sellafield had a maximum temperature of  $13^{\circ}\text{C}$ , a minimum temperature of  $-3^{\circ}\text{C}$  and a rainfall total of 118 mm. Use this information to complete Fig. 3. [2]



3 Photographs A and B (Insert) show two upland areas from different climatic zones in the world.

(a) Describe the relief features shown in Photograph A.

.....  
.....  
.....  
.....  
.....  
.....  
.....[3]

(b) Describe the vegetation and drainage shown in the two photographs.

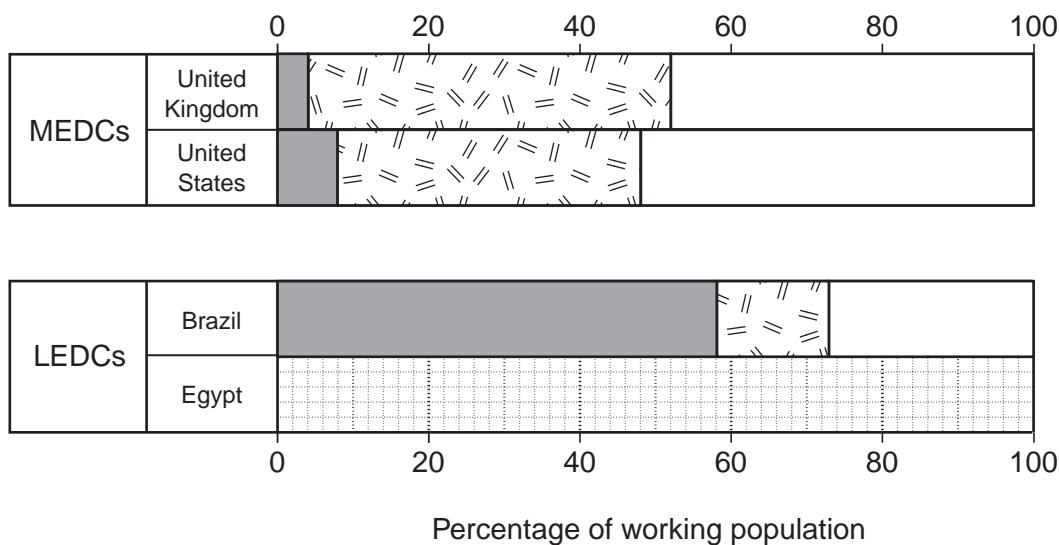
Photograph A .....  
.....  
.....  
.....  
.....  
.....

Photograph B .....  
.....  
.....  
.....  
.....  
.....[5]





- 4 Fig. 5 shows the percentages of the working population in primary, secondary and tertiary industries in four countries.



Key



Primary industries



Secondary industries



Tertiary industries

**Fig. 5**

- (a) State the percentage of the population in secondary industry in the United Kingdom.

.....[1]

- (b) The percentages of working population for Egypt are primary 56%, secondary 8%, tertiary 36%.

- (i) Complete Fig. 5 by adding the information for Egypt. Use the key provided. [2]

- (ii) Plot the information for Egypt on the triangular graph, Fig. 6, opposite. Show the position with a labelled dot. [2]



5 Table 1, Fig. 7 and Fig. 8 give information about world coal and oil reserves.

(a) Complete Table 1 by giving the percentage of coal reserves for Latin America.

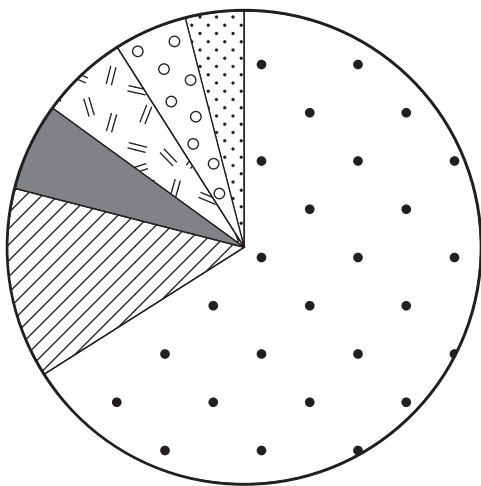
**World Coal Reserves**

Area	Amount (billions of tonnes)	Percentage
Asia & Australasia	337.2	32
Africa	62.3	6
Latin America	11.4	
Europe & Russia	379.1	37
North America	249.2	24
Total	1039.2	100

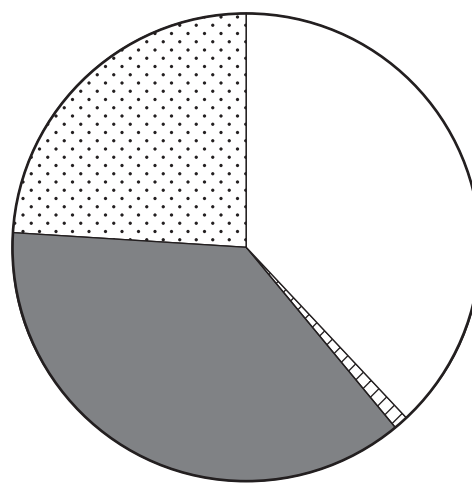
**Table 1**

(b) Use the information in Table 1 to complete Fig. 7 for world coal reserves. Use the key provided. [1]

**World Oil Reserves**



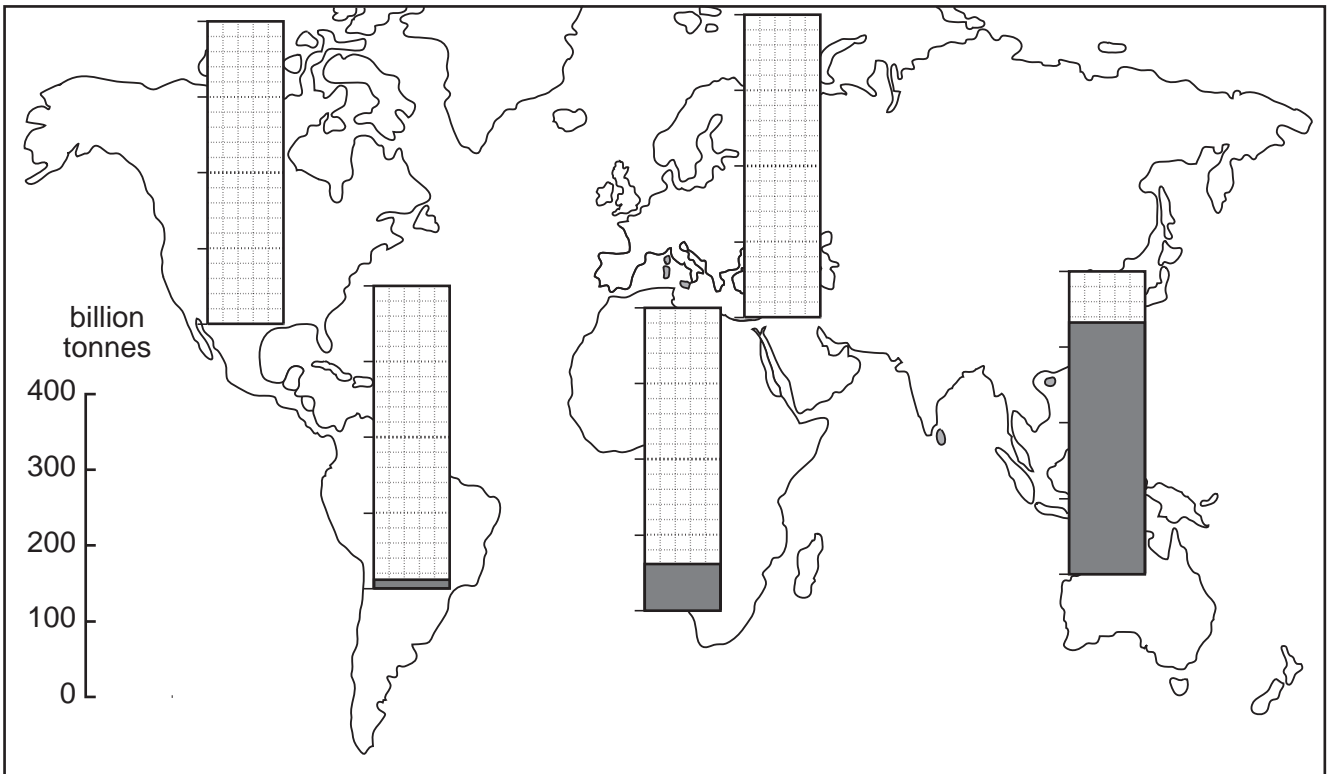
**World Coal Reserves**



**Fig. 7**

(c) Use the information in Table 1 to complete Fig. 8 by completing the bar graphs reserves for North America and Europe & Russia.

**World Coal Reserves (billions of tonnes)**



**Fig. 8**

(d) Complete the following paragraph by writing in the spaces.

Over half of the world's oil reserves are found in ..... . The world's coal reserves are found mostly in three of the five areas which are:

Asia and Australasia; Europe and Russia; and .....

The continent with less than 10% of the world reserves of both oil and coal is .....

Oil and coal are non-renewable energy resources. They also have the disadvantage that burning them causes atmospheric pollution and .....

Countries are developing the use of renewable energy resources such as .....

[5]

6 Fig. 9 is a map of an area of Europe where a motorway is to be built to by-pass a large

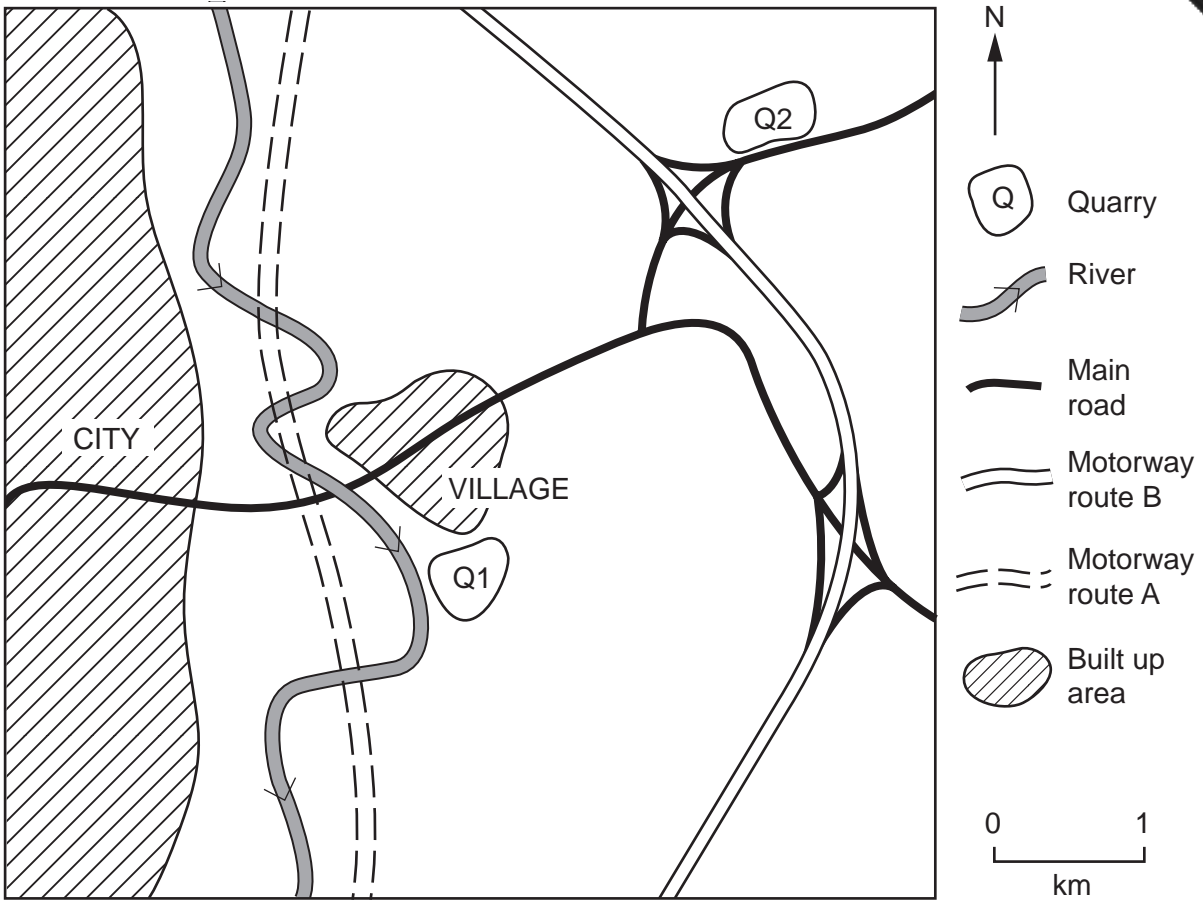


Fig. 9

(a) Two possible routes for the motorway, **A** and **B** are shown on Fig. 9. Route **B** was chosen and Route **A** was rejected.

Suggest **two** reasons for the rejection of Route **A**.

1 .....

.....

2 .....

.....[2]



---

*Copyright Acknowledgements:*

Question 1 © Director of Surveys, Jamaica.

Question 2 Fig. 3 © *HIGCSE Geography Module 4*, Cambridge University Press.

Question 3 Photographs A & B; D. Kelly © UCLES.

Question 5 Table 1 & Fig. 7 © Collins Bartholomew Ltd 1994. Reproduced by Kind Permission of HarperCollins Publishers.

Permission to reproduce items where third-party owned material protected by copyright is included has been sought and cleared where possible. Every reasonable effort has been made by the publisher (UCLES) to trace copyright holders, but if any items requiring clearance have unwittingly been included, the publisher will be pleased to make amends at the earliest possible opportunity.

University of Cambridge International Examinations is part of the University of Cambridge Local Examinations Syndicate (UCLES), which is itself a department of the University of Cambridge.