

**GEOGRAPHY**

**0976/12**

Paper 1

**May/June 2019**

INSERT

**1 hour 45 minutes**

---

**READ THESE INSTRUCTIONS FIRST**

The Insert contains Figs. 3.1 and 3.2 for Question 3, Fig. 4.1 for Question 4, Figs. 5.2 and 5.3 for Question 5, and Fig. 6.1 for Question 6.

The Insert is **not** required by the Examiner.



---

This document consists of 7 printed pages and 1 blank page.

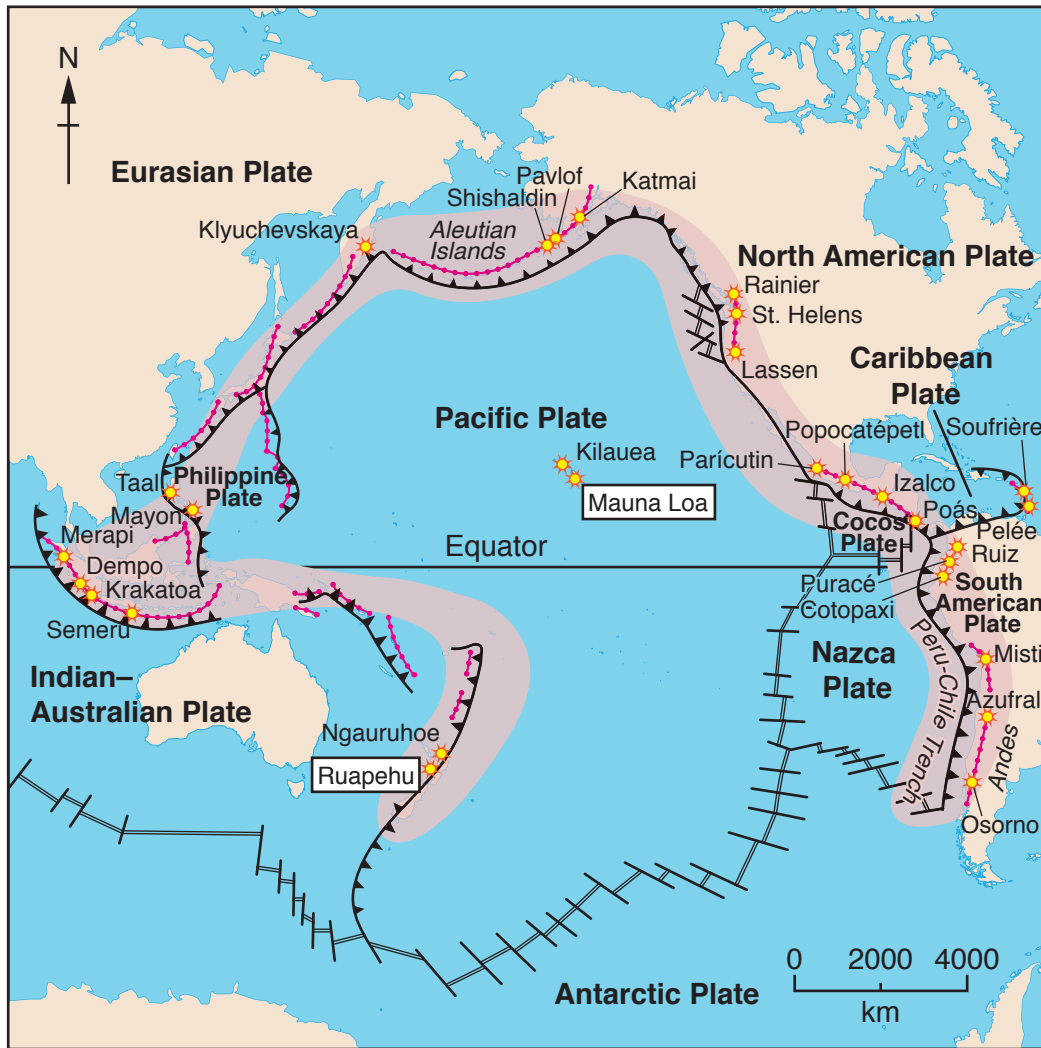


Fig. 3.1 for Question 3

Fig. 3.2 for Question 3



Fig. 4.1 for Question 4



**Key**






-  spreading plate boundaries
-  converging plate boundaries
-  volcanic arcs
-  major active volcanoes
-  Pacific Ring of Fire

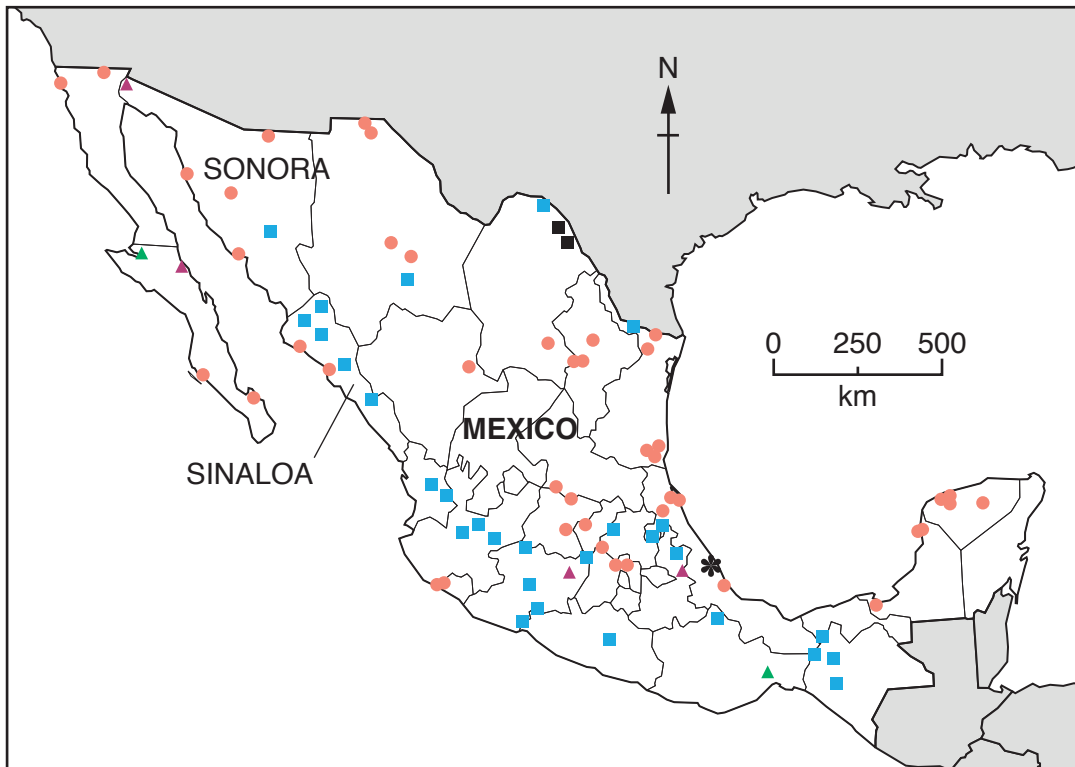
Fig. 5.2 for Question 5



Fig. 5.3 for Question 5



Fig. 6.1 for Question 6



**Key**  
source of electricity

- hydro-electric
- \* nuclear
- ▲ geothermal
- thermal (oil)
- coal-fired
- ▲ wind
- state boundary

**BLANK PAGE**

---

Permission to reproduce items where third-party owned material protected by copyright is included has been sought and cleared where possible. Every reasonable effort has been made by the publisher (UCLES) to trace copyright holders, but if any items requiring clearance have unwittingly been included, the publisher will be pleased to make amends at the earliest possible opportunity.

To avoid the issue of disclosure of answer-related information to candidates, all copyright acknowledgements are reproduced online in the Cambridge Assessment International Education Copyright Acknowledgements Booklet. This is produced for each series of examinations and is freely available to download at [www.cambridgeinternational.org](http://www.cambridgeinternational.org) after the live examination series.

Cambridge Assessment International Education is part of the Cambridge Assessment Group. Cambridge Assessment is the brand name of the University of Cambridge Local Examinations Syndicate (UCLES), which itself is a department of the University of Cambridge.