

Layout – 2021/20 IGCSE 0417

1. Mar/2021/Paper_12/No.4a

The table shows a comparison of two different types of fitness tracker. A fitness tracker contains a microprocessor, is worn around the wrist and monitors physical readings of the wearer.

Name of fitness tracker	Flexi-byt 6	FitB 4
Battery life in days	20 days	7 days
Method of internet connection	Bluetooth	WiFi
Water resistant	100 m	10 m
GPS	Y	N
Cost	INR 22 855	INR 10 700

(a) You have been asked to design a poster to show this data for the two fitness trackers.

Describe how you would use **six** different design features to enhance the data in this poster. The poster must be suitable for an audience of adult customers.

1.....

.....

2.....

.....

3.....

.....

4.....

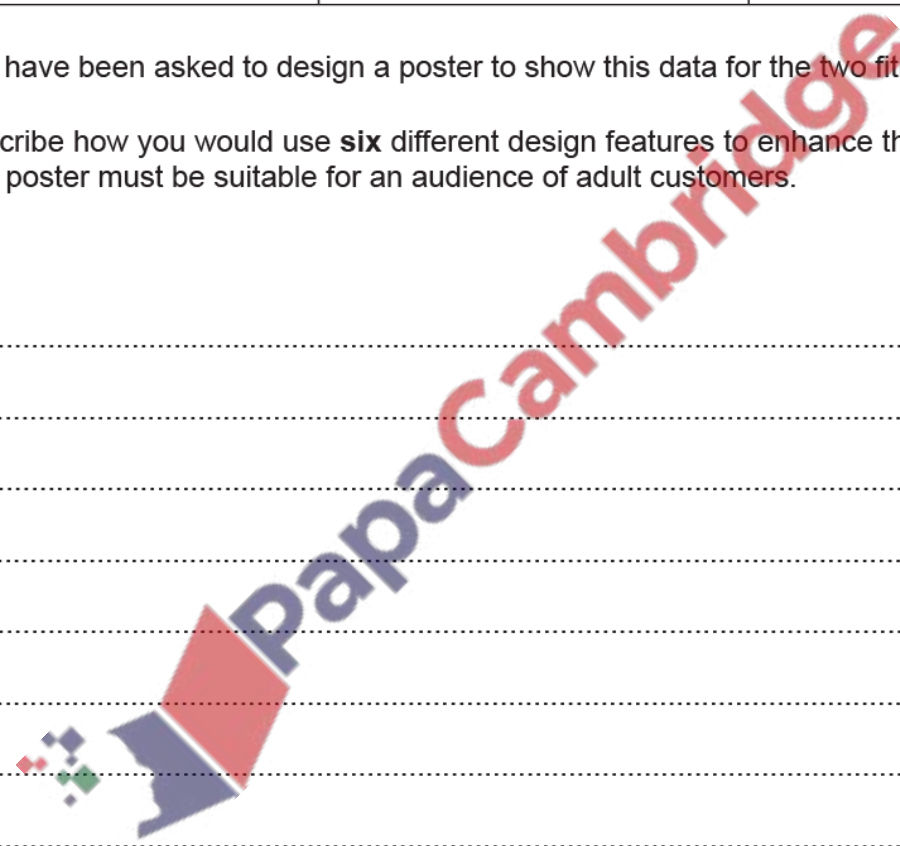
.....

5.....

.....

6.....

.....





[6]

2. [June/2020/Paper_13/No.6b](#)

- (b) Design an online data entry form which could be used to enter the details of one member, using all the fields shown in the table.

In your design include appropriate spacing for each field and navigational aids. Do **not** include data in the form.





[8]