



Cambridge IGCSE™

CANDIDATE
NAME

CENTRE
NUMBER

--	--	--	--	--

CANDIDATE
NUMBER

--	--	--	--



CAMBRIDGE INTERNATIONAL MATHEMATICS

0607/22

Paper 2 (Extended)

May/June 2021

45 minutes

You must answer on the question paper.

You will need: Geometrical instruments

INSTRUCTIONS

- Answer **all** questions.
- Use a black or dark blue pen. You may use an HB pencil for any diagrams or graphs.
- Write your name, centre number and candidate number in the boxes at the top of the page.
- Write your answer to each question in the space provided.
- Do **not** use an erasable pen or correction fluid.
- Do **not** write on any bar codes.
- Calculators must **not** be used in this paper.
- You may use tracing paper.
- You must show all necessary working clearly and you will be given marks for correct methods even if your answer is incorrect.
- All answers should be given in their simplest form.

INFORMATION

- The total mark for this paper is 40.
- The number of marks for each question or part question is shown in brackets [].

This document has **8** pages.

Formula List

For the equation $ax^2 + bx + c = 0$ $x = \frac{-b \pm \sqrt{b^2 - 4ac}}{2a}$

Curved surface area, A , of cylinder of radius r , height h . $A = 2\pi rh$

Curved surface area, A , of cone of radius r , sloping edge l . $A = \pi rl$

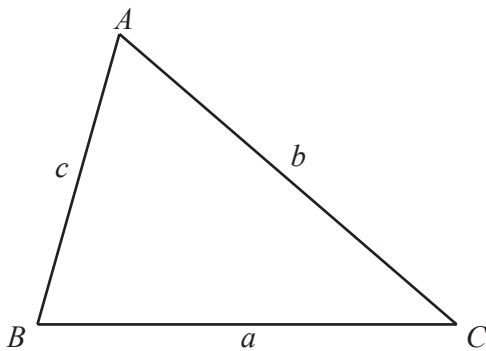
Curved surface area, A , of sphere of radius r . $A = 4\pi r^2$

Volume, V , of pyramid, base area A , height h . $V = \frac{1}{3}Ah$

Volume, V , of cylinder of radius r , height h . $V = \pi r^2 h$

Volume, V , of cone of radius r , height h . $V = \frac{1}{3}\pi r^2 h$

Volume, V , of sphere of radius r . $V = \frac{4}{3}\pi r^3$



$$\frac{a}{\sin A} = \frac{b}{\sin B} = \frac{c}{\sin C}$$

$$a^2 = b^2 + c^2 - 2bc \cos A$$

$$\text{Area} = \frac{1}{2}bc \sin A$$

Answer **all** the questions.

1 Work out $\frac{3.6}{0.004}$.

..... [1]

2 These are the masses, in kilograms, of 16 newborn babies.

2.5 3.2 3.8 3.2 1.9 3.4 1.7 4.1
3.0 2.8 4.0 2.7 3.9 2.7 4.1 3.7

Complete the ordered stem-and-leaf diagram for the masses.



Key: 3 | 2 = 3.2

[2]

3 Work out $2\frac{1}{2} \div 3\frac{1}{4}$.

Give your answer as a fraction in its simplest form.

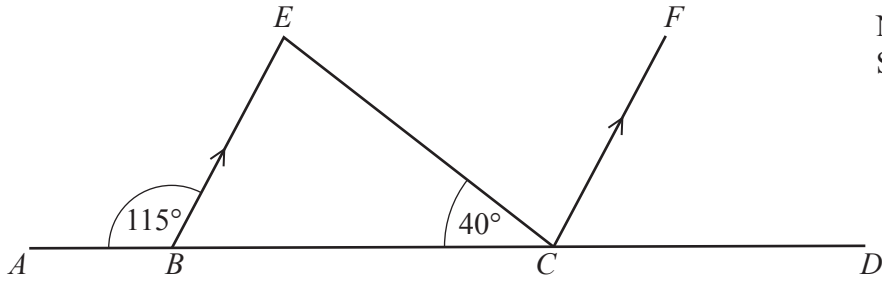
..... [3]

4 Insert **two** pairs of brackets to make this statement correct.

$$3 \times 7 - 3 + 4 \times 2 = 32$$

[1]

5



NOT TO SCALE

$ABCD$ is a straight line and BE is parallel to CF .

Find angle ECF .

Angle $ECF = \dots\dots\dots$ [2]

6 (a) Factorise $a^2 - b^2$.

$\dots\dots\dots$ [1]

(b) Work out $5.37^2 - 4.63^2$.

$\dots\dots\dots$ [2]

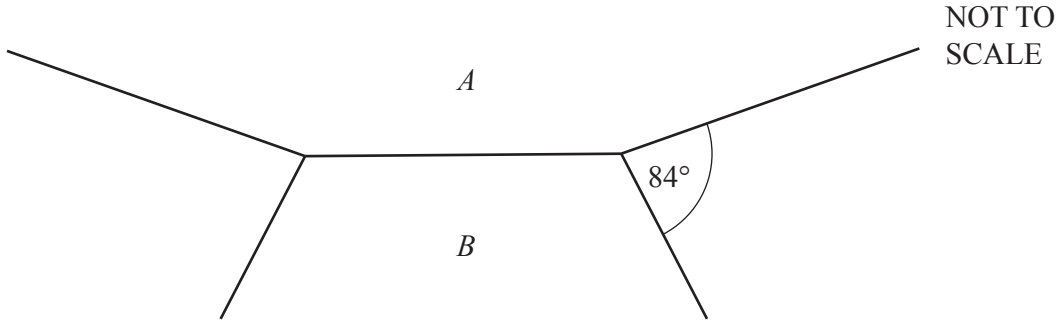
7 Solve $2x + 3 < 5x - 12$.

$\dots\dots\dots$ [2]

8 Expand and simplify $(2\sqrt{3} - 5)(4 + \sqrt{3})$.

$\dots\dots\dots$ [2]

9



The diagram shows part of polygon A and part of polygon B .
 A is a regular polygon with n sides.
 B is a regular hexagon.

Find the value of n .

$n =$ [3]

10 $c = 4 \times 10^7$ $d = 5.8 \times 10^6$

Work out, giving your answers in standard form,

(a) c^2 ,

..... [2]

(b) $c - d$.

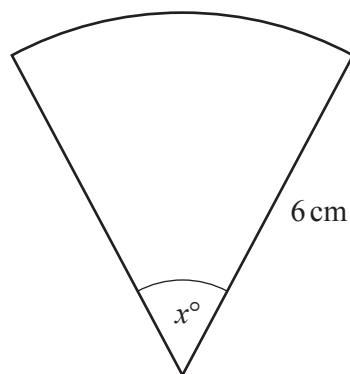
..... [2]

11 $y = \frac{2}{x+3}$

Rearrange the formula to make x the subject.

$x = \dots\dots\dots$ [3]

12



NOT TO
SCALE

The area of this sector is $5\pi \text{ cm}^2$.

Find the value of x .

$x = \dots\dots\dots$ [3]

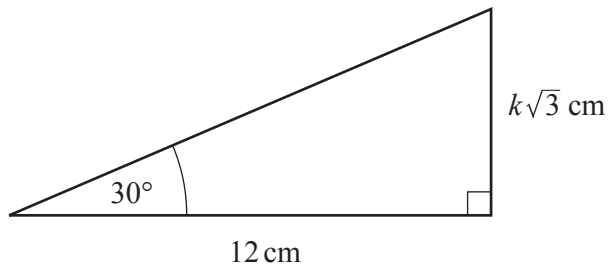
- 13 The heights, h cm, of 100 plants are measured.
The table shows the results.

Height, h cm	Frequency
$0 < h \leq 40$	15
$40 < h \leq 80$	40
$80 < h \leq 120$	45

Calculate an estimate for the mean height of the plants.

..... cm [3]

14



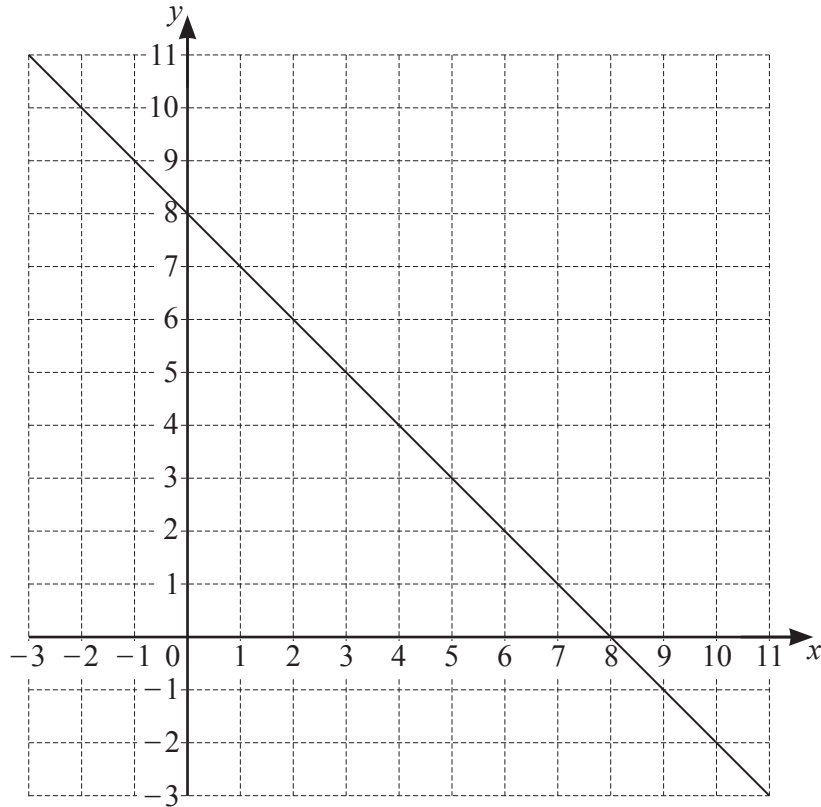
NOT TO
SCALE

Find the value of k .

$k =$ [3]

Questions 15 and 16 are printed on the next page.

15



The diagram shows the line $x + y = 8$.

On the diagram, show clearly the region defined by these inequalities.

$$x + y \leq 8$$

$$x \geq 2$$

$$y \leq 3$$

[2]

16 Simplify $\frac{x^2y - 3xy}{x^2 - 2x - 3}$.

..... [3]

Permission to reproduce items where third-party owned material protected by copyright is included has been sought and cleared where possible. Every reasonable effort has been made by the publisher (UCLES) to trace copyright holders, but if any items requiring clearance have unwittingly been included, the publisher will be pleased to make amends at the earliest possible opportunity.

To avoid the issue of disclosure of answer-related information to candidates, all copyright acknowledgements are reproduced online in the Cambridge Assessment International Education Copyright Acknowledgements Booklet. This is produced for each series of examinations and is freely available to download at www.cambridgeinternational.org after the live examination series.

Cambridge Assessment International Education is part of the Cambridge Assessment Group. Cambridge Assessment is the brand name of the University of Cambridge Local Examinations Syndicate (UCLES), which itself is a department of the University of Cambridge.