



# Cambridge IGCSE™

---

## CO-ORDINATED SCIENCES

Paper 2 Multiple Choice (Extended)

0654/21

May/June 2020

45 minutes

You must answer on the multiple choice answer sheet.

You will need: Multiple choice answer sheet  
Soft clean eraser  
Soft pencil (type B or HB is recommended)

---

### INSTRUCTIONS

- There are **forty** questions on this paper. Answer **all** questions.
- For each question there are four possible answers **A, B, C** and **D**. Choose the **one** you consider correct and record your choice in soft pencil on the multiple choice answer sheet.
- Follow the instructions on the multiple choice answer sheet.
- Write in soft pencil.
- Write your name, centre number and candidate number on the multiple choice answer sheet in the spaces provided unless this has been done for you.
- Do **not** use correction fluid.
- Do **not** write on any bar codes.
- You may use a calculator.

### INFORMATION

- The total mark for this paper is 40.
- Each correct answer will score one mark. A mark will not be deducted for a wrong answer.
- Any rough working should be done on this question paper.
- The Periodic Table is printed in the question paper.

---

This document has **16** pages. Blank pages are indicated.



- 1 Which characteristic of living organisms is defined as the chemical reactions that break down nutrient molecules and release energy for metabolism?
- A excretion
  - B nutrition
  - C respiration
  - D reproduction

- 2 What is the net movement of molecules during diffusion?
- A from a higher concentration to a lower concentration down a concentration gradient
  - B from a higher concentration to a lower concentration up a concentration gradient
  - C from a lower concentration to a higher concentration down a concentration gradient
  - D from a lower concentration to a higher concentration up a concentration gradient

- 3 A food contains reducing sugar, but no starch.

What colours will be obtained if samples of the food are tested with Benedict's solution and with iodine solution?

	Benedict's test	iodine test
<b>A</b>	blue	blue-black
<b>B</b>	blue	brown
<b>C</b>	red-orange	blue-black
<b>D</b>	red-orange	brown

- 4 Which statement correctly describes enzyme activity as the temperature increases up to an optimum temperature?
- A The enzyme has less frequent effective collisions with the product.
  - B The enzyme has less frequent effective collisions with the substrate.
  - C The enzyme has more frequent effective collisions with the product.
  - D The enzyme has more frequent effective collisions with the substrate.

- 5 A plant which is deficient in nitrates and magnesium has yellow leaves and poor growth.

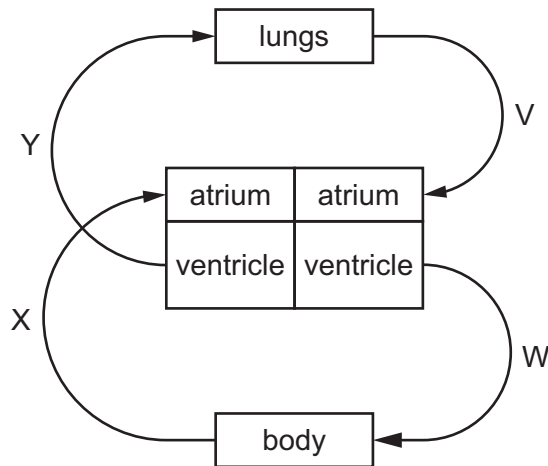
What is the importance of these two ions in plant growth?

	importance of nitrate ions	importance of magnesium ions
<b>A</b>	making amino acids	production of chlorophyll
<b>B</b>	making amino acids	production of roots
<b>C</b>	making fatty acids	production of chlorophyll
<b>D</b>	making fatty acids	production of roots

- 6 Why is calcium needed in the diet?

- A** to make carbohydrates
- B** to make teeth
- C** to make enzymes
- D** to make protein

- 7 The diagram shows the double circulatory system to the lungs and the body.



In which two blood vessels is the pressure the highest?

- A** V and W
  - B** W and Y
  - C** X and V
  - D** Y and X
- 8 Cigarette smoke paralyses the cilia in the gas exchange system.

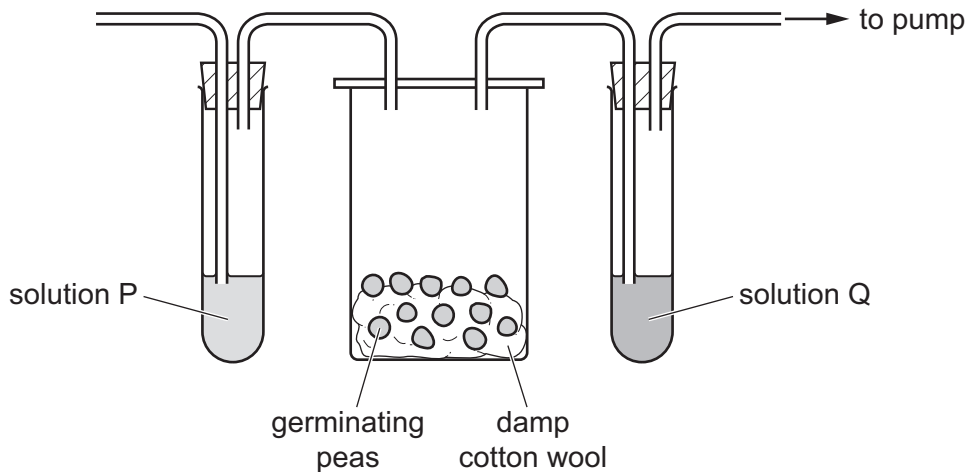
What is the direct result of this?

- A** Mucus accumulates in the airways.
- B** Oxygen cannot diffuse into the blood.
- C** The blood cannot carry oxygen efficiently.
- D** The smoker develops lung cancer.

9 What happens when the body temperature falls below normal?

- A Arterioles supplying the skin constrict.
- B Arterioles supplying the skin dilate.
- C Capillaries move towards the skin surface.
- D Capillaries move away from the skin surface.

10 An experiment using germinating seeds is set up as shown, and left at room temperature for 12 hours.



The pump is then switched on and air is drawn through the apparatus for 2 minutes.

Which row identifies solutions P and Q and the results obtained?

	solution P	solution P results	solution Q	solution Q results
<b>A</b>	ethanol	remains colourless	ethanol	turns milky
<b>B</b>	ethanol	turns milky	limewater	remains colourless
<b>C</b>	limewater	remains colourless	limewater	turns milky
<b>D</b>	limewater	turns milky	ethanol	remains colourless

11 Chimpanzee gametes contain one more chromosome than human gametes.

What is the chromosome number in a chimpanzee diploid cell?

- A 23
- B 24
- C 46
- D 48

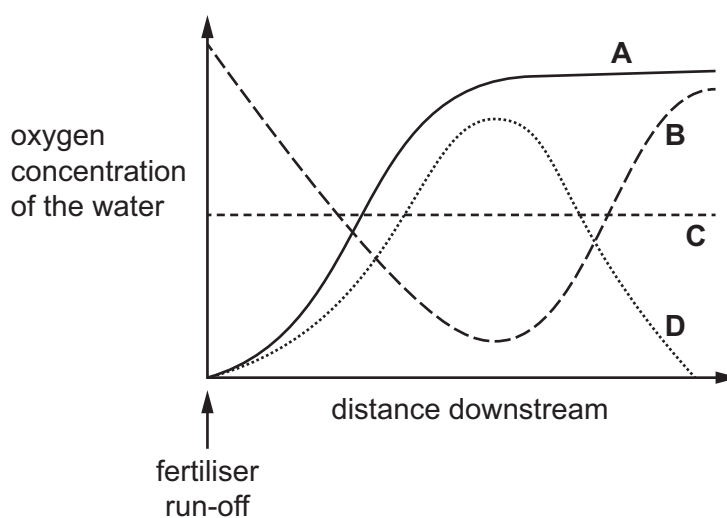
12 The flow chart shows part of a food chain.

grass → rabbit → fox

What describes the rabbit?

- A consumer and carnivore
- B consumer and herbivore
- C producer and carnivore
- D producer and herbivore

13 Which line shows how the oxygen concentration of the water changes after excess fertiliser has entered a stream?



14 Which statement about atoms and molecules is correct?

- A All molecules are gases at room temperature and pressure.
- B An atom is the smallest part of an element.
- C Atoms of the same element all have the same mass.
- D Molecules always contain atoms of more than one element.

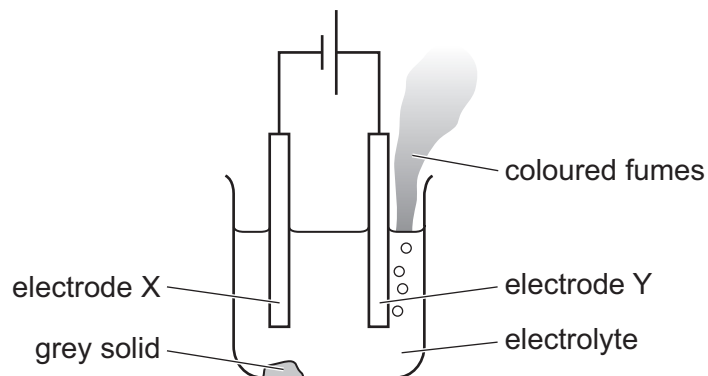
15 Which compound is formed when one metal atom transfers two electrons to one non-metal atom?

- A calcium chloride
- B calcium oxide
- C sodium chloride
- D sodium oxide

16 What is the volume of 0.35 mol of hydrogen gas at room temperature and pressure?

- A 2.1 dm<sup>3</sup>      B 4.2 dm<sup>3</sup>      C 8.4 dm<sup>3</sup>      D 16.8 dm<sup>3</sup>

17 The diagram shows the electrolysis of lead(II) bromide using inert electrodes.



Which statement about this experiment is correct?

- A Electrode X is positively charged.  
 B The coloured fumes are produced at the negative electrode.  
 C The electrolyte is lead(II) bromide.  
 D The grey solid is lead(II) bromide.

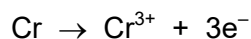
18 An acid reacts with solid lumps of calcium carbonate to produce a salt, water and carbon dioxide.

Which changes lead to a greater frequency of successful collisions between reacting particles?

- 1 Increase the temperature of the acid.
- 2 Use powdered lumps of calcium carbonate.
- 3 Use a different acid with a higher pH.

- A 1 and 2 only      B 1 and 3 only      C 2 and 3 only      D 1, 2 and 3

19 The ionic equation for the formation of chromium(III) ions is shown.



Which statement about chromium atoms is correct?

- A They are oxidised by gaining electrons.  
 B They are oxidised by losing electrons.  
 C They are reduced by gaining electrons.  
 D They are reduced by losing electrons.

- 20 X is an oxide. When solid X is added to dilute hydrochloric acid, the pH of the solution increases. When solid X is added to aqueous sodium hydroxide, the pH of the solution decreases.

Which type of oxide is X?

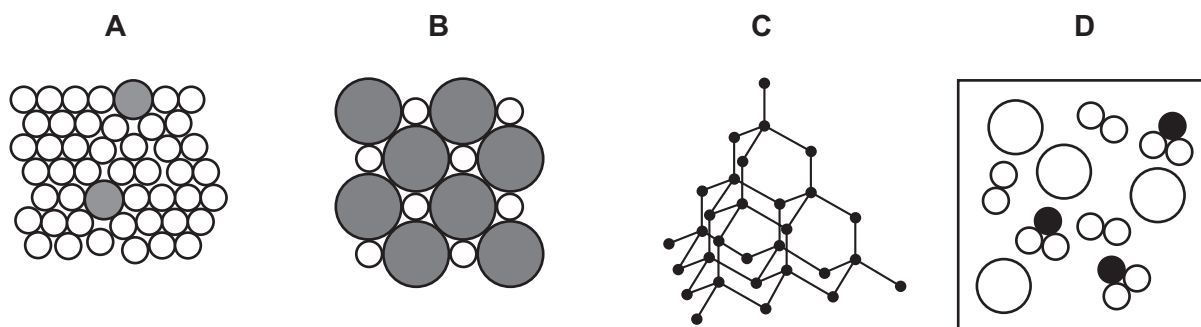
- A acidic  
 B amphoteric  
 C basic  
 D neutral
- 21 Copper sulfate is made by adding an excess of copper carbonate to dilute sulfuric acid and stirring.

The excess solid is removed. Most of the water is then removed. The solution is left for solid copper sulfate to form.

In which order is apparatus used?

- A Bunsen burner, tripod and flask → filter funnel → crystallising dish  
 B Bunsen burner, tripod and flask → crystallising dish → filter funnel  
 C filter funnel → crystallising dish → Bunsen burner, tripod and flask  
 D filter funnel → Bunsen burner, tripod and flask → crystallising dish

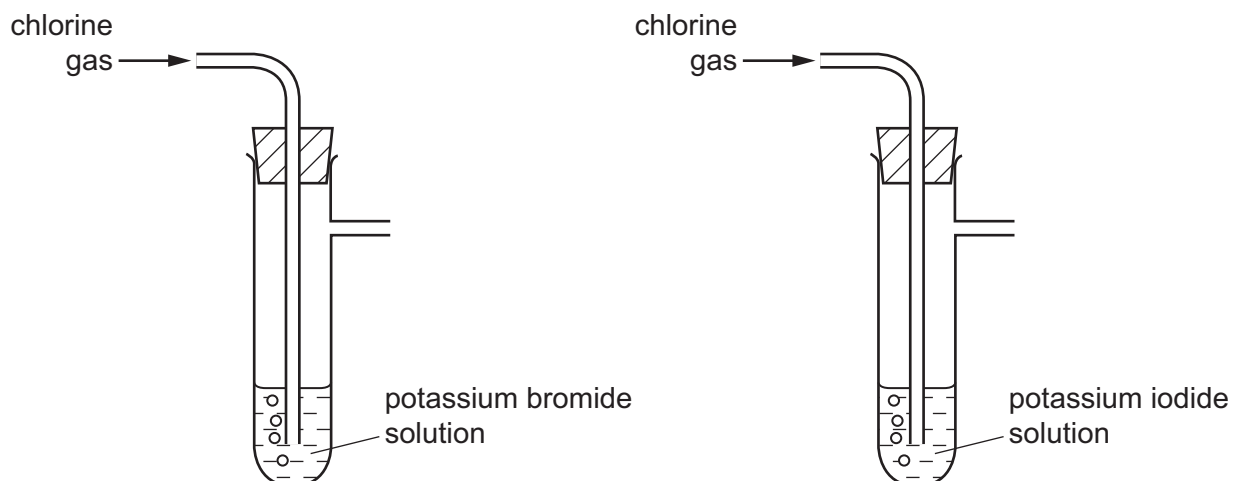
- 22 Which diagram represents an alloy?



- 23 Which statement is **not** a reason why aluminium is used in aircraft manufacture?

- A It forms low density alloys.  
 B It is malleable.  
 C It is more reactive than iron.  
 D It is resistant to corrosion.

24 Chlorine gas is bubbled through two separate solutions.



What is observed in the two tubes?

	potassium bromide tube	potassium iodide tube
<b>A</b>	colourless solution turns orange	colourless solution turns brown
<b>B</b>	colourless solution turns orange	solution remains colourless
<b>C</b>	orange solution turns colourless	brown solution turns colourless
<b>D</b>	orange solution turns colourless	solution remains brown

25 Limestone is converted to lime in process 1.

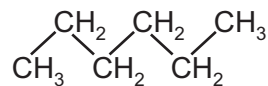
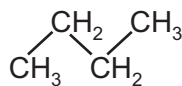
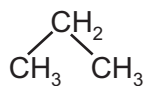
Limestone is used to treat industrial waste in process 2.

What are processes 1 and 2?

	process 1	process 2
<b>A</b>	decomposition	dissolving
<b>B</b>	decomposition	neutralisation
<b>C</b>	oxidation	dissolving
<b>D</b>	oxidation	neutralisation



26 The structures of three organic compounds are shown.



Which statement about these three compounds is correct?

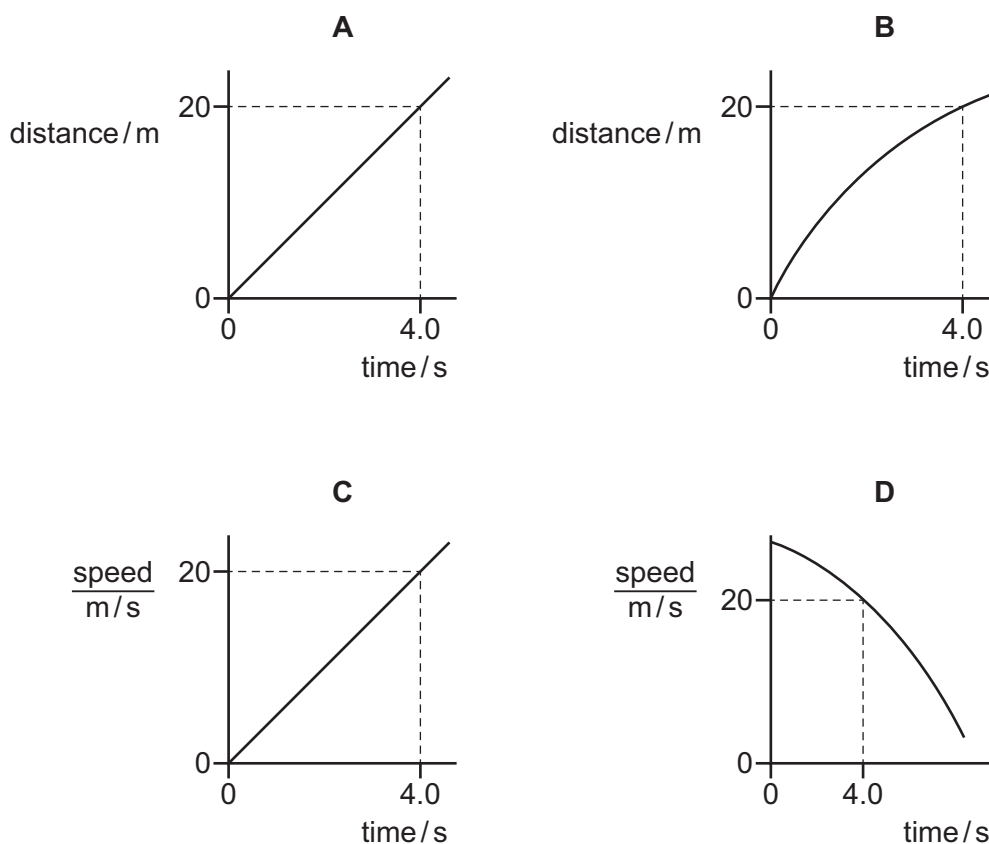
- A They are alcohols.
- B They are alkenes.
- C They are saturated.
- D They do not burn.

27 Which row matches the name of a polymer to the formula of the monomer from which it is made?

	polymer	monomer
<b>A</b>	poly(ethene)	$\text{C}_2\text{H}_2$
<b>B</b>	poly(ethene)	$\text{C}_2\text{H}_6$
<b>C</b>	poly(propene)	$\text{C}_2\text{H}_4$
<b>D</b>	poly(propene)	$\text{C}_3\text{H}_6$

- 28 The diagrams show two distance–time graphs and two speed–time graphs for objects travelling in a straight line.

Which graph represents an object with a constant, positive acceleration of  $5.0 \text{ m/s}^2$ ?



- 29 A force  $F$  acting on an area  $A$  exerts a pressure  $P$ .

What pressure is exerted by a force of  $2F$  acting on an area  $0.50A$ ?

- A  $0.50P$       B  $P$       C  $2.0P$       D  $4.0P$

- 30 An object is moving along a straight path with  $200 \text{ J}$  of kinetic energy.

A resultant force acts on the object, in the direction it is moving, for a distance of  $20 \text{ m}$ . The kinetic energy of the object increases to  $1000 \text{ J}$ .

What is the magnitude of the force?

- A  $10 \text{ N}$       B  $40 \text{ N}$       C  $50 \text{ N}$       D  $60 \text{ N}$

- 31 An object of mass  $m$  moving with speed  $v$  has kinetic energy  $E$ .

A second object, also of mass  $m$ , moves with speed  $\frac{v}{2}$ .

What is the kinetic energy of the second object?

- A  $\frac{E}{4}$       B  $\frac{E}{2}$       C  $E$       D  $2E$

32 Which statement describes the production of electricity from a renewable energy source?

- A Coal is burnt to release energy to make steam that turns a generator.
- B Moving air passes over blades that rotate and turn a generator.
- C Nuclear fission releases energy to make steam that turns a generator.
- D Oil is burnt to release energy to make steam that turns a generator.

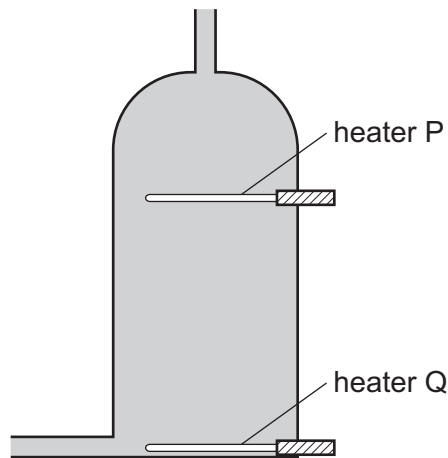
33 A liquid-in-glass thermometer contains mercury.

The thermometer is moved from cold water into hot water.

What happens to the mercury?

- A It contracts.
- B It expands.
- C It freezes.
- D It melts.

34 A hot water tank is fitted with two identical heaters P and Q. Heater P is fitted above heater Q as shown. The tank is full of cold water.

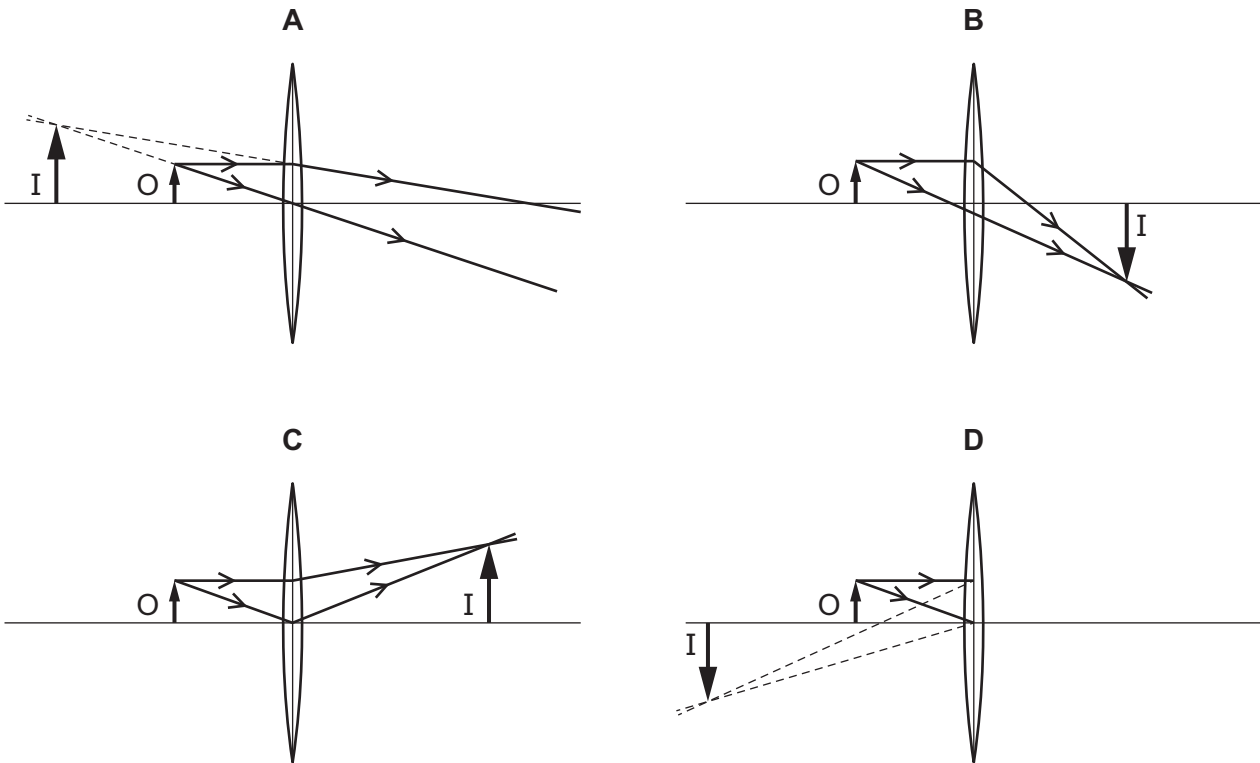


When only heater Q is switched on, it takes a long time to heat the tank of water to 60 °C.

What happens to the cold water when only heater P is switched on?

- A All the water reaches 60 °C in less time.
- B All the water reaches 60 °C in the same time.
- C The water below heater P reaches 60 °C in less time.
- D The water above heater P reaches 60 °C in less time.

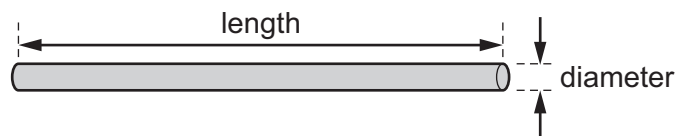
35 Which ray diagram represents the formation of a virtual image I of an object O?



36 Which statement about the transmission of sound is correct?

- A Sound does not need a medium.
- B Sound travels faster in gases than in solids.
- C The particles of the transmission medium vibrate parallel to the direction in which the sound travels.
- D The regions in the transmission medium where the particles are closest together are called rarefactions.

37 The diagram shows a wire with resistance  $R$ .

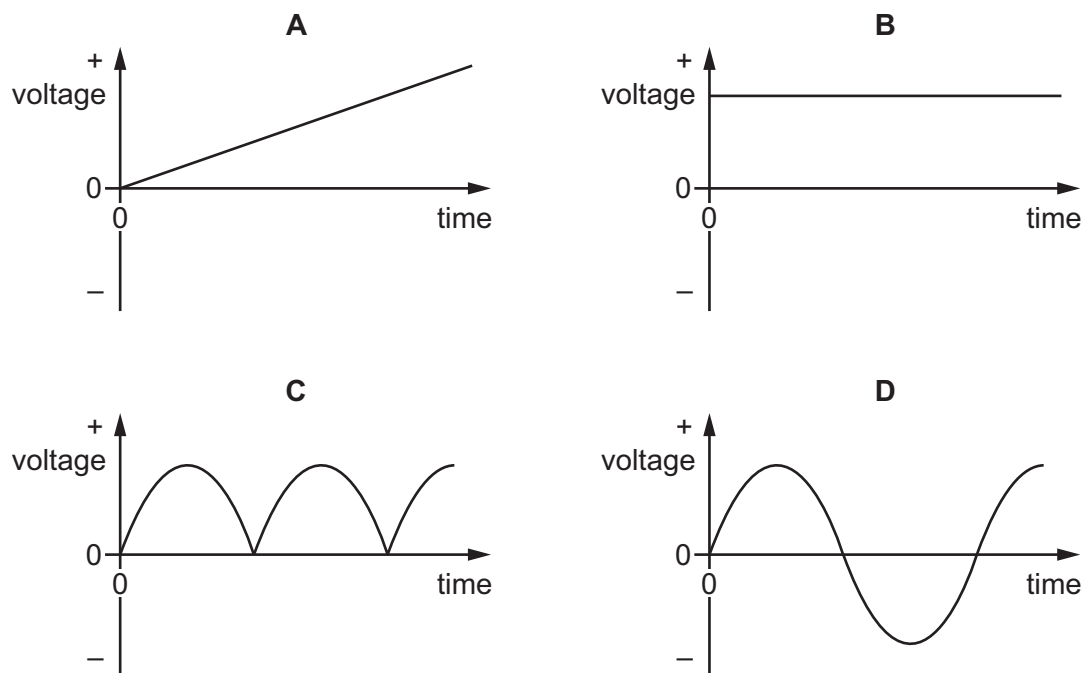


Both the length and the diameter of the wire are now doubled.

What is the new resistance of the wire after both of these changes?

- A  $\frac{R}{2}$
- B  $R$
- C  $2R$
- D  $4R$

38 Which graph shows the voltage output of an alternating current (a.c.) generator?



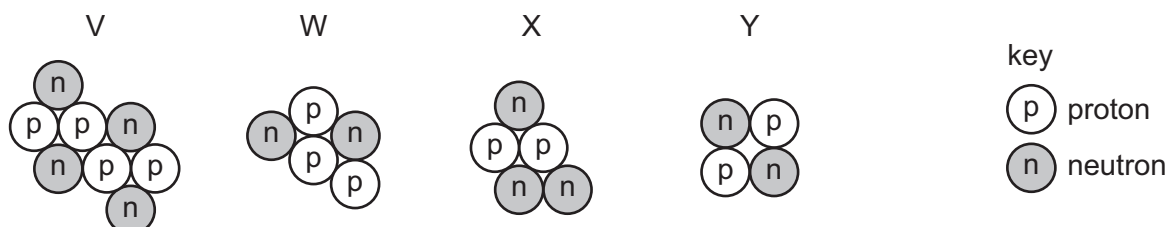
39 A fuse is a safety device for use in an electrical circuit.

The current in the circuit becomes greater than the rated value for the fuse.

What happens?

- A** The current decreases to zero.
- B** The current decreases to the rated value for the fuse.
- C** The thickness of the insulation around the wires increases.
- D** The current is sent to the outer case of the appliance.

40 The diagrams represent the nuclei of four different atoms V, W, X and Y.



Which two diagrams represent isotopes of the same element?

- A** V and Y
- B** W and X
- C** X and Y
- D** Y and W



**BLANK PAGE**

---

Permission to reproduce items where third-party owned material protected by copyright is included has been sought and cleared where possible. Every reasonable effort has been made by the publisher (UCLES) to trace copyright holders, but if any items requiring clearance have unwittingly been included, the publisher will be pleased to make amends at the earliest possible opportunity.

To avoid the issue of disclosure of answer-related information to candidates, all copyright acknowledgements are reproduced online in the Cambridge Assessment International Education Copyright Acknowledgements Booklet. This is produced for each series of examinations and is freely available to download at [www.cambridgeinternational.org](http://www.cambridgeinternational.org) after the live examination series.

Cambridge Assessment International Education is part of the Cambridge Assessment Group. Cambridge Assessment is the brand name of the University of Cambridge Local Examinations Syndicate (UCLES), which itself is a department of the University of Cambridge.

## The Periodic Table of Elements

		Group																										
I	II	III	IV	V	VI	VII	VIII																					
3 Li lithium 7	4 Be beryllium 9	11 Na sodium 23	12 Mg magnesium 24	19 K potassium 39	20 Ca calcium 40	37 Rb rubidium 85	55 Cs caesium 133	87 Fr francium —	1 H hydrogen 1	2 He helium 4	5 B boron 11	6 C carbon 12	7 N nitrogen 14	8 O oxygen 16	9 F fluorine 19	10 Ne neon 20												
11 Na sodium 23	12 Mg magnesium 24	13 Al aluminium 27	14 Si silicon 28	15 P phosphorus 31	16 S sulfur 32	17 Cl chlorine 35.5	18 Ar argon 40	21 Sc scandium 45	22 Ti titanium 48	23 V vanadium 51	24 Cr chromium 52	25 Mn manganese 55	26 Fe iron 56	27 Co cobalt 59	28 Ni nickel 59	29 Cu copper 64	30 Zn zinc 65	31 Ga gallium 70	32 Ge germanium 73	33 As arsenic 75	34 Se selenium 79	35 Br bromine 80	36 Kr krypton 84					
39 K potassium 39	40 Ca calcium 40	37 Rb rubidium 85	55 Cs caesium 133	87 Fr francium —	21 Sc scandium 45	22 Ti titanium 48	23 V vanadium 51	24 Cr chromium 52	25 Mn manganese 55	26 Fe iron 56	27 Co cobalt 59	28 Ni nickel 59	29 Cu copper 64	30 Zn zinc 65	31 Ga gallium 70	32 Ge germanium 73	33 As arsenic 75	34 Se selenium 79	35 Br bromine 80	36 Kr krypton 84	54 Xe xenon 131	86 Rn radon —						
57 La lanthanum 139	89 Ac actinium —	58 Ce cerium 140	90 Th thorium 232	59 Pr praseodymium 141	91 Pa protactinium 231	60 Nd neodymium 144	92 U uranium 238	61 Pm promethium —	62 Sm samarium 150	94 Pu plutonium —	63 Eu europium 152	95 Am americium —	64 Gd gadolinium 157	96 Cm curium —	65 Tb terbium 159	97 Bk berkelium —	66 Dy dysprosium 163	98 Cf californium —	67 Ho holmium 165	99 Es einsteinium —	68 Er erbium 167	100 Fm fermium —	69 Tm thulium 169	101 Md mendelevium —	70 Yb ytterbium 173	102 No nobelium —	71 Lu lutetium 175	103 Lr lawrencium —
57 La lanthanoids 139	89 Ac actinoids —	58 Ce cerium 140	90 Th thorium 232	59 Pr praseodymium 141	91 Pa protactinium 231	60 Nd neodymium 144	92 U uranium 238	61 Pm promethium —	62 Sm samarium 150	94 Pu plutonium —	63 Eu europium 152	95 Am americium —	64 Gd gadolinium 157	96 Cm curium —	65 Tb terbium 159	97 Bk berkelium —	66 Dy dysprosium 163	98 Cf californium —	67 Ho holmium 165	99 Es einsteinium —	68 Er erbium 167	100 Fm fermium —	69 Tm thulium 169	101 Md mendelevium —	70 Yb ytterbium 173	102 No nobelium —	71 Lu lutetium 175	103 Lr lawrencium —
57 La lanthanoids 139	89 Ac actinoids —	58 Ce cerium 140	90 Th thorium 232	59 Pr praseodymium 141	91 Pa protactinium 231	60 Nd neodymium 144	92 U uranium 238	61 Pm promethium —	62 Sm samarium 150	94 Pu plutonium —	63 Eu europium 152	95 Am americium —	64 Gd gadolinium 157	96 Cm curium —	65 Tb terbium 159	97 Bk berkelium —	66 Dy dysprosium 163	98 Cf californium —	67 Ho holmium 165	99 Es einsteinium —	68 Er erbium 167	100 Fm fermium —	69 Tm thulium 169	101 Md mendelevium —	70 Yb ytterbium 173	102 No nobelium —	71 Lu lutetium 175	103 Lr lawrencium —

## Key

atomic number  
atomic symbol  
name  
relative atomic mass

lanthanoids

actinoids

The volume of one mole of any gas is 24 dm<sup>3</sup> at room temperature and pressure (r.t.p.).