



UNIVERSITY OF CAMBRIDGE INTERNATIONAL EXAMINATIONS  
General Certificate of Education Ordinary Level

CANDIDATE  
NAME

CENTRE  
NUMBER

--	--	--	--	--

CANDIDATE  
NUMBER

--	--	--	--



**MATHEMATICS (SYLLABUS D)**

**4024/11**

Paper 1

**October/November 2012**

**2 hours**

Candidates answer on the Question Paper.

Additional Materials: Geometrical instruments

**READ THESE INSTRUCTIONS FIRST**

Write your Centre number, candidate number and name on all the work you hand in.  
Write in dark blue or black pen.  
You may use a pencil for any diagrams or graphs.  
Do not use staples, paper clips, highlighters, glue or correction fluid.  
**DO NOT WRITE IN ANY BARCODES.**

Answer **all** questions.

If working is needed for any question it must be shown in the space below that question.  
Omission of essential working will result in loss of marks.

**ELECTRONIC CALCULATORS MUST NOT BE USED IN THIS PAPER.**

The number of marks is given in brackets [ ] at the end of each question or part question.  
The total of the marks for this paper is 80.

This document consists of **20** printed pages.



**ELECTRONIC CALCULATORS MUST NOT BE USED IN THIS PAPER.**

1 (a) Evaluate  $3\frac{2}{5} - 2\frac{5}{6}$ .

Answer ..... [1]

(b) Evaluate  $\frac{2}{3} \div 3\frac{3}{4}$ .

Answer ..... [1]

---

2 (a) Evaluate  $0.7 + 0.2 \times 0.3$ .

Answer ..... [1]

(b) Evaluate  $\frac{0.9}{0.06}$ .

Answer ..... [1]

---

- 3 (a) Alice and Brenda share \$300 so that Alice's share : Brenda's share = 3 : 7.

How much more does Brenda receive than Alice?

*Answer* \$ ..... [1]

- (b) Find the simple interest on \$200 for 4 years at 2% per year.

*Answer* \$ ..... [1]

- 4 Arrange these lengths in order of size, starting with the smallest.

2300 mm      220 cm      0.021 km       $2\frac{1}{4}$  m

*Answer* ..... , ..... , ..... , ..... [2]  
*smallest*

5 Pierre goes on a holiday from France to the UK.

- (a) His journey takes 4 hours and 43 minutes.  
It ends at 02 13 on Saturday.

At what time on Friday does his journey start?

*Answer* ..... [1]

- (b) Pierre changes 400 euros into pounds (£).  
The exchange rate is 1 euro = £0.845.

How many pounds does he receive?

*Answer* £ ..... [1]

---

6 (a) Write the number 0.000 034 in standard form.

*Answer* ..... [1]

- (b) Expressing your answer in standard form, find  $(5 \times 10^8) \times (4 \times 10^7)$ .

*Answer* ..... [1]

---

- 7 (a) **Estimate**, correct to the nearest whole number, the value of  $\sqrt{\frac{72.187}{\pi}}$ .  
Show clearly the approximate values you use.

*Answer* ..... [1]

- (b) The values of three cube roots, correct to 1 decimal place, are given below.

$$\sqrt[3]{5} = 1.7 \quad \sqrt[3]{50} = 3.7 \quad \sqrt[3]{500} = 7.9$$

Using as much of the above information as is necessary, find the value of  $\sqrt[3]{0.005}$ .

*Answer* ..... [1]

- 8 The mean mass of Ali, Ben and Carl is 40 kg.  
The mass of Dan is 48 kg.

Find the mean mass of the four boys.

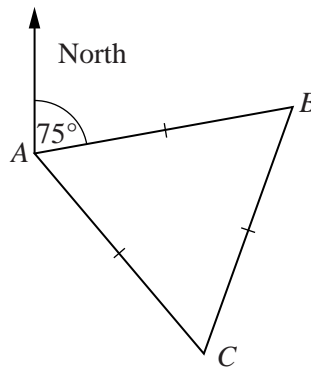
*Answer* ..... kg [2]

9  $y$  is inversely proportional to  $x$ .

Given that  $y = \frac{1}{5}$  when  $x = 20$ , find  $y$  when  $x = \frac{1}{7}$ .

Answer  $y = \dots\dots\dots$  [2]

10 In the diagram, the triangle  $ABC$  is equilateral.  
The bearing of  $B$  from  $A$  is  $075^\circ$ .



(a) Find the bearing of  $C$  from  $A$ .

Answer  $\dots\dots\dots$  [1]

(b) Find the bearing of  $C$  from  $B$ .

Answer  $\dots\dots\dots$  [1]

- 11 In an experiment, 4 dice are thrown and the number of Fives is recorded. The experiment is repeated 12 times. The table shows the results.

Number of Fives	0	1	2	3	4
Frequency	1	2	3	5	1

For this distribution of Fives,

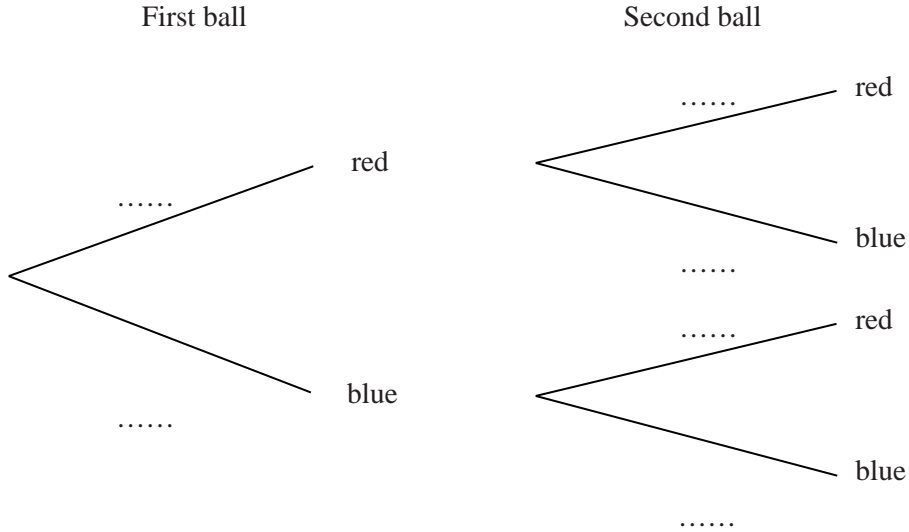
- (a) write down the mode,

Answer ..... [1]

- (b) find the median.

Answer ..... [1]

- 12 A bag contains 1 red and 3 blue balls. Two balls are taken from the bag, at random, without replacement. The tree diagram that represents all the outcomes is shown below.



- (a) Write the appropriate probability on each branch. [2]

- (b) Find the probability that the second ball taken is red.

Answer ..... [1]

13 The mass of a box is 2 kilograms, correct to the nearest kilogram.

(a) Write down the lower bound for the mass of the box.

Answer ..... kg [1]

(b) The mass of a can is 350 grams, correct to the nearest 10 grams.

Giving your answer in kilograms, calculate the lower bound for the **total** mass of the box and 20 identical cans.

Answer ..... kg [2]

---

14 (a) Evaluate

(i)  $5^1 + 5^0$ ,

Answer ..... [1]

(ii)  $\left(\frac{4}{3}\right)^{-2}$ .

Answer ..... [1]

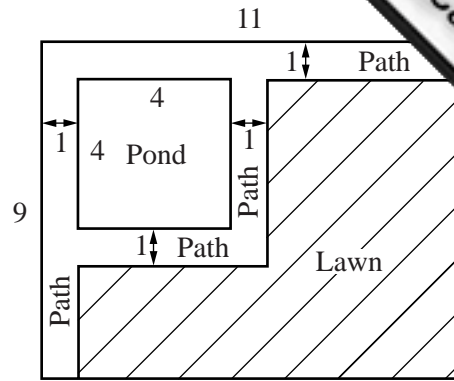
(b) Simplify  $(2x^2)^3$ .

Answer ..... [1]

---



- 15** The diagram shows the plan of a rectangular garden, measuring 11 m by 9 m.  
 All the angles are right angles.  
 The pond is a square of side 4 m.  
 The paths are 1 m wide.  
 The remainder of the garden is a lawn.



(a) Find the perimeter of the lawn.

Answer ..... m [1]

(b) Find the total area of the paths.

Answer ..... m<sup>2</sup> [1]

(c) The paths are paved with square tiles of side 50 cm.  
 How many tiles are used?

Answer ..... [1]

16

$$A = \begin{pmatrix} 3 & 0 \\ 0 & 1 \end{pmatrix}$$

(a) Find  $A^{-1}$ .

*Answer*  $\begin{pmatrix} & \\ & \end{pmatrix}$  [1]

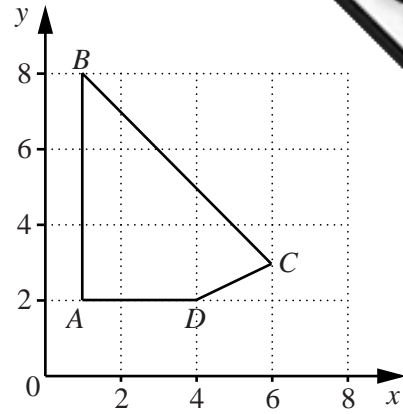
(b) Describe, fully, the transformation that is represented by  $A$ .

*Answer* .....  
.....[2]

---

17 The quadrilateral  $ABCD$  is bounded by the lines  $x = 1$ ,  $y = 2$ ,  $2y = x$  and  $x + y = 9$ .

The region **inside** the quadrilateral is defined by four inequalities. Two of these are  $y > 2$  and  $2y > x$ .



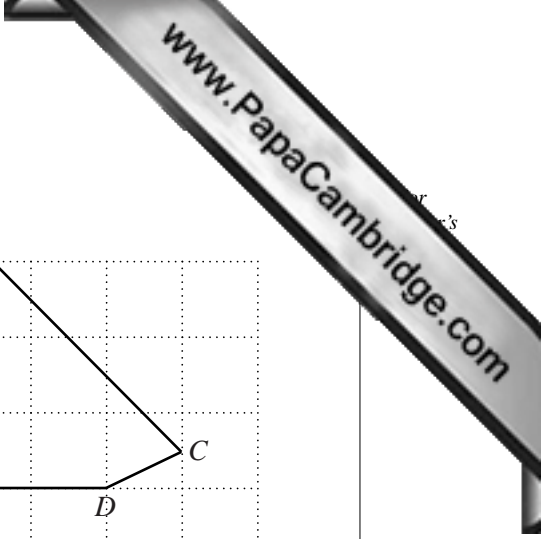
(a) Write down the other two inequalities.

Answer .....

..... [2]

(b) How many points, with **integer** coordinates, lie **inside** the quadrilateral  $ABCD$ ?

Answer ..... [1]



18 Factorise completely

(a)  $20p + 25p^2$ ,

*Answer* ..... [1]

(b)  $9 - 4t^2$ ,

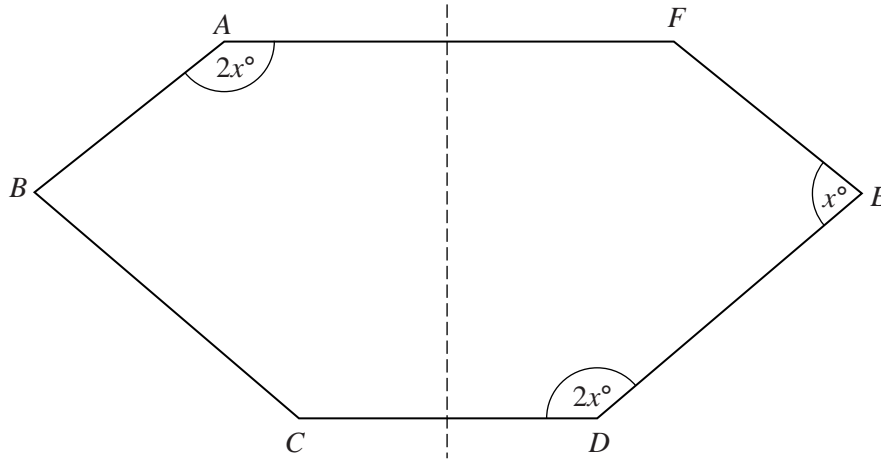
*Answer* ..... [1]

(c)  $9 + 35x - 4x^2$ .

*Answer* ..... [1]

---

19



In the diagram, the dashed line is a line of symmetry.  
 $\hat{BAF} = 2x^\circ$ ,  $\hat{FED} = x^\circ$  and  $\hat{CDE} = 2x^\circ$ .

Find the value of  $x$ .

*Answer*  $x = \dots\dots\dots$  [3]

20

$$f(x) = \frac{x+3}{2}$$

(a) Find  $f^{-1}(x)$ .

Answer  $f^{-1}(x) = \dots\dots\dots$  [1]

(b) Given that  $f(-9) + f(t) = A + Bt$ , find the values of  $A$  and  $B$ .

Answer  $A = \dots\dots\dots$

$B = \dots\dots\dots$  [2]

21 (a) Given that  $A = \{ 1, 2, 3, 4, 5 \}$  and  $B = \{ 3, 4, 5, 6, 7 \}$ , find  $n(A \cup B)$ .

Answer  $\dots\dots\dots$  [1]

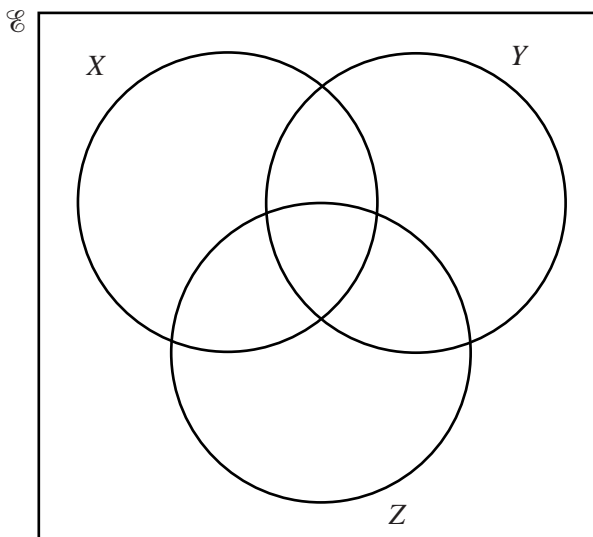
(b)  $\mathcal{C} = \{ p, q, r, \dots \}$

On the Venn diagram, write each of the letters  $p, q,$  and  $r$  in its appropriate subset, given that

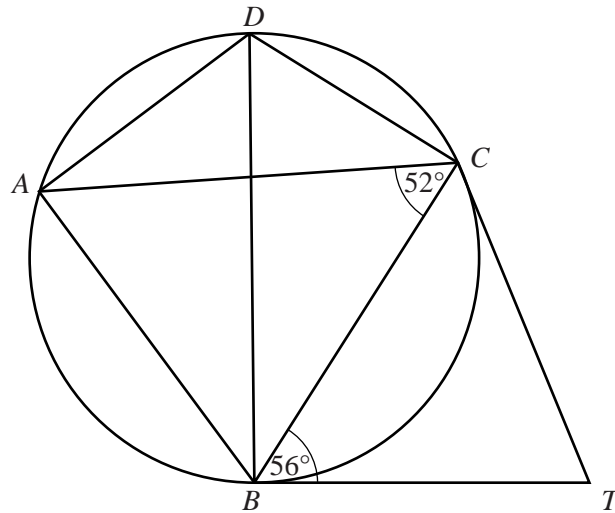
$$p \in X \cap Y \cap Z,$$

$$q \in X' \cap Y' \cap Z',$$

$$r \in (X \cup Y)' \cap Z.$$



[3]



In the diagram, the points  $A, B, C$  and  $D$  lie on the circle.  
 $BD$  is a diameter.  
 The tangents from  $T$  touch the circle at  $B$  and  $C$ .  
 $\hat{ACB} = 52^\circ$  and  $\hat{TBC} = 56^\circ$ .

Find

(a)  $\hat{BTC}$ ,

Answer  $\hat{BTC} = \dots\dots\dots [1]$

(b)  $\hat{ADB}$ ,

Answer  $\hat{ADB} = \dots\dots\dots [1]$

(c)  $\hat{BDC}$ ,

Answer  $\hat{BDC} = \dots\dots\dots [1]$

(d)  $\hat{ABC}$ .

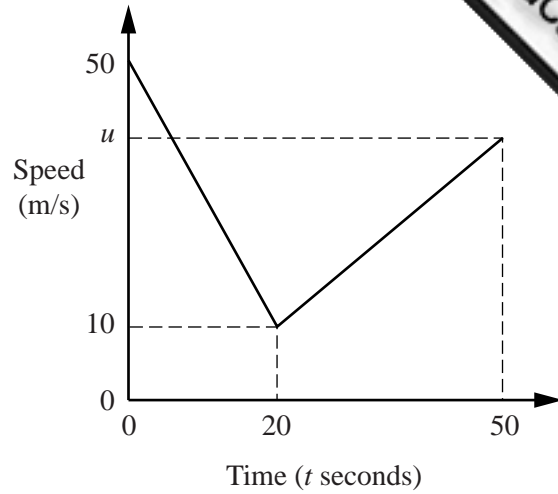
Answer  $\hat{ABC} = \dots\dots\dots [1]$



23 The diagram is the speed-time graph of part of a train's journey.

The train slows down uniformly from a speed of 50 m/s to a speed of 10 m/s in a time of 20 seconds.

During the next 30 seconds, it accelerates uniformly to a speed of  $u$  metres/second.



(a) Calculate the retardation from  $t = 0$  to  $t = 20$ .

Answer .....  $\text{m/s}^2$  [1]

(b) Calculate the speed of the train when  $t = 15$ .

Answer .....  $\text{m/s}$  [1]

(c) Calculate the distance travelled by the train from  $t = 0$  to  $t = 20$ .

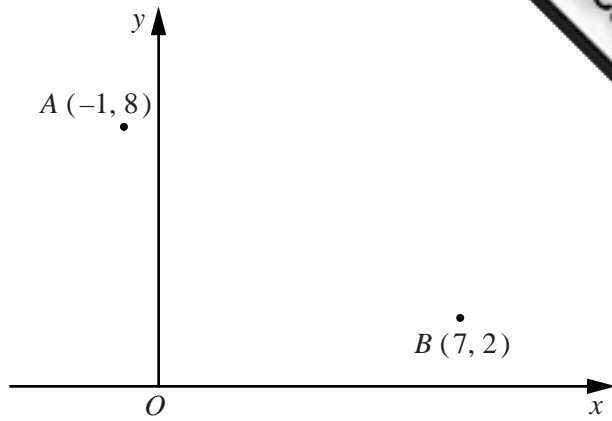
Answer .....  $\text{m}$  [1]

(d) The size of the acceleration is half the size of the retardation.  
Find the value of  $u$ .

Answer  $u =$  ..... [1]



- 24 The diagram shows the points  
 $A(-1, 8)$  and  $B(7, 2)$ .



- (a) Find the coordinates of the midpoint of  $AB$ .

*Answer* (....., .....) [1]

(b)  $\vec{BC} = \begin{pmatrix} -3 \\ 4 \end{pmatrix}$

- (i) Find the coordinates of  $C$ .

*Answer* (....., .....) [1]

- (ii) Given that  $|\vec{AB} + \vec{BC}| = \sqrt{k}$ , find  $k$ .

*Answer*  $k = \dots\dots\dots$  [2]

25 The sequence of positive integers is arranged in the pattern below.

Row 1	1	2	3
Row 2	4	5	6
Row 3	7	8	9
Row 4	10	11	12
.	.	.	.
.	.	.	.
.	.	.	.
Row $n$	.....	$3n - 1$	.....

(a) Complete Row  $n$ . [1]

(b) The table shows some results obtained from this pattern.

Row number	1	2	3	4		$n$
Square of the middle number in the row	4	25	64			$x$
Product of the first and the last number in the row	3	24	63			$y$

(i) Complete the column for Row number 4. [1]

(ii) Find an expression, in terms of  $n$ , for  $y$ .

*Answer* ..... [1]

(iii) Show that  $x - y$  is always equal to 1.

[2]

26 The diagram at the bottom of the page shows the lines  $AB$  and  $BC$ .

(a) By measuring an angle, find reflex angle  $ABC$ .

Answer ..... [1]

(b) The point  $D$  is on the opposite side of  $AC$  to  $B$ .  
 $CD = CB$  and  $AD = 10$  cm.

On the diagram, construct quadrilateral  $ABCD$ . [1]

(c) On the diagram, construct the locus of points, **inside** the quadrilateral  $ABCD$ , that are

(i) equidistant from  $A$  and  $B$ , [1]

(ii) equidistant from  $BC$  and  $BA$ . [1]

(d) On the diagram, shade the region **inside** the quadrilateral  $ABCD$  containing the points that are

nearer to  $A$  than to  $B$  and  
 nearer to  $BC$  than to  $BA$ . [1]



27 (a) Express as a single matrix  $2\begin{pmatrix} -1 & -2 \\ 0 & 1 \end{pmatrix} - \begin{pmatrix} 1 & -3 \\ 2 & 3 \end{pmatrix}$ .

*Answer*

[2]

(b) The matrix  $\mathbf{X}$  satisfies the equation  $\mathbf{X}\begin{pmatrix} 2 & -1 \\ 0 & 3 \end{pmatrix} = \begin{pmatrix} 8 & 5 \end{pmatrix}$ .

(i) Complete the following statement.

“The matrix  $\mathbf{X}$  has ..... row(s) and ..... column(s).”

[1]

(ii) Find  $\mathbf{X}$ .

*Answer*

[2]