



UNIVERSITY OF CAMBRIDGE INTERNATIONAL EXAMINATIONS  
General Certificate of Education Ordinary Level

CANDIDATE  
NAME

CENTRE  
NUMBER

--	--	--	--	--

CANDIDATE  
NUMBER

--	--	--	--



**COMBINED SCIENCE**

**5129/22**

Paper 2

**October/November 2012**

**2 hours 15 minutes**

Candidates answer on the Question Paper.

No Additional Materials are required.

**READ THESE INSTRUCTIONS FIRST**

Write your Centre number, candidate number and name on all the work you hand in.

Write in dark blue or black pen.

You may use a soft pencil for any diagrams, graphs or rough working.

Do not use staples, paper clips, highlighters, glue or correction fluid.

**DO NOT WRITE IN ANY BARCODES.**

Answer **all** questions.

A copy of the Periodic Table is printed on page 28.

At the end of the examination, fasten all your work securely together.

The number of marks is given in brackets [ ] at the end of each question or part question.

**For Examiner's Use**

--

This document consists of **24** printed pages.



1 Use words from the list to complete the sentences below.

- blood
  - glands
  - kidney
  - liver
- nerves
  - main
  - system
  - target

Each word may be used once, more than once or not at all.

Hormones are chemicals that are produced by .....

Hormones are transported round the body by .....

Each hormone affects the activity of a part of the body which is called the ..... organ.

Hormones are destroyed by the ..... [4]

2 (a) A weight of 2.5 N falls vertically through a distance of 2.4 m.

Calculate the work done on the weight by the force of gravity.

work done = ..... unit ..... [3]

(b) The falling weight is used to rotate a coil in a magnetic field.

An e.m.f. is induced across the ends of the coil.

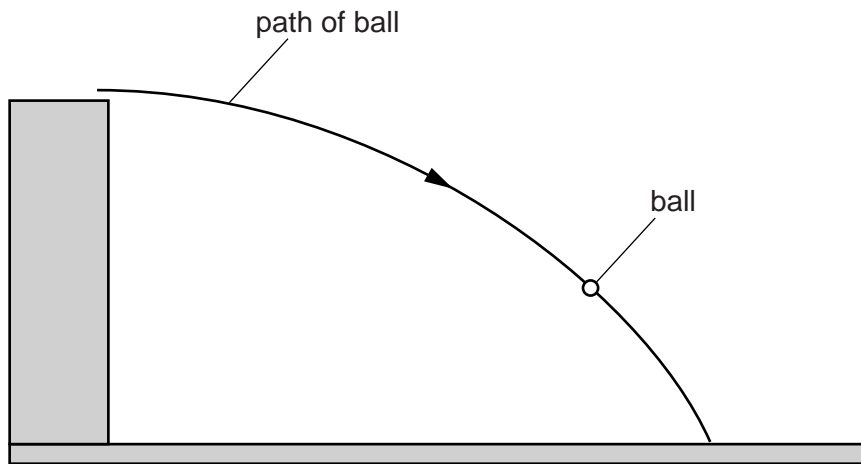
State two factors that affect the magnitude of the induced e.m.f.

1. ....

2. ....

[2]

- 3 Fig. 3.1 shows the path of a ball thrown from the top of a building.



**Fig. 3.1**

The ball is shown at one position in its path.

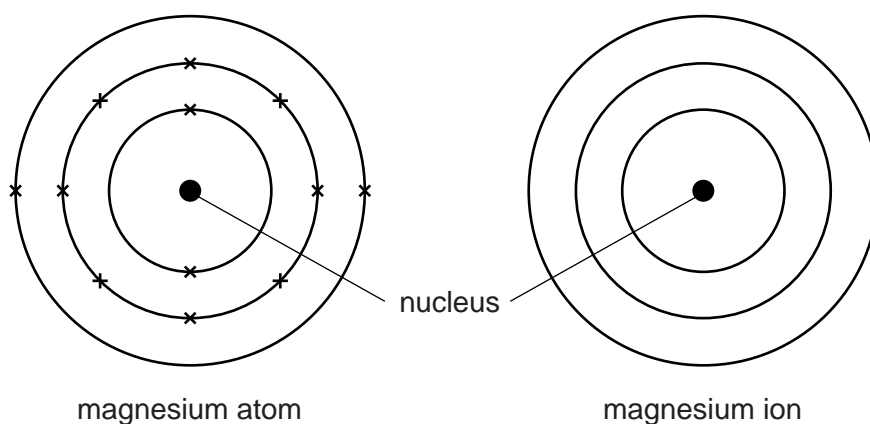
- (a) On Fig. 3.1, draw an arrow to show the direction of the force of gravity acting on the ball. [1]
- (b) On the path of the ball shown in Fig. 3.1
- (i) mark where the ball has maximum potential energy and label this point **P**, [1]
  - (ii) mark where the ball has maximum kinetic energy and label this point **K**. [1]
- (c) The ball accelerates because of the force of gravity.

Explain what is meant by *acceleration*.

.....

..... [1]

- 4 Fig. 4.1 shows the electronic structure of a magnesium atom.



**Fig. 4.1**

- (a) On Fig. 4.1, complete the electronic structure for the magnesium ion. [1]
- (b) Magnesium burns in carbon dioxide to form magnesium oxide and carbon.

The equation for the reaction is



The relative molecular mass,  $M_r$ , of carbon dioxide is 44.

[ $A_r$ : Mg, 24; O, 16; C, 12]

Complete the following sentences.

44 g of carbon dioxide produces .....g of magnesium oxide and .....g of carbon.

4.4 g of carbon dioxide produces .....g of magnesium oxide and .....g of carbon.

1.1 g of carbon dioxide produces .....g of magnesium oxide. [4]

- (c) Magnesium oxide is a white solid with a high melting point.

State the type of bonding present in magnesium oxide.

..... [1]

5 A path is made by laying concrete slabs side-by-side.

Small gaps are left between the slabs.

The gaps are filled with sand.

Fig. 5.1 shows the slabs on a cold day.

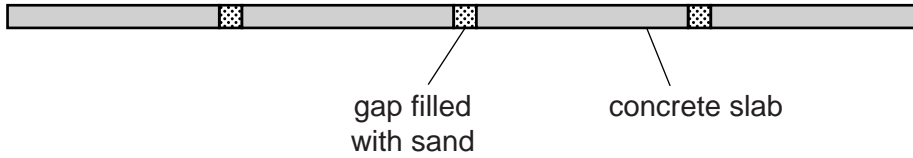


Fig. 5.1

(a) On a hot day, the gaps are smaller than on a cold day.

Explain why.

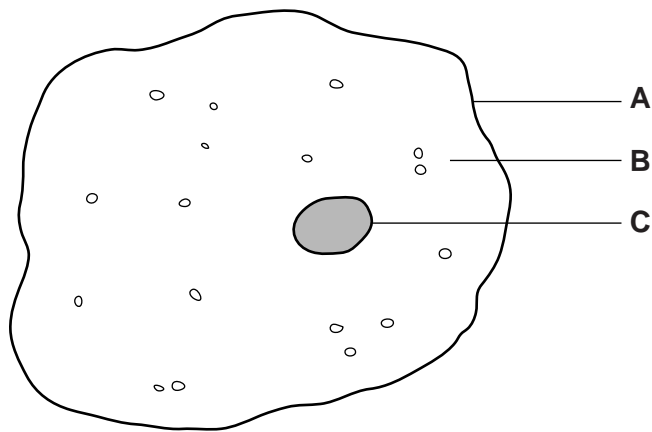
.....  
..... [1]

(b) Another path is laid on a cold day with no gaps between the concrete slabs.

Suggest what may happen to this path on a very hot day.

.....  
..... [1]

6 Fig. 6.1 shows an animal cell as seen using a microscope.



**Fig. 6.1**

(a) (i) In Table 6.1, name each of the labelled parts.

**Table 6.1**

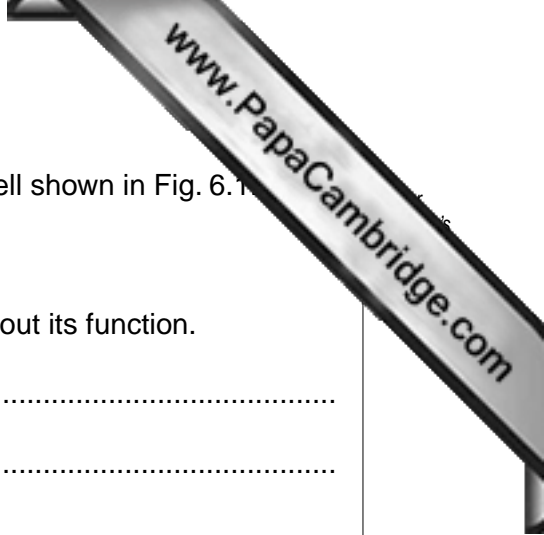
letter	name
<b>A</b>	
<b>B</b>	
<b>C</b>	

[3]

(ii) State a function of part A.

.....

..... [1]



(b) The structure of a red blood cell is different from that of the cell shown in Fig. 6.1.

State **two** ways in which the structure is different.

Explain how each difference helps the red blood cell to carry out its function.

difference 1 .....

explanation 1 .....

difference 2 .....

explanation 2 .....

[6]

7 Alpha-particles, beta-particles and gamma-rays are types of emission from radioactive sources.

(a) State the type of emission that

(i) is the most penetrating, ..... [1]

(ii) consists of two protons and two neutrons. .... [1]

(b) A nucleus emits a beta-particle.

State the change that occurs in the nucleus.

..... [1]

(c) A radioactive source is used in a laboratory experiment.

State two precautions that are taken to use the source safely.

1. ....

2. ....

[2]



8 Permanent magnets and electromagnets may be used to separate magnetic materials from non-magnetic materials.

(a) State a difference between magnetic materials and non-magnetic materials.

.....  
..... [1]

(b) An electromagnet is used in a simple lock.

Fig. 8.1 shows part of this lock.

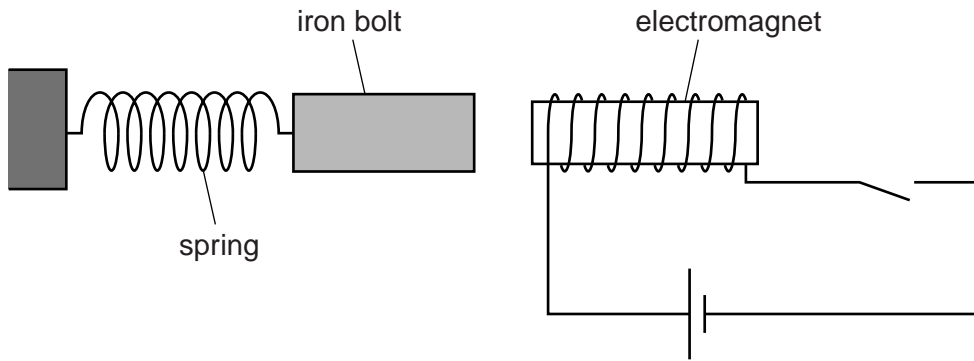


Fig. 8.1

When the current is switched on, the iron bolt is pulled towards the electromagnet to lock the door.

When the current is switched off, the spring pulls the iron bolt away from the electromagnet, unlocking the door.

(i) Suggest why the bolt is made of iron rather than steel.

.....  
.....  
..... [1]

(ii) The connections to the cell in Fig. 8.1 are reversed.

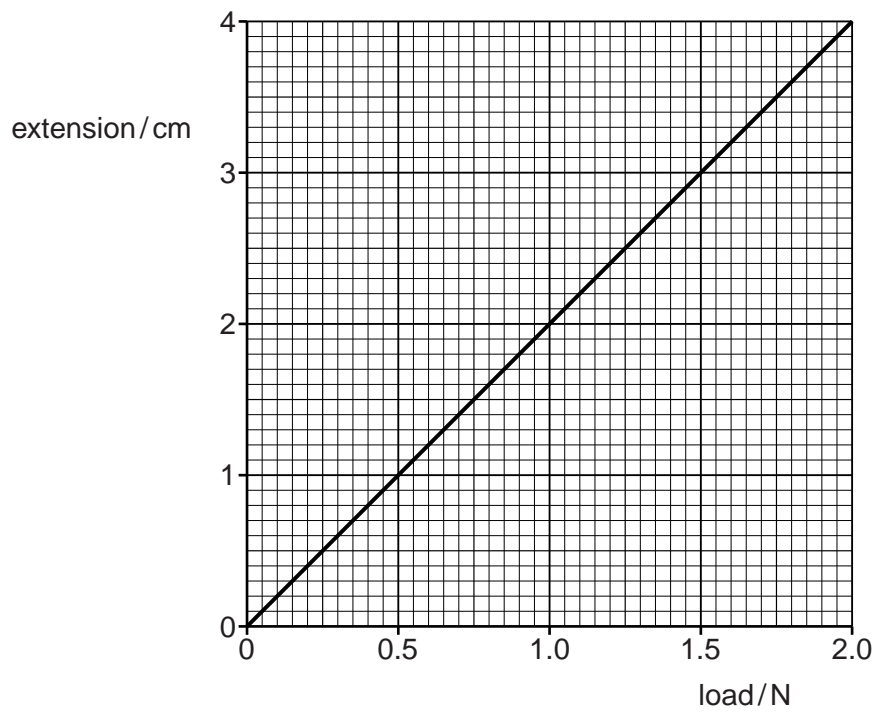
State the difference, if any, that this makes to the working of the lock.

.....  
..... [1]

(iii) State **two** ways in which the strength of the electromagnet may be increased.

1. ....  
2. ....

(c) Fig. 8.2 shows how the extension of the spring varies with the load on the spring.



**Fig. 8.2**

Use Fig. 8.2 to find the load on the spring when it has an extension of 1.6 cm.

load = ..... N [1]

- 9 Study the reaction scheme shown in Fig. 9.1.

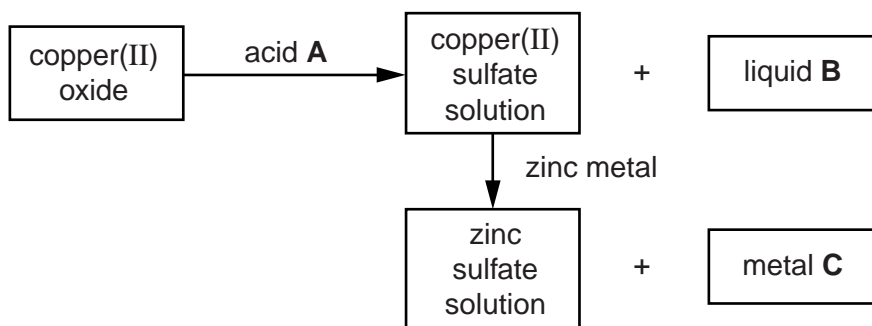


Fig. 9.1

- (a) Identify **A**, **B** and **C**.

acid **A** .....

liquid **B** .....

metal **C** .....

[3]

- (b) Describe how copper(II) sulfate crystals may be obtained from the copper(II) sulfate solution.

.....  
 .....  
 ..... [2]

- (c) State **two** general physical properties of substance **C** that show it is a metal.

1. ....

2. ....

[2]

10 In an experiment, 20 seeds of the same species are placed in each of four tubes as shown in Fig. 10.1.

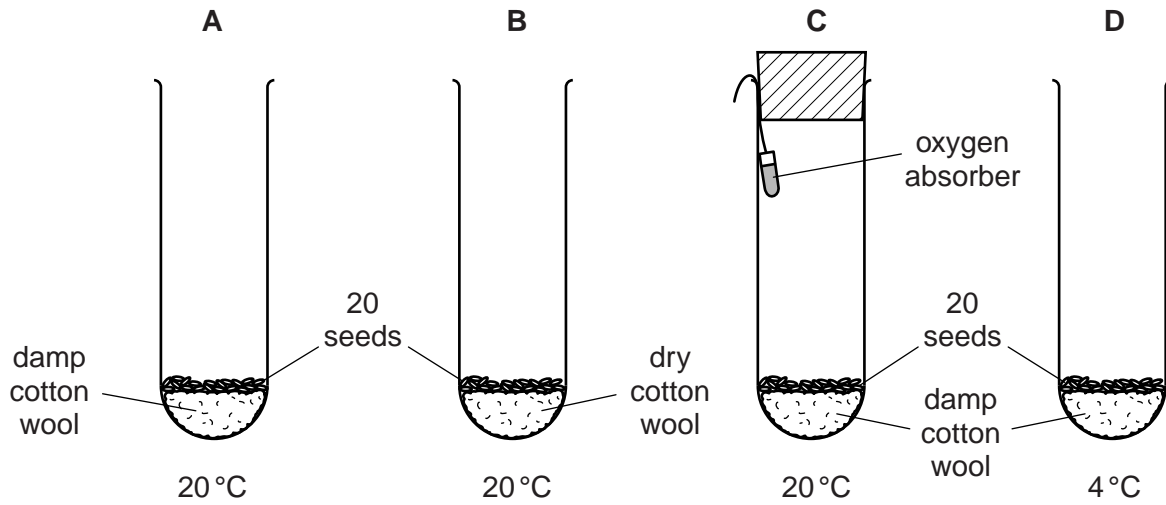


Fig. 10.1

The conditions for each set of seeds are shown in Fig. 10.1.

(a) Suggest why more than one seed is used in each tube.

.....  
 ..... [1]

(b) After several days, all the seeds in tube A germinate.

None of the seeds in tubes B, C or D germinate.

(i) Suggest a change that could be made to tube B so that the seeds germinate.

.....  
 ..... [1]

(ii) State a reason why germination does not occur in tube C.

Explain your answer.

reason .....

explanation .....

..... [2]

(iii) State a reason why germination does not occur in tube D.

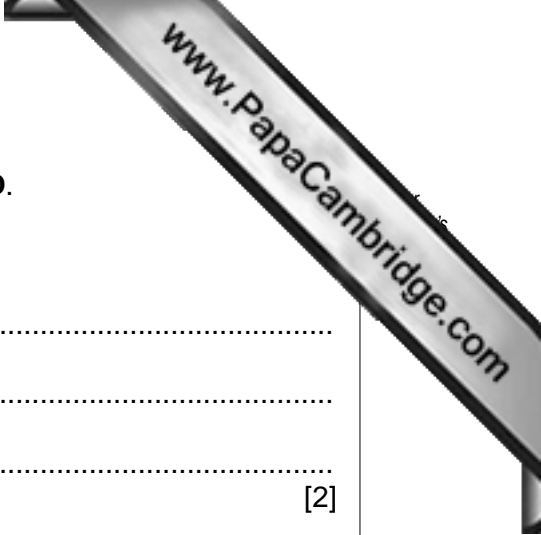
Explain your answer.

reason .....

explanation .....

.....

[2]



11 Fig. 11.1 shows a series circuit.

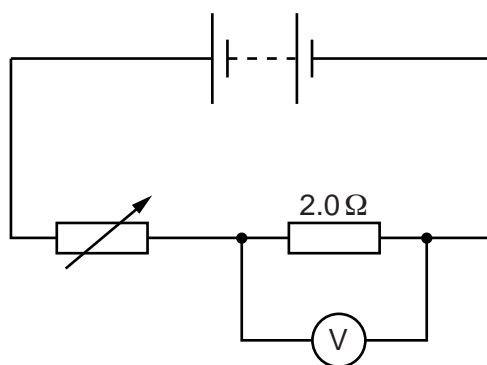


Fig. 11.1

A voltmeter measures the potential difference (p.d.) across the 2.0 Ω resistor.

(a) The variable resistor is adjusted so that the voltmeter reads 1.0V.

(i) Calculate the current in the 2.0 Ω resistor.

current = ..... A [2]

(ii) The p.d. across the battery terminals is 5.0V.

The voltmeter reads 1.0V.

Calculate the p.d. across the variable resistor.

p.d. = ..... V [1]

(b) The resistance of the variable resistor is increased.

State what happens, if anything, to

(i) the current in the variable resistor, ..... [1]

(ii) the p.d. across the 2.0 Ω resistor. .... [1]

12 Fig. 12.1 shows the apparatus used to pass steam over heated zinc.

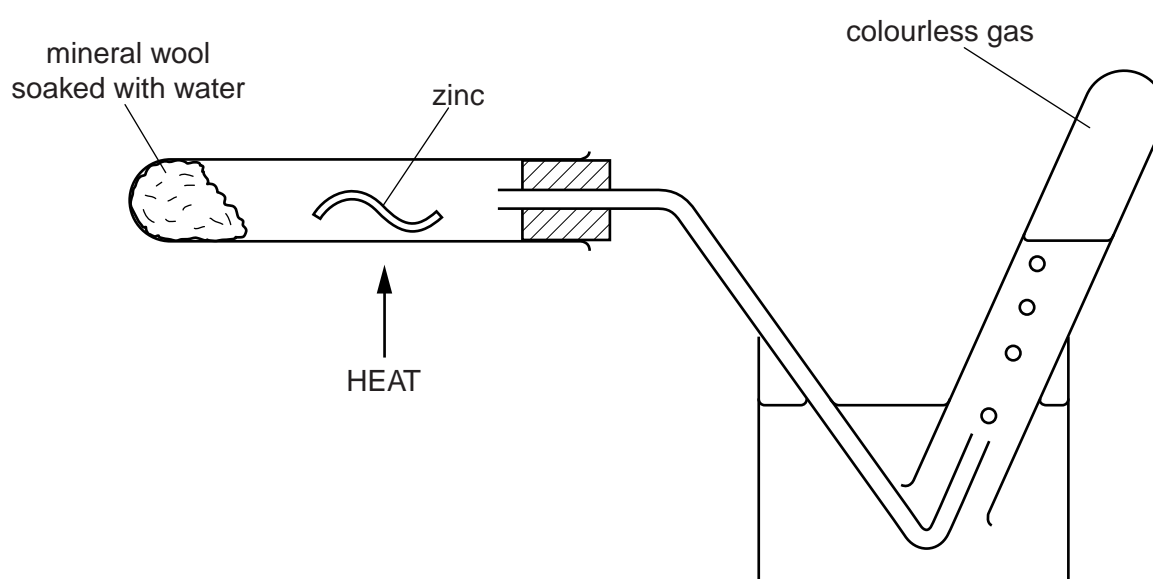
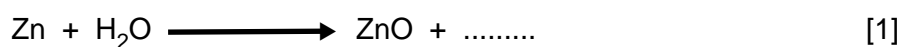


Fig. 12.1

The products of the reaction are zinc oxide and a colourless gas.

(a) Complete the equation for the reaction.



(b) Explain how the equation in (a) shows that zinc is oxidised and steam is reduced during the reaction.

.....  
 .....  
 ..... [2]

(c) Zinc is used to prevent iron from rusting.

(i) State the name of each of the two substances in air which cause iron to rust.

..... and ..... [2]

(ii) State the name of the process where iron is treated with zinc to prevent rusting.

..... [1]

13 Five similar fields are used for growing maize. They are treated with different quantities of nitrogen-containing fertiliser.

The quantities of fertiliser added and the crop yields are shown in Fig. 13.1.

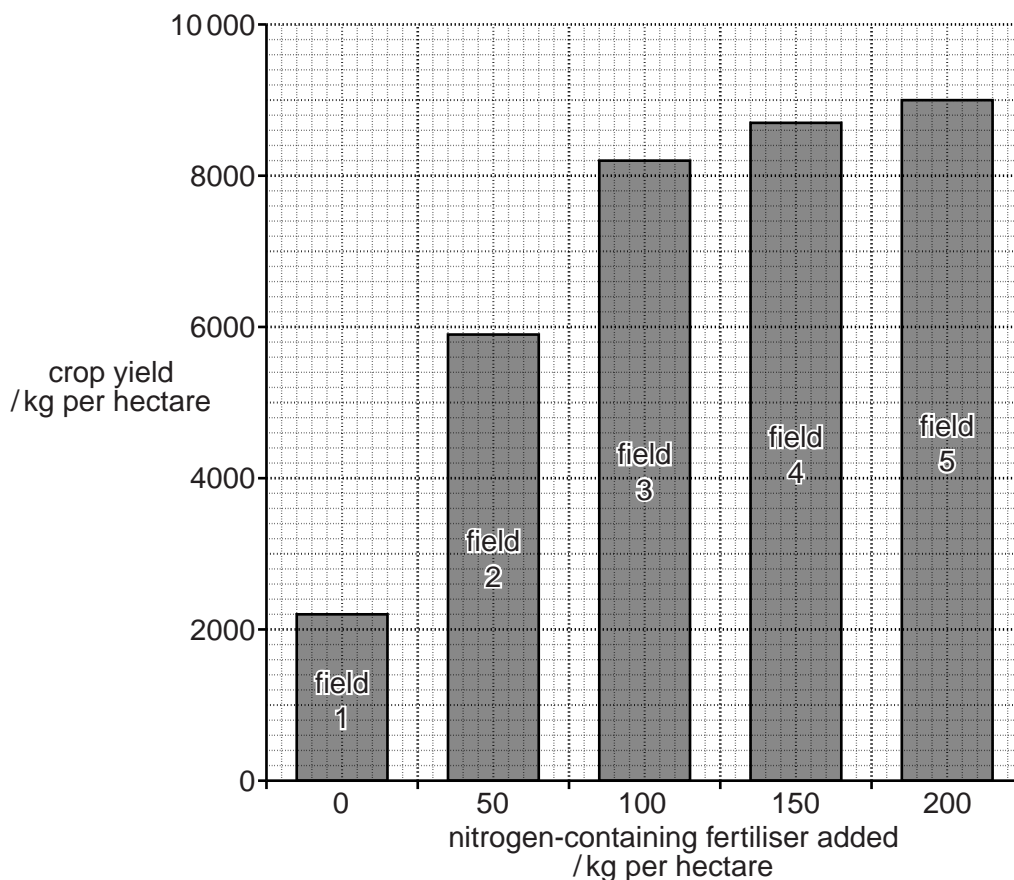


Fig. 13.1

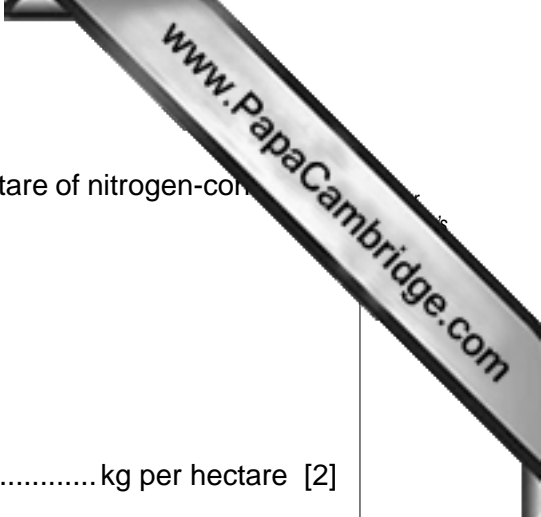
(a) Explain how nitrogen-containing ions are able to pass from soil into a plant.

.....  
 .....  
 ..... [2]

(b) (i) Using Fig. 13.1, state the crop yield when no nitrogen-containing fertiliser is added.

..... kg per hectare [1]





- (ii) Calculate the **increase** in crop yield when 100 kg per hectare of nitrogen-containing fertiliser is used, rather than 50 kg per hectare.

Show your working.

..... kg per hectare [2]

- (iii) Explain why the addition of nitrogen-containing fertiliser produces an increase in the yield of maize.

.....

.....

.....

..... [2]

- (iv) Use Fig. 13.1 to suggest the crop yield when 250 kg per hectare of nitrogen-containing fertiliser is used.

..... kg per hectare [1]

- (c) Explain why most forms of life are dependent on plants carrying out photosynthesis.

.....

.....

.....

..... [2]

14 The first member of the alkene homologous series is ethene.

Ethene is an unsaturated hydrocarbon.

(a) State the general formula of the alkenes.

..... [1]

(b) Ethene reacts with hydrogen to form ethane.

(i) State the type of reaction that takes place when ethene reacts with hydrogen.

..... [1]

(ii) State, in terms of bonds, how the structure of ethene differs from ethane.

..... [1]

(c) Ethene undergoes polymerisation to form poly(ethene).

Draw the structure of poly(ethene).

[2]

15 (a) What is coronary heart disease?

..... [1]

(b) State **two** causes of coronary heart disease.

1. ....

.....

2. ....

.....

[2]

16 Fig. 16.1 shows a vernier scale and a micrometer scale.

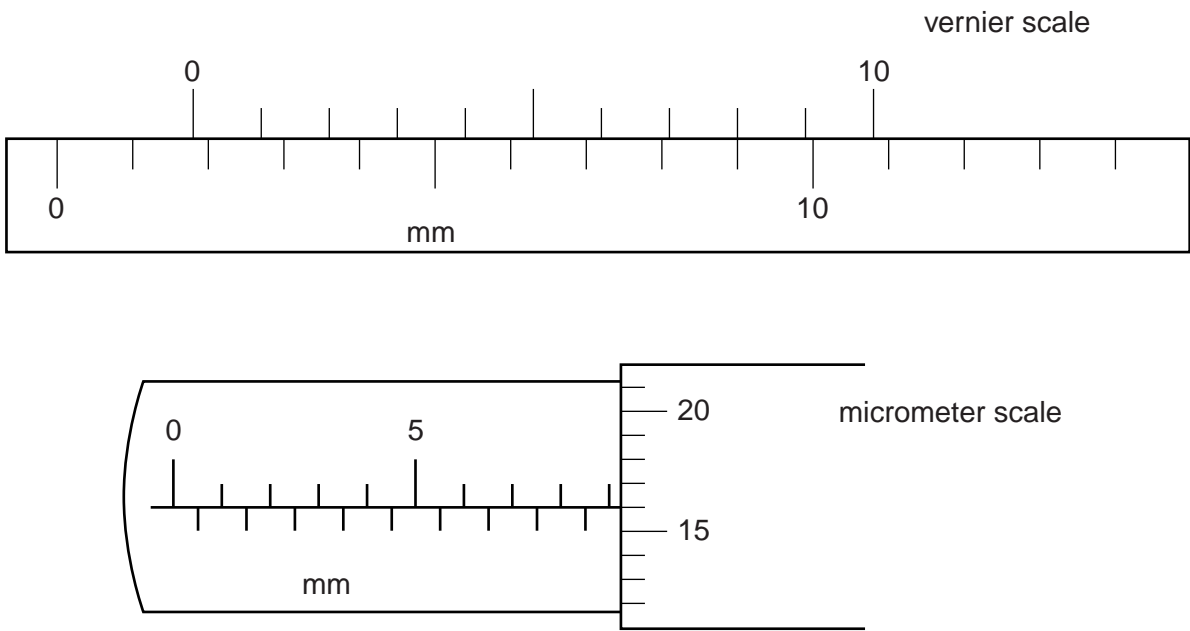


Fig. 16.1

- (a) The reading on the vernier scale is .....mm. [1]
- (b) The reading on the micrometer scale is .....mm. [1]

- 17 A bar is placed on a pivot and blocks of mass  $m_1$  and  $m_2$  are placed on the bar, as shown in Fig. 17.1.

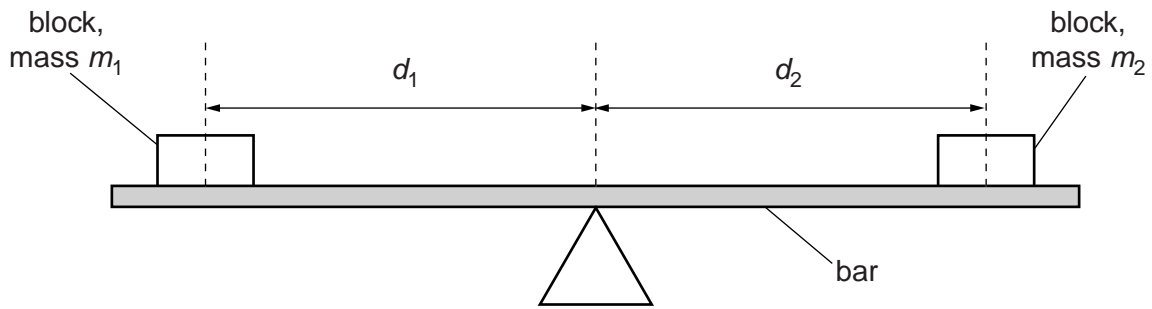


Fig. 17.1

The bar is horizontal.

The distances  $d_1$  and  $d_2$  of the blocks from the pivot are shown in Fig. 17.1.

The masses and their distances from the pivot may be changed so that the bar stays horizontal, tips clockwise or tips anticlockwise.

Fig. 17.2 shows the bar tipping anticlockwise.

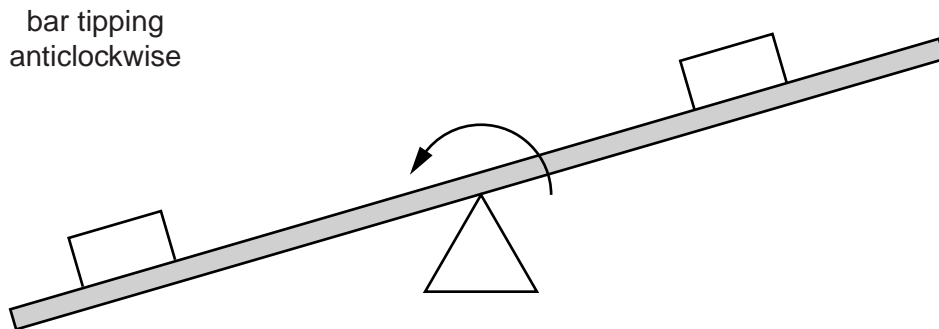


Fig. 17.2

Different masses  $m_1$  and  $m_2$  and distances  $d_1$  and  $d_2$  are shown in Table 17.1.

Complete Table 17.1 by stating whether the bar is horizontal, tips clockwise or tips anticlockwise. The first line has been completed for you.

**Table 17.1**

$m_1/g$	$d_1/cm$	$m_2/g$	$d_2/cm$	horizontal, tips clockwise, tips anticlockwise.
20	15	20	15	horizontal
20	15	20	20	
30	15	20	15	
10	15	5	15	
30	10	25	12	

[2]

- 18 (a) Phosphine contains phosphorus and hydrogen and has the formula  $\text{PH}_3$ .

Phosphorus is in Group V of the Periodic Table.

Complete Fig. 18.1 to show the arrangement of the outer-shell electrons in a molecule of phosphine.

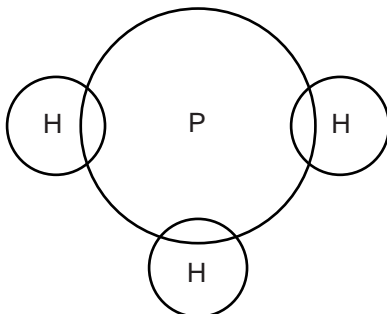


Fig. 18.1

[2]

- (b) Complete the following sentences.

The type of bonding present in phosphine is .....

Compounds with this type of bonding have ..... melting points and are formed when a ..... combines with a

.....

[3]

19 Fig. 19.1 shows a pin in front of a plane mirror.

A ray of light is incident on the mirror as shown.

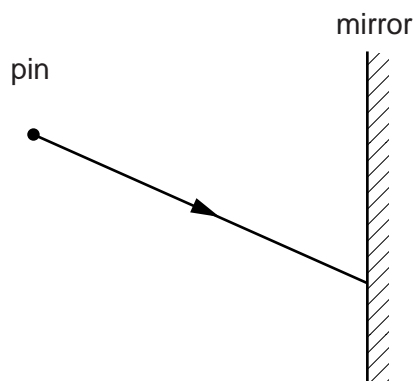


Fig. 19.1

On Fig. 19.1,

- (a) draw the normal at the point where the ray is incident on the mirror, [1]
- (b) draw the reflected ray, [1]
- (c) mark the position of the image of the pin with an X. [1]

20 The following is a list of gases.

acetylene	ammonia	carbon dioxide	carbon monoxide
ethane	nitrogen	oxygen	sulfur dioxide

Use the list to complete the following sentences.

Each gas may be used once, more than once or not at all.

- (a) The gas produced by complete combustion of hydrocarbon fuels is ..... [1]
- (b) The gases used in welding are ..... and ..... [1]
- (c) The gas that makes up most of the air is ..... [1]
- (d) The gas that turns Universal Indicator red is ..... [1]

Permission to reproduce items where third-party owned material protected by copyright is included has been sought and cleared where possible. Every reasonable effort has been made by the publisher (UCLES) to trace copyright holders, but if any items requiring clearance have unwittingly been included, the publisher will be pleased to make amends at the earliest possible opportunity.

University of Cambridge International Examinations is part of the Cambridge Assessment Group. Cambridge Assessment is the brand name of University of

**DATA SHEET**  
**The Periodic Table of the Elements**

		Group								
I	II	III	IV	V	VI	VII	0			
7 <b>Li</b> Lithium 4	9 <b>Be</b> Beryllium 4	1 <b>H</b> Hydrogen 1	11 <b>B</b> Boron 5	12 <b>C</b> Carbon 6	14 <b>N</b> Nitrogen 7	16 <b>O</b> Oxygen 8	19 <b>F</b> Fluorine 9	20 <b>Ne</b> Neon 10	4 <b>He</b> Helium 2	
23 <b>Na</b> Sodium 12	24 <b>Mg</b> Magnesium 12	27 <b>Al</b> Aluminium 13	28 <b>Si</b> Silicon 14	31 <b>P</b> Phosphorus 15	32 <b>S</b> Sulfur 16	35.5 <b>Cl</b> Chlorine 17	40 <b>Ar</b> Argon 18			
39 <b>K</b> Potassium 20	40 <b>Ca</b> Calcium 20	45 <b>Sc</b> Scandium 21	48 <b>Ti</b> Titanium 22	55 <b>Mn</b> Manganese 25	56 <b>Fe</b> Iron 26	59 <b>Co</b> Cobalt 27	59 <b>Ni</b> Nickel 28	64 <b>Cu</b> Copper 29	65 <b>Zn</b> Zinc 30	
85 <b>Rb</b> Rubidium 38	88 <b>Sr</b> Strontium 38	89 <b>Y</b> Yttrium 39	91 <b>Zr</b> Zirconium 40	93 <b>Nb</b> Niobium 41	101 <b>Ru</b> Ruthenium 44	103 <b>Rh</b> Rhodium 45	106 <b>Pd</b> Palladium 46	108 <b>Ag</b> Silver 47	112 <b>Cd</b> Cadmium 48	
133 <b>Cs</b> Caesium 56	137 <b>Ba</b> Barium 56	139 <b>La</b> Lanthanum 57	178 <b>Hf</b> Hafnium 72	181 <b>Ta</b> Tantalum 73	190 <b>Os</b> Osmium 76	192 <b>Ir</b> Iridium 77	195 <b>Pt</b> Platinum 78	197 <b>Au</b> Gold 79	201 <b>Hg</b> Mercury 80	
223 <b>Fr</b> Francium 88	226 <b>Ra</b> Radium 88	227 <b>Ac</b> Actinium 89								
58–71 Lanthanoid series										
90–103 Actinoid series										
140 <b>Ce</b> Cerium 58	141 <b>Pr</b> Praseodymium 59	144 <b>Nd</b> Neodymium 60	147 <b>Pm</b> Promethium 61	150 <b>Sm</b> Samarium 62	152 <b>Eu</b> Europium 63	157 <b>Gd</b> Gadolinium 64	162 <b>Dy</b> Dysprosium 66	165 <b>Ho</b> Holmium 67	169 <b>Tm</b> Thulium 69	
232 <b>Th</b> Thorium 90	231 <b>Pa</b> Protactinium 91	238 <b>U</b> Uranium 92	237 <b>Np</b> Neptunium 93	244 <b>Pu</b> Plutonium 94	243 <b>Am</b> Americium 95	247 <b>Cm</b> Curium 96	251 <b>Cf</b> Californium 98	252 <b>Es</b> Einsteinium 99	258 <b>Md</b> Mendelevium 101	
				159 <b>Tb</b> Terbium 65	159 <b>Dy</b> Dysprosium 66	167 <b>Er</b> Erbium 68	173 <b>Yb</b> Ytterbium 70	175 <b>Lu</b> Lutetium 71	260 <b>Lr</b> Lawrencium 103	
				247 <b>Bk</b> Berkelium 97	247 <b>Cm</b> Curium 96	257 <b>Fm</b> Fermium 100	259 <b>No</b> Nobelium 102	260 <b>Lr</b> Lawrencium 103		

a = relative atomic mass  
X = atomic symbol  
b = atomic (proton) number

The volume of one mole of any gas is 24dm<sup>3</sup> at room temperature and pressure (r.t.p.).